

# KING FAHAD ISLAMIC PRI. SCH.



**2021 COVID-19 REVISION WORK (06)**  
**CLASS : P.7**  
**SUBJECT : ENGLISH**

Name: \_\_\_\_\_ Stream \_\_\_\_\_

INDEX NO: \_\_\_\_\_ / \_\_\_\_\_ Date: \_\_\_\_\_

In each of the questions 1-5, fill in the space with a suitable word(s).

1. Mr. Kasoma advertised his farm products..... to get more contracts.
2. Neither the teacher .....the student reported the case.
3. She will..... come back by Tuesday next week.
4. Jaliida..... whom I told you, has come late again.
5. It is now an hour..... I started writing this exercise.

In each of the questions 6-15. use the correct form of the words in brackets to complete the sentences.

6. My uncle is a..... married man. (happy)
7. The driver..... the police man's advice last week. (seek)
8. The girls..... praised by the Imam when they recited the Quran. (to be)
9. The..... of the late G.W. Kasajja was widely known. (die)
10. The new teacher's .....of most words in English is not clear, (pronounce)
11. The condition of the patient is..... than it was last week. (ill)
12. All participants signed the..... register. (attend)
13. My father passed the..... interview. (write)
14. Her..... expression was not clear to us. (face)
15. Soil..... is caused by poor methods of farming. (erode)

In questions 16-18, give one word for the underlined group of words.

16. A female sheep charged at the young girl.  
.....  
.....
17. The man who sells fish has no smoked fish.

.....  
.....  
18. We bought pens and rulers at the place where stationery is sold.

.....  
.....  
In questions 19-20, rewrite the words in alphabetical order.

19. cup , bag , flask , doll

.....  
.....  
20. pair , pest , pancake , pest

.....  
.....  
In questions 21-23, rewrite the sentences giving the plural form of the underlined words.

21. The master of ceremonies welcomed the chief guest.

.....  
.....  
22. The mousetrap could not work properly.

.....  
.....  
23. The executive director introduced a new tax.

.....  
.....  
In questions 24-26, write the English meaning of the following abbreviations.

24. PS .....

25. RSVP .....

26. NB .....

In questions 27-28, rewrite and give the opposite of the underlined words.

27. Masoud was very patient with everybody.

.....  
.....  
28. Our head boy's hand writing is illegible.

.....  
.....  
29. Bashir Okuti was born on 10/1/2001, admitted to King Fahad Islamic Primary school in Primary seven from Seeta Islamic P.O.BOX Jinja. He filled an application form in February, 2021, fill in what you think were his words.

ADMISSION FORM 2021

COMPLETE THIS FORM IN CAPITAL LETTERS.

Name in full: .....

D.O.B: ..... Age: .....

Sex: ..... Nationality: .....


Class applied for: .....

Previous school: .....

Address: .....

Applicant's signature:..... Date: .....

30. Pictures 1-6 tell a story, study them carefully and write one sentence for each picture to describe what is happening, the following words can help you, Bees, sting, swimming pool, football.



1. Picture 1:  
.....

2. Picture 2:  
.....

3. Picture 3:  
.....

4. Picture 4:  
.....

5. Picture 5:  
.....

6. Picture 6:  
.....

7. Why did the bees sting the boy?  
.....

.....  
.....  
8. How did the boys escape from the bees?

.....  
.....  
9. Where are the boys playing from according to picture one?

.....  
.....  
10. Suggest another suitable title to the story.

KING FAHAD

# KING FAHAD ISLAMIC PRI. SCH.



## 2021 COVID-19 REVISION WORK (07)

**CLASS : P.7**

**SUBJECT : ENGLISH**

Name: \_\_\_\_\_ Stream \_\_\_\_\_

INDEX NO: \_\_\_\_\_ / \_\_\_\_\_ Date: \_\_\_\_\_

For questions 1 — 5, fill in the spaces with a correct form of word.

1. Sami is \_\_\_\_\_ of his elder brother.
2. He drove his car \_\_\_\_\_ that he knocked down an old woman.
3. Mother paid the \_\_\_\_\_ after he had given her meat.
4. She is the journalist \_\_\_\_\_ we travelled with yesterday.
5. \_\_\_\_\_ a pretty girl Hanifah is!

Use each of the words in your own sentence to show that you know their difference in meaning.

6. there's .....
7. Theirs .....

Rewrite the sentences as instructed in the bracket

8. Masinde is not an orphan. Jamil is not an orphan. (Join the two sentences using..... and neither..... )  
.....  
.....
9. The girls forgot to hand in their work. The boys forgot to hand in their work. (Rewrite as one sentence using.....as well as..... )  
.....  
.....
10. It is not necessary for us to fight in an examination room. (Rewrite and use..... needn't.....)  
.....  
.....
11. The teacher's bag got lost. The teacher has gone home. (Rewrite as one sentence using..... whose..... )  
.....  
.....
12. All trees in the school compound have leaves. (Rewrite the sentence beginning: Every.....)  
.....  
.....
13. Everybody speaks English at school. (Rewrite the sentence beginning: English.....)

.....  
.....  
14. "Why," asked the teacher, "were you absent yesterday"? (Rewrite the sentence beginning: The teacher wanted.....)

.....  
.....  
15. Both Faris and Mariam are nuns. (Rewrite as two separate sentences.)

.....  
.....  
16. What a big building this is' (Rewrite and uses..... very.....)

.....  
.....  
17. Let us go out,.....? (Supply the correct question tag.)

18. My mother lay under the tree and fell asleep. (Rewrite and begin: Having )

.....  
.....  
19. Hardly had Malikiyya handed in her question paper when she went out. (Rewrite the sentence and begin: Immediately.....)

.....  
.....  
20. If you do not read your books, you will fail the examinations. (Rewrite and uses..... unless.....)

.....  
.....  
21. The girls hostel caught fire last Tuesday (Rewrite and punctuate the sentence correctly.)

.....  
.....  
22. The girl is very young. She cannot start school this year. (Rewrite as one sentence using..... enough.....)

.....  
.....  
23. Lule bought a pen. It was his first pen. The pen was green in colour. The pen was plastic. (Rewrite as one sentence without using that, which or and)

.....  
.....  
24. The primary seven class comprises fifty candidates. (Rewrite the sentence using..... consists....)

25. If you work hard, you get good yields. (Rewrite the sentence using: The.....the.....)

.....  
.....

26. Olupot was healed. Olupot did not go to the hospital. (Rewrite as one sentence beginning: Although.....)

.....  
.....

27. Juma did not see the snake. The snake bit Juma. (Rewrite as one sentence beginning: If Juma had.....)

.....  
.....

28. Read the passage below and in full sentences answer the questions that follow

One night, I woke up suddenly from my deep sleep. There was a strange smell in the air. It was smoke. I looked out through my window and saw a thick black cloud of smoke coming from the direction of the chicken house. A lot of chicken were flying about frantically. Some of them were violently flapping their wings. The poor chickens were trying to escape the fire through the wire netting. The fire was on the left side of the chicken house. My father hacked the door of the house with an axe to let the chickens out. Then we sprayed water on the house that extinguished the fire.

Luckily, only a few chickens were burnt, while the rest were scorched here and there. The good news was we had chicken for our meals the next few days.

Questions:

1. What is the passage about?

.....  
.....

2. At what time did the fire breakout? ;

.....  
.....

3. Where was the fire?

.....  
.....

4. Why were the chicken flapping their wings violently?

.....  
.....

5. What did the writers' father use to open the chicken house?

.....  
.....

6. How was the fire stopped?

- .....  
.....  
7. What made the writer happy according to the passage?  
.....  
.....  
8. Give a word or group of words to mean the same as the underlined words in the passage.  
    (a) extinguished .....  
    (b) hacked .....  
9. Suggest a suitable title to the passage.  
.....  
.....

**29. The sentences below are in wrong order. Re-arrange them to meaningful story about computers**

1. The CPU processes and stores all computer information.
2. Computers are machines that make work easy.
3. These three parts help the user to enter information.
4. These are the input, the processor and the output.
5. To ease work, every computer uses three parts.
6. Such information can be read and kept for future use.
7. Lastly, the output part has a printer.
8. Secondly, in the processor stage, we find the central processing unit known as the CPU.
9. The printer produces written information on paper.
10. First in the output part, we find the key board, the monitor and the mouse.

.....  
.....  
.....  
.....  
.....  
.....  
.....  
.....  
.....  
.....  
.....  
.....  
.....  
.....  
.....

**30. Read the announcement below and answer the questions that follow in full sentences. :**

**DEATH ANNOUNCEMENT**

The family of Mr. And Mrs. Kabaala of Hoima, with deep sorrow, announces the untimely death of their son Asimwe Farid, which occurred last Friday. The deceased died in an accident at Kisubi-Entebbe Road.



A prayer will be held at kihhi mosque Hoima today 3<sup>rd</sup> July 2021. Burial will take place at the deceased's ancestral ground at Bwikya Village 17km from Hoima Town the same dat at 2pm. Informed are his work mates in Bank of Uganda-Kabaale Branch, relatives, in-laws and friends. Innalillaahi wa inna ilaihi rajiuuna.

Questions:

1. What is the announcement about?

.....  
.....

2. Who made the announcement?

.....  
.....

3. Who died in the accident?

.....  
.....

4. What shows that deceased was a catholic?

.....  
.....

5. Where will the burial take place?

.....  
.....

6. How far is it from Hoima Town to Bukya village?

.....  
.....

7. Where was the deceased working?

.....  
.....

8. For whom is the announcement intended?

.....  
.....

9. Give a word or a group of mean the same as the underlined words in announcement.

- a) The deceased .....
- b) Occurred.....

# KING FAHAD ISLAMIC PRI. SCH.



**2021 COVID-19 REVISION WORK (06)**  
**CLASS : P.7**  
**SUBJECT : MATHEMATICS**

Name: \_\_\_\_\_ Stream \_\_\_\_\_  
INDEX NO: \_\_\_\_\_ / \_\_\_\_\_ Date: \_\_\_\_\_

1. Find the product of 28 and 4.
2. Write 2009 in words.
3. What is the value of  $1 - 8$ ?
4. Find the next number in the sequence: 0, 3, 1, 4, 2, \_\_\_\_\_
5. If  $p=q$ ,  $q=2$  and  $r=4$  work out:  $qr + p$ .
6. What is the complement of  $67^\circ$ ?

7. Given that set  $M = \{2, 5, 8\}$  and set  $N = \{6, 9\}$  find  $M \cap N$ .

8. Calculate the square root of 0.25.

9. Sarah slept for 2 hours and 15 minutes. At what time did she wake up if she went to bed at 8.30 p.m.?

10. Using a pair of compasses, a pencil and a ruler only, bisect the line below.

11. If 4 plates cost sh.24,000, how much will 8 such plates cost at the same rate?

12. Solve:  $5x - (x+4) = 4$ ,

13. Kato scored the following marks in a game: 4, 6, 2, 4, 6, 4 and 0. Find his modal mark.

14. Uthman bought a watch at sh. 15000 and sold it at a loss of 20%. At what price did he sell the watch?

15. Given that  $y = X - 1$ , complete the table below.

x	.....	0	.....	7
y	2	.....	4	6

16 a) A man put sh.120,000 in a savings society which gives a simple interest of 5% per year. Find the total amount with the savings society after 4 months.

b) A trader has a bundle of ten thousand shilling notes number consecutively from AM8964167 to AM8964266.

How much money does the trader have?

17 a) Solve:  $7m + 4 = 3m + 20$

b) Simplify:  $(5p - 4q) - (4q - 5p)$

18. In a class of 48 pupils,  $\frac{3}{4}$  like Maths,  $\frac{2}{3}$  of the remainder like English and the rest like SST like SST?

19. Convert 54k.p.h to m/s.

20. The pie chart below represents Taban's expenditure for the month of June. Use it to answer the questions that follow.



(a) Find the value of  $m$ .

(b) If he spent sh.72,000 on rent, how much money did he earn that month?

(c) How much more money did he spend on savings than on transport?

# KING FAHAD ISLAMIC PRI. SCH.



**2021 COVID-19 REVISION WORK (07)**  
**CLASS : P.7**  
**SUBJECT : MATHEMATICS**

Name: \_\_\_\_\_ Stream \_\_\_\_\_  
INDEX NO: \_\_\_\_\_ / \_\_\_\_\_ Date: \_\_\_\_\_

1. Add:  $0.41 + 2$ .

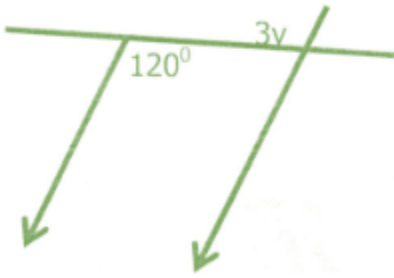
2. Express CXLX IN Hindu Arabic.

3. Round off 49.96 to the nearest tenths.

4. Increase sh.12000 in the ratio of 5.3.

5. Given that  $a = 5$  and  $b=0$ . Find the value of  $2a + 5$ .

6. Find the value of  $y$ .



7. Simplify  $5y-6m-3m+7y$ .

8. In the space below construct angle of  $150^\circ$  with the help of a ruler, pencil and a pair of compasses only.

9. Write XCIV in Hindu Arabic numerals.

10. Ochan had 40 Km to cover after travelling  $\frac{3}{5}$  of the journey. How long was the journey?

11. Find the area of the shaded part of the circle.

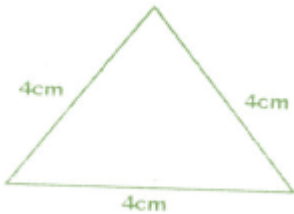


12. The bearing of town P from town Q is  $060^\circ$ . What is the bearing of town Q from town P?



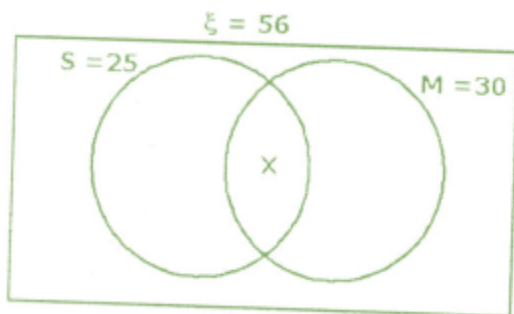
13. Change 10010 to base 10.

14. How many lines of symmetry does the figure below have?



15. In a class of 56 pupils, 25 like Science (S), 30 like Mathematics (M) x like both subjects and 2 like neither of the subjects.

(a) Complete the Venn diagram below.



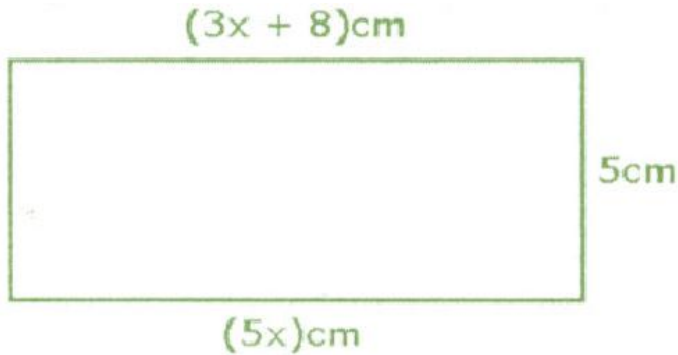
Find the value of X.

How many pupils like Science only?

What number has been expanded to give:  $(8 \times 10^3) + (6 \times 10^2) + (3 \times 10^1) +$

16. Express 13000 in Scientific notation.

17. The figure below is a rectangle. Study it and answer the questions that follow.



$(3x + 8)\text{cm}$

(a) Find the value of X.

(b) Calculate its area.

(c) Work out its perimeter.

18. Jassim wrote three digit numbers using the following digits: 6, 7, and 9 without repeating any of the digits in each number.

(a) Write down the possible three numbers.

(b) What is the sum of the least and greatest number written?

(c) What is the probability of John writing a number bigger than 600?

19. A car rode North from town A for a distance of 40 Km to town B, then he rode to the west for 30 Km to town C.

(a) Draw an accurate diagram to show her journey using a scale of 1 cm 10Km.

(b) Find the shortest distance between town C and town A.

20. A lady went shopping with a sh.50,000 note and bought the following items:

2 1h Kg. of meat at sh.8000 per Kg.

2 Kg. of posho at sh.2000 per Kg.

3 Kg. of irish potatoes at sh.1500 per Kg.

500 gm. of sugar at sh.3200 per Kg.

(a) What was her total expenditure?

(b) How much money did she remain with?

KING FAHAD

# KING FAHAD ISLAMIC PRI. SCH.




**2021 COVID-19 REVISION WORK (06)**  
**CLASS : P.7**  
**SUBJECT : INTERGRATED SCIENCE**

Name: \_\_\_\_\_ Stream \_\_\_\_\_  
INDEX NO: \_\_\_\_\_ / \_\_\_\_\_ Date: \_\_\_\_\_

1. Give one of the five senses of the body.  
.....
2. What special name is given to the young one of a rabbit?  
.....
3. State one use of proteins in the body.  
.....
4. In the space provided below, draw a well labeled diagram to show that air has weight.
  
  
  
  
  
  
  
  
  
  
5. Name the natural source of heat in the environment.  
.....
6. Why should sick people be given special care?  
.....
7. Of what importance is a lateral line to a fish?  
.....
8. Write any one common example of a communicable disease in our community.  
.....
9. Identify the structure that joins bones to muscles.  
.....

The diagram below shows a simple circuit. Use it to answer questions 10 and 11.



10. Using arrows, show the direction of flow of the electric current along the wire marked T.

11. Apart from light, which other form of energy is produced at C?  
 .....

12. Explain the term “magnetization”.  
 .....

13. Why should you apply grease or oil in moving parts of a machine?  
 .....

14. Of what importance is perspiration on the health of human beings?  
 .....

The diagram below shows a glass of water with a straight ruler in it. Use it to answer question 15.



15. Why does the ruler in the jar above appear bent?  
 .....

16. Identify any one structure which helps plants with weak stems to climb other plants.  
 .....

17. Name any one ungulate mammal.  
 .....

18. Mention one disease that affects both poultry and rabbits.  
 .....

19. Write down any one energy resource from animals,  
.....

20. State any one way by which sound can be stored.  
.....

21. In which part, of the body are lungs found?  
.....

22. Give any one characteristic of an image formed through a pin-hole-camera.  
.....

23. The diagram below is of a human tooth. Use it to answer the questions that follow.



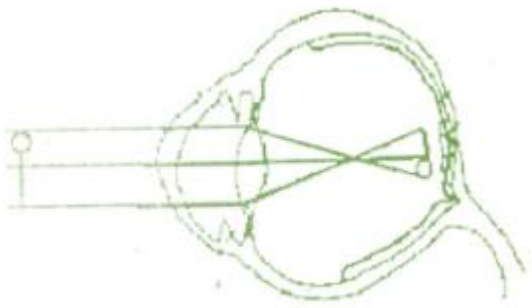
a) Name part marked Y.  
.....

b) State the function of the part marked Y on the diagram above.  
.....

c) Mention one health problem that can affect human teeth.  
.....

d) Suggest any one way you can care for human teeth.  
.....

24. Use the diagram to answer the questions that follow.

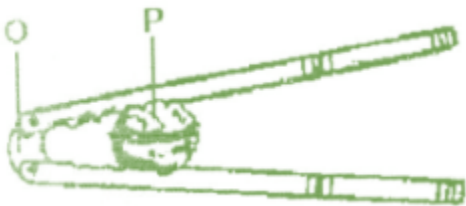


a) What eye defect is illustrated in the diagram above?  
.....

b) How can the eye defect above be corrected?  
.....

c) Apart from the eye defect illustrated in the diagram, name two other eye defects.  
.....

25. The diagram below is of a simple machine. Use it to answer the questions that follow.



(a) Name the points of the machine marked O and P.  
.....

(b) To which class of levers does the machine belong?  
.....

(c) Using arrows show the direction of the effort applied when the machine is being used.  
.....

26(a) Identify two common causes of sickness in a home.  
.....  
.....

(h) Write down two ways we can prevent sickness in a home without using drugs.  
.....

27(a) Write STD's in full.  
.....

b) Suggest any two ways through which a p. 7 candidate can avoid contracting STD's.  
.....

(c) Apart from having sexual intercourse with an infected person, give any other way of contracting HIV /AIDS.  
.....

28(a) Write AI in full as used in animal reproduction.  
.....

(b) Give one advantage of AI in animal reproduction.  
.....



**(c) Define the following terms:**

**(i) gestation period**

.....

**(ii) quarantine**

.....

**29(a) Name any two ways plants can reproduce.**

.....

**(b) Mention the method of propagation used in reproducing the following plants.**

**(i) banana**

.....

**(ii) sugarcane**

.....

**30(a) What name is given to the smallest unit of matter that can exist alone with the basic properties?**

.....

**(b) Give state of matter.**

.....

**(c) How does volume of a solid differ from its mass when subjected to different temperatures?**

.....

**(d) Mention one change of state that takes place with heat loss.**

.....

**END**

# KING FAHAD ISLAMIC PRI. SCH.



**2021 COVID-19 REVISION WORK (07)**  
**CLASS : P.7**  
**SUBJECT : INTERGRATED SCIENCE**

Name: \_\_\_\_\_ Stream \_\_\_\_\_  
INDEX NO: \_\_\_\_\_ / \_\_\_\_\_ Date: \_\_\_\_\_

1. Name the part of the human body which protects the brain.  
.....

2. Why should granaries be kept dry?  
.....

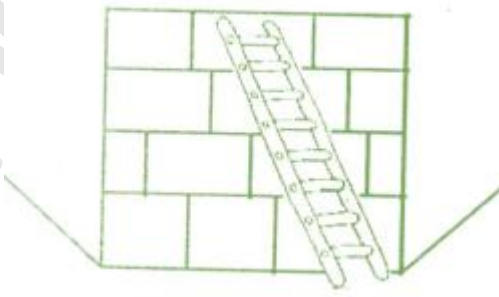
3. How are leguminous crops useful in a crop rotation cycle?  
.....

4. In which one way can the sun be useful in germ control?  
.....

5. Why do birds need beaks?  
.....

6. Which part of an insect has a similar function as of stomata on leaves of plants?  
.....

Study the diagram below and use it to answer the questions that follow.



7. Identify the type of machine drawn above.  
.....

8. Give one example of a non-biodegradable waste material in our environment.  
.....

9. Write down one disease that affects both the muscles and the bones of the skeletal system.

.....

10. What name is given to the arrangement of the seven colours that appear when a ray of light is refracted through a triangular prism?

.....

11. Give one way methods used in the preservation of fish and millet differ.

.....

12. Why is the handle of an flat iron box usually made of wood or plastic?

.....

13. Identify any one disease that affects human kidneys.

.....

14. Define the term vices in poultry rearing.

.....

.....

.....

15. Draw a diagram showing cross pollination.

16. Monition one measure used by the government of Uganda to fight against the spread of malaria.

.....

17. Give one example of anti-social behaviour practiced in your school.

.....

18. State one way by which friction can be increased.

.....

19. Why is it advisable for parents to keep drugs out of reach of children?

.....

20. Francis planted a bean seed and after three days, it germinated, What type of change did the seed undergo?

.....

21. Suggest one reason why animals move.

.....

22. Mention one function of teeth in food digestion.

.....

23. Which type of gas is contained in a fire extinguisher?

.....

24(a) Give one example of each of the following:

(i) artificial source of light .....

(ii) natural source of light .....

(b) Why is the moon said to be non-luminous object?

.....

(c) State one way in which reflection is useful to man.

.....

25(a) Convert 77°F into the Centigrade scale.

.....

(b) Give two ways a clinical thermometer is adapted to measuring human body temperature.

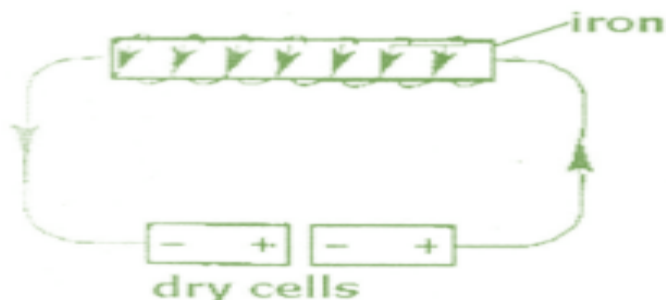
.....

.....

(c) Why doesn't the scale of the clinical thermometer go beyond 39°C?

.....

26. The diagram below shows a method of making a magnet. Use it to answer the questions that follow.



(a) Name the method of making magnets shown in the diagram.

.....

b) What would YOU do to the dry cells in order to increase the strength of the magnet?  
.....

(c) Apart from the method shown in the diagram, name any other two methods of making magnets.  
.....

27. Match the diseases with the germs that cause them.  
.....

DISEASE	GERM
Typhus fever	Plasmodium
Elephantiasis	Bacterium chlamydia
Malaria	Filarial worm
Trachoma	Bacterium rickettsia

- (a) typhus fever .....
- (b) elephantiasis .....
- (c) malaria .....
- (d) trachoma .....

28(a) Identify any two living components of the environment.  
.....

(b) Mention two ways people depend on each other.  
.....

29a) Name the organ that removes urine from the body.  
.....

b) To which body system does the body organ belong?  
.....

c) Where is urine collected before it is removed from the body?  
.....

d) Name one dangerous substance found in urine.  
.....

30 a) What is mulching?  
.....  
.....

**b) Give two advantages of mulching.**

.....

**c) How can mulching be dangerous to a farmer?**

.....

KING FAHAD

# KING FAHAD ISLAMIC PRI. SCH.



**2021 COVID-19 REVISION WORK (06)**

**CLASS : P.7**

**SUBJECT : SOCIAL STUDIES & RELIGIOUS EDUC.**

Name: \_\_\_\_\_ Stream \_\_\_\_\_

INDEX NO: \_\_\_\_\_ / \_\_\_\_\_ Date: \_\_\_\_\_

1. Name the water body which separates Africa from Europe.  
.....
2. Give the school symbol where the distance to the school is written.  
.....
3. What causes land forms in an area?  
.....
4. Name the place where District head offices are found.  
.....
5. Which element of a map helps to interpret symbols?  
.....
6. How can the government of Uganda help people affected by landslides?  
.....
7. Why are most African countries depending on developed countries?  
.....
8. Name the local raw material used in making mats.  
.....
9. Name the common fish caught from East African lakes.  
.....
10. Give one reason why markets are important to farmers.  
.....
11. What was the cause of the Great Trek in South Africa?  
.....
12. Name any one subject that helps children develop their talents.  
.....
13. How can farming be possible in the drier parts of Uganda?  
.....
14. Why did the Africans want to rule their own countries?  
.....

15. Name any one material on which trade was developed during Pre-colonial Uganda.

.....

16. Name any one country through which the Trans Africa High way passes.

.....

17. How did the coming of Europeans interfere with the African culture?

.....

18. Why are children encouraged to greet elders?

.....

19. (a) What does fasting mean to a Moslem?

.....

20. State two ways Moslems observe fasting.

(i) .....

(ii) .....

21. What does fasting mean to a Moslem?

.....

22. Name any two free services you as a Christian can offer to your mosque.

(i) .....

(ii) .....

23. Give any two ways Moslems give free services to people in the community.

(i) .....

(ii) .....

24. a). State any two reasons why democracy is important in a country.

(i) .....

(ii) .....

b). Write any two ways democracy promotes development in a country.

(i) .....

(ii) .....

25. a).What is environment?



.....  
.....

b). Write down any two ways in which the environment of Uganda has been destroyed?

(i) .....

(ii) .....

C). what should the government of Uganda do to protect the environment?

.....

26. a) Name any two private companies that offer similar services like the post office.

.....  
.....

b). Give any two ways how Uganda Post Bank has promoted development in Uganda.

(i) .....

(ii) .....

27. a). What do the following terms mean?

i). Direct rule: .....

ii). Indirect rule: .....

b). In which two ways did the two systems of administration affect Africans?

(i) ..... (ii) .....

28. a). In which two ways can we create peace and harmony in Society?

.....  
.....

b). Mention two situations that can arise due to lack of peace in the society?

- (i) .....
- (ii) .....

29. a). Why are people advised to be patient by Allah.

.....  
.....

b). Give any two ways Allah rewards those who are patient.

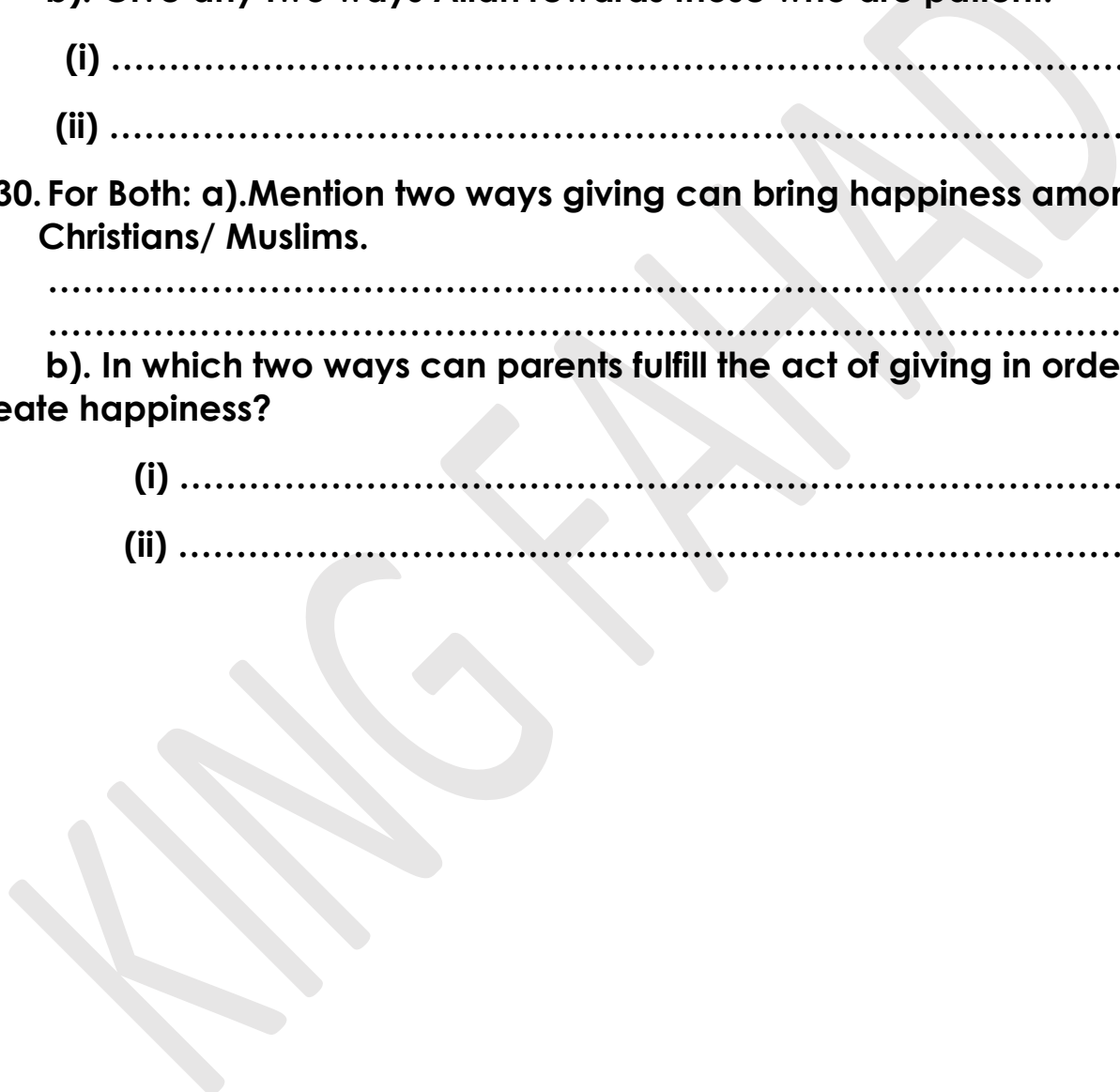
- (i) .....
- (ii) .....

30. For Both: a).Mention two ways giving can bring happiness among Christians/ Muslims.

.....  
.....

b). In which two ways can parents fulfill the act of giving in order to create happiness?

- (i) .....
- (ii) .....



# KING FAHAD ISLAMIC PRI. SCH.



**2021 COVID-19 REVISION WORK (07)**  
**CLASS : P.7**  
**SUBJECT : SOCIAL STUDIES & RELIGIOUS EDUC.**

Name: \_\_\_\_\_ Stream \_\_\_\_\_

INDEX NO: \_\_\_\_\_ / \_\_\_\_\_ Date: \_\_\_\_\_

1. Give one reason why people save money.  
.....
2. Write ECOMOG in full.  
.....
3. How can a community help to care for a nearby church?  
.....
4. Give one way how child labour affects the progress of education in Uganda.  
.....
5. Which type of family consists of father, mother and their biological children?  
.....
6. Why are game rangers important in Game parks?  
.....
7. What is population?  
.....  
.....
8. How did the introduction of cash crops improve the life of Ugandans?  
.....
9. Give one importance of Jos plateau to the people of Nigeria.  
.....
10. How does the availability of Employment in a country promote development?  
.....
11. Write down any one role of local leaders towards education?  
.....
12. Name any one raw material for pottery industry.

.....  
13. In which one way is planted vegetation helping people to develop economically in Uganda?  
.....

14. Why is mining in East Africa not fully developed?  
.....

15. State one advantage of Multi — party system of governance.  
.....

16. Write one way the government of Uganda is ensuring proper health among children.  
.....

17. A part from Mass media, state one other way the government programmes are passed on to people.  
.....

18. Or: How many prophets did Allah mention the Holy Quran.  
.....

19. Or: Name the first born child of Ibrahim.  
.....

20. Or: Why did Allah send Prophet Muhammad to suffer for the Muslims.  
.....

21. Or: What does the Quran teach us about Marriage?  
.....

22. Or: State one reason why Muslim woman dress themselves in Hajib?  
.....

23. a). Mention any two ways of managing wastes in the community  
(i) .....  
(ii) .....

b). Name any two bodies in East Africa that are protecting the Environment.

(i) ..... (ii) .....

24. Study the map of Africa below and answer questions that follow.



(a) Name the city marked S.

.....

(b) Name mountain ranges marked A.

.....

(c) Why does river marked C flow northwards?

.....

(d) Why are forests in area shaded ever green?

.....

25. a). A part from Zambabwe, name any other two countries in the Southern hemisphere where white settlers took over land.

.....  
.....

b). State any two ways how the Africans were treated in Zimbabwe.

(i) .....

(ii) .....

26. a). Write any two causes of famine in our community.

- (i) .....
- (ii) .....

b). Give two ways in which illiteracy may lead to poor farming methods.

- (i) .....
- (ii) .....

27. a). Give two ways in which people benefit from rainfall.

- (i) .....
- (ii) .....

b). How does the rainy season determined people's way of dressing?

.....

c). Mention one way in which too much rainfall is dangerous to people's health.

.....

28. a). What does each of the following mean?

i). Scramble for Africa: .....

ii). Partition of Africa: .....

b). Mention one reason for the Scramble and Partition of Africa.

.....

29. Or: a). Who said these words "Never drink hurriedly like a camel?"

.....

b). Which group of people were told these words?

.....

c). Give two reasons why Muslims are advised to love one another.

(i) .....

(ii) .....

30. Or: a). What is Salat Al - Juma'at?

.....

b). Give two ways salat Al- Juma' at benefit the Muslims.

(i) .....

(ii) .....

c). How do Muslims tell the time for prayer?

.....

KING FAHAD

**INQUIRIES:**

<b>ENGLISH</b>	<b>MATHEMATICS</b>	<b>SCIENCE</b>	<b>SOCIAL STUDIES</b>
0702803838 0752650466 0755151453	0751496659 0705194277	0759551042 0703884847 0702322253 0773250150	0772912455 0756441780/0712959424 0756748597 0788346329 0701771380

**THEOLOGY:**

<b>QURAN</b>	<b>LUGHA</b>	<b>FIQHU &amp; TARBIA</b>
0701880005 0705405152	0751467212 0702199708	0752867638 0755831209

KING FAHAD