

UGANDA NATIONAL EXAMINATION BOARD
PRIMARY LEAVING EXAMINATION
2013
SOCIAL STUDIES WITH RELIGIOUS EDUCATION
Time allowed: 2 hours 15 minutes

Index No:

--	--	--	--	--	--	--	--	--

Candidate's

Name.....

Candidate's signature.....

School name.....

District Name.....

Read the following instructions carefully

1. This paper has two sections **A** and **B**.

Section A has 50 questions B has 5 questions. The paper has 15 pages altogether

2. Answer all questions, **all** answers to both section A and B must be written in the space provided.

3. All answers must be written using a blue or black ball point pen or ink. Any work written in pencil other than graphs, pictures and diagrams will not be marked.

4. Unnecessary change of work may lead to loss of marks

5. Any handwriting that cannot easily be read may lead to loss of marks

6. Do not fill anything in the boxes indicated:
"For examiners". And those inside the question paper

FOR EXAMINERS USE ONLY		
Qn. No	MARKS	EXR'S NO.
1-10		
11-20		
21-30		
31-40		
41-43		
44-46		
47-49		
50-52		
53-55		
TOTAL		

SECTION A: 40 MARKS

Question 1 to 40 carry one mark each

1.Name one inland port found on Lake Victoria in Uganda.

.....
.....

2.Give any one traditional means of communication.

.....
.....

3.Give the opposite direction of North East on a compass.

.....
.....

4.What title given to the head of civil servants in a district?

.....
.....

5.Which type of transport is most suitable for carrying flowers from Uganda to the United Kingdom?

.....
.....

6.Apart from windy and rainy conditions give any one other weather condition.

.....
.....

7.What is important about the place called Mogasi in Karamoja sub region?

.....
.....

8.Mention the Muganda agent used by the British to extend rule to Eastern Uganda.

.....
.....

9.Name the chief who is remembered for his resistance to colonial rule in Northern Uganda.

.....
.....

10.Give any one benefit which a family can get by living near a health centre.

.....
.....

11.Give any one reason why Sir Cohen forced Kabaka Mutesa¹¹ to go to exile.

.....
.....

12.Mention any one climatic condition which has enabled dairy farming to be carried out in the Kenya Highlands.

.....
.....

13. Apart from water, give one other commodity that can be transposed using pipeline.

.....
.....

14. Give any one way in which game parts promote economic development in Africa.

.....
.....

15. State any one problem farmers may face as a result of cutting down forests.

.....
.....

16. Give any one similarity between the East Africa Community (EAC) and the Economic Community of West Africa States (ECOWAS)

.....
.....

17. Why were the caravans helpful to Arab traders in East Africa?

.....
.....

18. Mention any one way in which industrial growth can be a problem to the Environment.

.....
.....
.....

19. Give any one economic advantage that people living in mining areas of South Africa get.

.....
.....
.....

20. State any one way in which a school can promote sanitation in the community.

.....
.....
.....

21. Ghana lies on the prime Meridian. If the time in Ghana is 1:00 p.m. what time will it be East Africa standard time?

.....
.....
.....

22. How did the work of Sir Samuel Baker benefit the people of Northern Uganda?

.....
.....
.....

23. Why did Germany lose its power in Tanganyika after the first world war?

.....
.....
.....

24. Apart from cultivation, state one other way in which people misuse swamps in Uganda

.....
.....
.....

25. Give any one reason why colonialists constructed roads and railway line in East Africa.

.....
.....

26. Which colour on the Uganda National flag symbolizes brotherhoods?

.....
.....

27. Give any one reason why the Portuguese built fort Jesus at Mombasa.

.....
.....

28. Where are the Mangrove forests found in East Africa?

.....
.....

29. Why is it necessary for a country with fast-growing population to modernize its agriculture?

.....
.....

30. State one similar culture practice among the Bagishu and Bakonzo.

.....
.....

31. Give any one way in which the coming of the Arabs helped to improve the economy of Uganda.

.....
.....

32.What process led to the formation of lake Kyoga?

.....

33.Name any one member state of the East African community (EAC) that lies in both the northern and southern hemispheres.

.....

.....

34.Why is Africa known as cradle and of mankind?

.....

.....

35.What term used to mean the action of planting many trees in an area?

.....

.....

For each of the question 36 to 40 answer EITHER the Christian OR the Islamic question but not both not NO marks will be awarded to a candidate who attempts both alternative in a particular number.

EITHER.

36.Name the first martyr according to the Bible.

.....

.....

OR.

Name the first martyr according to Islam.

.....

.....

EITHER.

37. In which town was Jesus Christ Buried?

.....

.....

OR

In which town was Muhammad (PBUH) buried.

.....

.....

.....

EITHER.

38.How long did God take to create the universe?

.....

.....

OR

How long did Allah take to create the universe?

.....

.....

EITHER

39.Name the Angel who brought the Good News to Mary that she would be the mother of Jesus Christ.

.....
.....

OR

Name the Angel that used to bring revelation to prophet Muhammad (PBUH).

.....
.....

EITHER

40.Give any one sign of the Holy Spirit on the Day of Pentecost

.....
.....

OR

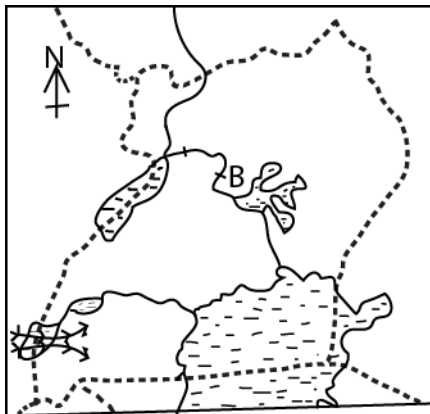
Give any one place in Islam

.....
.....

SECTION B 60 MARKS

Question 41 to 55 carry four marks each

41.Study the sketch map of Uganda below and use it to answer the question that follow



(a) Name the ethnic group that followed the route marked. ➡➡➡

.....
.....
.....

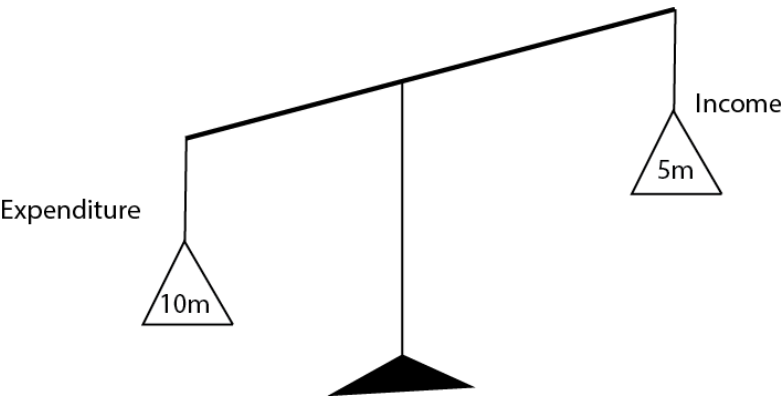
(b) Give any two reasons why the ethnic group in (a) above left their original home land

(i)

.....
.....

- (ii)
.....
.....
- (c) Use an arrow to show on the map above the route Nilo-Hamites followed when entering Uganda.
.....
.....

42.The diagram below shows a school budget. use it to answer the question that follow.
answer the question that follow.



- (a) Give the type of Budget shown in the diagram above.
.....
.....
- (b) Give any two problems a school may face when it has a budget shown above.
(i)
.....
.....
(ii)
.....
.....
- (c) State any one reason a school should have a budget.
.....
.....

43.Match the element of a map in list A to their uses in list B correctly

A		B
(i)	Title	To calculate actual distance between place on a map.
(ii)	Scale	To interpret symbols on a map.

(iii)	compass	To understand what the map is all about.
(iv)	Key	To find direction between place on a map.

(a) Title

.....

(b) Scale

.....

(c) Key

.....

44.(a) Give any two uses of mobile phone

- (i)

 (ii)

(b) Give any two disadvantage of mobile phone

- (i)

 (ii)

45.(a) Who heads the commonwealth of Nation?

.....

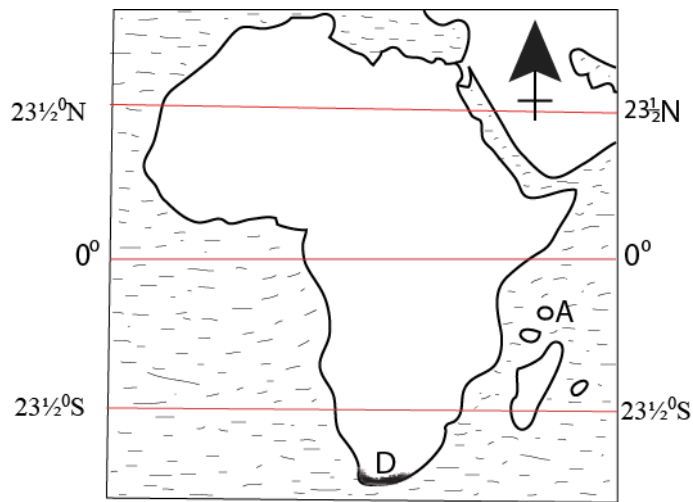
(a) Mention any two functions of the commonwealth of Nations.

.....

(b) Give any one way in which Uganda benefit from participating I the Commonwealth of Nations games.

.....

46. Study carefully the sketch map of Africa below and use it to answer the question that follow.



(a) Name the Island marked A on the map above

.....

(b) Why are the island marked A on the map above remembered in the colonial history of Bunyoro and Buganda kingdom?

.....

(c) Show letter C way the Tropic of cancer on the sketch map above.

.....

(d) Mention any one way in which the vegetation zone marked D is important to the people of this area

.....

47.(a) Give any two natural disasters which can affect the settlement people in area.

.....

(b) Mention any two ways in which government can assist the people affected by natural disasters.

(i)

(ii)

48.(a) Name the method of farming in which water is applied to help crops grow.

.....

(b) Mention any one area in Uganda where the method named in (a) above is used.

.....

(c). Give any two advantages of using the methods of farming named above

(i)

(ii)

49.Apart from sugarcane and tea. Give any two other plantation cash crops in East Africa.

.....

(b)Give any two factors that make it difficult for Rwanda to carry out plantation agriculture

(i)

(ii)

50.(a) which river drains the largest part of the Democratic Republic of congo (D.R.C)?

.....
(b)Give any two reasons why the river you have named in (a) above carries the largest volume of water to the sea.

.....
(c) Name the ocean into which the river named in (a) above pour its water.

.....

For each of the question 51 to 55, answer EITHER the Christian OR the Islamic question but not both. No mark will be awarded to a candidate who attempts alternative in particular number

51. EITHER

Mach the given information in list A to that B correctly

A	B
Cain	Was the first to see Christ after resurrection

Joseph Arimathea	Replaced Judas Escariot
Mathias	Buried Jesus Christ
Mary Magdalena	Killed the Brother

- (a) Cain.....
.....
- (b) Joseph of
Arimathea.....
.....
- (c) Mathias.....
.....
- (d) Mary
Magdalena.....
.....

OR

Mach the given information in list A to that B correctly

A	B
Abubakr	Mother of prophet Muhammad
Amina	The book given of prophet Musa
Taurat	Wife of prophet Muhammad
Aisha	First caliph in Islam

- (a) Abubakr.....
.....
- (b) Amina.....
.....
- (c) Taurat.....
.....
- (d) Aisha
.....
.....

52. EITHER

- (a) Name the special day of the week when Christian have general prayers

.....
.....
(b) Why was the day named above chosen for general prayer?
.....
.....

(c) Mention any two things that general prayers promote.

- (i)
.....
(ii)
.....

OR

(a) Name the special day of the week when Muslims have general prayers.
.....
.....

(b) Why was the day named above chosen for general prayers?
.....
.....

(c) Mention any two things that general as the grandfather of the nations?
.....
.....

53. EITHER

(a) According to the Bible, who is regarded as the grandfather of the nations?
.....
.....

(b) Give any one name among the children of the grandfather mentioned above.
.....
.....

(c) Mention any two ways in which the grandfather of the nations showed his faith to God.
.....
.....

OR

(a) Which prophet is regarded as the grandfather of believers according to Islam?
.....
.....

(b) Give any one among the children of the grandfather mentioned above.
.....
.....

(c) Mention any two ways in which the grandfather of the nations showed his faith to Allah

.....
.....
.....
.....

54. EITHER

(a) Who was the twin brother of Jacob.

.....
.....

(b) Mention any two promise God made to Jacob.

.....
.....

(c) What lesson do you learn the story of Jacob and his twin brother?

.....
.....

OR

(a) Name the son of prophet Yaaqub who was sold to Egypt.

.....
.....

(b) Mention any two promises of Allah to Yaaqub.

.....
.....
.....
.....

(c) What lessons do you learn from the story of Yaaqub?

.....
.....
.....

55.EITHER

(a) Name the companion that God gave to Adam.

.....
.....

(b) According to the Bible where did God get Adam's companion?

.....
(c) |..... for this reason a man will leave his father and mother and unite withhis wife." Mathew 19.5.

Give two reason why a man leaves his parents to unite with his wife.

.....
.....
.....

OR

(a) Name the wife that Allah gave to prophet Adam.

.....
.....

(b) According to the Quran where did Allah get Adam's companion?

.....
.....

(c) "Any woman who dies when her husband is pleased with her will enter paradise I mean Titrmidhi 4:3256. According to Islam give any two things woman can to please her husband in marriage.

.....
.....
.....

END