

**PRIMARY FIVE**  
**SOCIAL STUDIES AND RELIGIOUS EDUCATION**

*Time allowed: 2 hours 15 minutes*

Name: \_\_\_\_\_

School Name: \_\_\_\_\_

Read the following instructions carefully:

1. The paper has **two** sections: **A** and **B**
2. Section **A** has 40 questions (40 marks)
3. Section **B** has 15 questions (60 marks)
4. Answer **ALL** questions. All answers to both Sections A and B must be written in the spaces provided.
5. All answers must be written using a blue or black ball point pen or ink. Diagrams should be drawn in pencil.
6. Unnecessary crossing of work may lead to loss of marks.
7. Any handwriting that cannot be easily read may lead to loss of marks.
8. Do **not** fill anything in the boxes indicated;  
For Examiner's use only.

<b>FOR EXAMINER'S USE ONLY</b>

<b>FOR EXAMINER'S USE ONLY</b>		
<b>Qn. No</b>	<b>MARK</b>	<b>SIGN</b>
<b>1 – 10</b>		
<b>11 – 20</b>		
<b>21 – 30</b>		
<b>31 – 40</b>		
<b>41 – 43</b>		
<b>44 – 46</b>		
<b>47 – 49</b>		
<b>50 – 52</b>		
<b>53 – 55</b>		
<b>TOTAL</b>		

*Turn over*

## SECTION A

1. What is natural vegetation?

---

---

2. Name any one crop that grows well in swampy areas.

---

3. Give any one problem that is faced by people who live in urban areas in Uganda.

---

4. State any one duty of commercial banks.

---

5. Suggest any one way of controlling soil erosion in mountainous areas of Uganda.

---

6. Which country borders Uganda to the north?

---

7. Name the mountain in Uganda that has snow on its top.

---


8. Why do people cut down trees?

---

9. In which continent do we find Uganda?

---

10. In the space below, draw a map symbol for a bridge.



11. Name the major line of latitude which crosses Uganda.

---

12. Which social service do teachers provide in a community?

---

13. Give one basic need of a family.

---

14. What is a landlocked country?

---

---

15. Give any one traditional way of preserving fish in Uganda.

---

16. What title is given to the traditional leader of Bunyoro?

---

17. Why do sailors need a compass?

---

18. How is democracy practiced at your school?

---

19. Mention the section of police which controls riots.

---

20. How are wild animals dangerous to farmers?

---

21. In which Stone Age period did early man discover fire?

---

22. Name the water way that joins Lake Edward to Lake George.

---

23. Why do tourists go to Bwindi National Game Park?

---

24. Write NEMA in full.

---

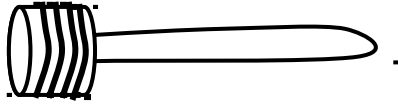
25. Give one reason why soldiers wear uniforms.

---

26. Give the importance of a rain-gauge in a weather station.

---

The diagram below shows a tool. Study it and answer questions 27 and 28.



27. Name the tool shown above.

---

28. How is the tool above useful in Buganda?

---

29. What are economic activities?

---

---

30. Name the feature on a river where a hydro-electric dam can be built.

---

31. Give any one item that is found in the Uganda museum.

---

32. Name the biggest tribe in Uganda.

---

33. Which highland in Uganda is also known as “Mountains of the moon”?

---

34. Why is it dangerous to live on the slopes of high mountains?

---

35. Give one example of social activities in your district.

---

36. Name one animal which acts as Uganda’s emblem.

---

For each of the questions 37 - 40, answer EITHER a Christian OR Islamic question but not both in a number. Anyone who answers both Christianity and Islam on the same number will not get marks.

37. **Either:** Name the mother of Jesus Christ.

---

**Or:** Name the mother of Prophet Isa.

---

38. **Either:** Why were Adam and Eve chased out of Eden?

---

**Or:** Why were Adam and Hawa chased out of paradise by Allah?

---

39. **Either:** Which book in the Bible tells the story of creation?

---

**Or:** Which holy book was revealed to Prophet Dauda?

---

40. **Either:** What is baptism as used in Christianity?

---

**Or:** What is male circumcision as used in Islam?

---

**SECTION B (60 MARKS)**

*(Questions 41 to 55 carry 4 marks each)*

41. (a) Why is Uganda called a landlocked country?

---

---

(b) State any two problems faced by Uganda as a landlocked country.

(i) \_\_\_\_\_

(ii) \_\_\_\_\_

(c) How is Port Mombasa useful to Uganda's development?

---

42. (a) Name any one stone age site.

---

(b) Give any two importance of Stone Age sites in Uganda.

(i) \_\_\_\_\_

(ii) \_\_\_\_\_

(c) Give any one item that we find at a Stone Age site.

---

43. (a) What is the main use of a scale on a map?

---

(b) Mention any two types of scale used on a map.

(i)

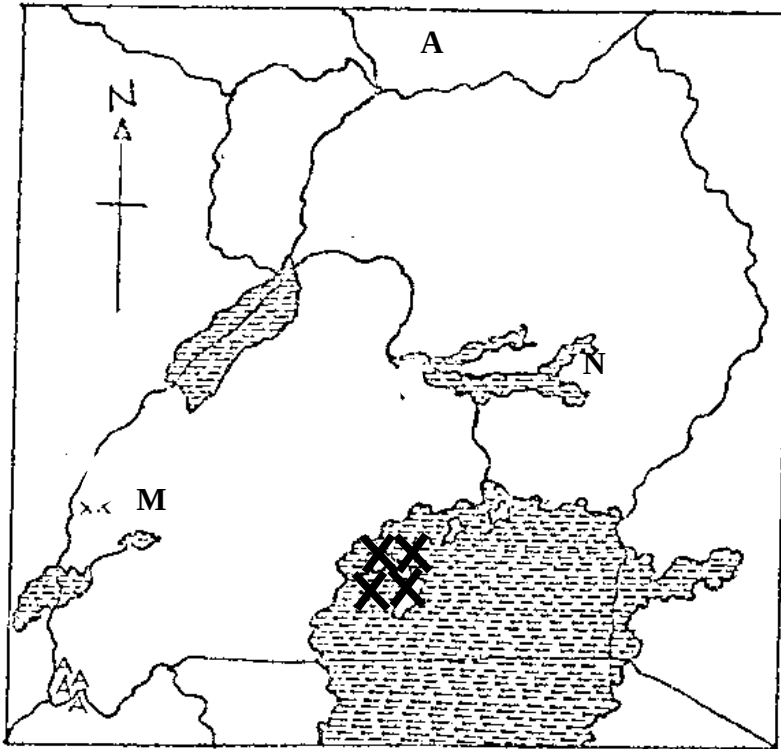
---

(ii)

---

(c) The distance between Wakiso and Kampala is 5cm on the map. Calculate the actual distance between the two places using a scale 1:5km

44. Study the map below and use it to answer the questions that follow.



(a) Name the country marked with letter **A**.

---

(b) How was the lake marked with letter **M** formed?

---

(c) Give the most common crop grown in the region marked xxx.

---

(d) Why are there many swamps around lake marked **N**?

---

45. (a) What are natural resources?

---

---

(b) Mention any two examples of renewable resources.

(i)

---

(ii)

---

(c) State one value of land to people.

---

46. (a) What is child abuse?

---

---

(b) Give any two causes of child abuse in homes.

(i)

---

(ii)

---

(c) Why is a child advised not to move alone from school back home?

---

47. (a) State any two ways early man obtained food.

(i)

---

(ii)

---

(b) Mention any two problems that early man faced.

(i)

---

(ii)

---

48. (a) What are voluntary organizations?

---

---

(b) Which group of people benefit from UWESO?

(c) Write the following in full.

(i) TASO \_\_\_\_\_

(ii) UWESO \_\_\_\_\_

49. (a) Which human activity has led to the destruction of most forests in Uganda?

(b) Name any two forests found in western Uganda.

(i) \_\_\_\_\_

(ii) \_\_\_\_\_

(c) Give one product obtained from forests.

50. (a) What name is given to the laws passed by the district councils?

(b) Give one use of laws in a community.

(c) Name the people who provide security in a community.

(i) \_\_\_\_\_

(ii) \_\_\_\_\_

For each of the questions 51 to 55, answer EITHER the Christian OR Islamic question but not both. No marks will be awarded to a pupil who attempts both alternatives.

51. **Either:**

(a) Who received the Ten Commandments from God?

(b) On which mountain did the person above receive the Ten Commandments?



(c) State any one problem which the Israelites faced on their way from Egypt.

\_\_\_\_\_

(d) Why were the Israelites taken out of Egypt?

\_\_\_\_\_

Or:

(a) Who received the touret from Allah?

\_\_\_\_\_

(b) On which mountain was the person above when the touret was revealed to him?

\_\_\_\_\_

(c) Why were the Israelites taken out of Egypt?

\_\_\_\_\_

(d) State any one problem which the Israelites faced on their way from Egypt.

\_\_\_\_\_

52. **Either:**

List the four gospel books in the Bible.

(i) \_\_\_\_\_

(ii) \_\_\_\_\_

(iii) \_\_\_\_\_

(iv) \_\_\_\_\_

**Or:**

Mention the four holy books in Islam.

(i) \_\_\_\_\_

(ii) \_\_\_\_\_

(iii) \_\_\_\_\_

(iv) \_\_\_\_\_

53. **Either:**

(a) Name the period during which Christians fast.

\_\_\_\_\_

(b) How many days do Christians fast?

\_\_\_\_\_

(c) Write any two temptations which the devil gave to Jesus in the wilderness.

(i) \_\_\_\_\_

(ii) \_\_\_\_\_

**Or:**

(a) Name the holy month during which Moslems fast.

\_\_\_\_\_

(b) How many days do Moslems fast?

\_\_\_\_\_

(c) State any two things that a Muslim is supposed to do during the period of fasting.

(i) \_\_\_\_\_

(ii) \_\_\_\_\_

54. **Either:**

(a) After the disobedience of man, state one type of punishment that was given to:

(i) Adam  
\_\_\_\_\_

(ii) Eve \_\_\_\_\_

(iii) Serpent \_\_\_\_\_ (Snake)

(b) Why did God send Jesus to earth?

\_\_\_\_\_

**Or:**

(a) What is ablution?

\_\_\_\_\_

\_\_\_\_\_

(b) When can a Moslem perform dry ablution?

\_\_\_\_\_

(c) Mention any two kinds of water suitable for ablution.

(i) \_\_\_\_\_

(ii) \_\_\_\_\_

55. **EITHER:**

(a) Name the apostle who;

(i) denied Jesus three times.

---

(ii) betrayed Jesus.

---

(iii) doubted that Jesus had risen.

---

(b) What title is given to the followers of Jesus Christ?

---

**Or:**

(a) Mention any two names given to Allah.

(i)

---

(ii)

---

(b) Give any two reasons why we should have faith in Allah.

(i)

---

(ii)

---

***Good luck***

