



MBUYA PARENTS' SCHOOL

PRE-PRIMARY LEAVING EXAMINATION SET 13, 2021

CLASS : P.7

SUBJECT: SOCIAL STUDIES AND RELIGIOUS EDUCATION

DURATION: 2 HOURS 15 MINUTES

Random No.					Personal No.		

Index No.

Candidate's Name:

Candidate's Signature:

School Random No:

District ID:

Read the following instructions carefully:

FOR EXAMINERS' USE ONLY

1. This paper has two sections: **A** and **B**.
2. Answer **all** questions. **All** answers to both sections **A** and **B** must be written in the spaces provided.
3. **All** answers must be written using a blue or black ball-point pen or fountain pen.
4. Unnecessary changes of work may lead to loss of marks.
5. Any handwriting that cannot easily be read may lead to loss of marks.
6. Do **not** fill anything in the boxes indicated "**For Examiners' Use Only**" and

those inside the question paper.

FOR EXAMINERS' USE ONLY		
QN. NO.	MARK	EXRS' NO.
1-10		
11-20		
21-30		
31-40		
41-43		
44-46		
47-49		

50-52		
53-55		
TOTAL		

SECTION A: (40 MARKS)

1. Name the body responsible for organizing and conducting national elections in Uganda.

2. Which domestic animal is mainly kept for transport by the people of Sebei sub-region?

3. Mention any one way people benefit from a maize mill found in their area.

4. Draw a road sign showing a roundabout in the space below.



5. How did the discovery of fire improve the social life of early man?

6. Why are most rift valley lakes having salty water?

7. Mention any one way Mau Mau and Maji Maji rebellions are similar.

8. Name the social service centre where lawbreakers are reported.

9. Mention any one factor that has favoured the growing of Arabica coffee in Bugisu sub-region.

10. Why is Patrice Lumumba remembered in Democratic Republic of Congo (DRC)?

11. Why is Kabale cooler than Moroto?

12. State one reason why dairy farming is not practised in Karamoja sub-region.

13. Name the feature on the Uganda coat of Arms that represent wild life.

14. Why is colonel Muammar Gadaffi regarded as the father of African Union (AU)?

15. In which way is Equator similar to Greenwich Meridian?

16. Mention any one was the government of Uganda benefits from the Television stations.
-

17. Name the tax charged on imports.

18. Identify one way in which maintenance of feeder roads can promote trade in Uganda.

19. State any one way people of Uganda benefited from the construction of the Uganda Railway (1896-1901)

20. Apart from cooking food and washing utensils, state one other work of a cook at school.

21. What does the handshake at the bottom of East African Community emblem represent?

22. State any one covid-19 has affected the economy of Uganda.

23. Mention any one economic activity carried out in the temperate grasslands of South Africa.

24. Why did the people of Uganda demand to be represented in the legislative council during colonial rule?

25. In which way are forests promoting tourism industry in East Africa?

26. Give one reason why Islam did not spread faster in East Africa compared to Christianity.

27. Name the mountain of East Africa whose highest peak is Kibo.

28. State any one way weather conditions determines the dressing of the people in an area.

29. Mention one method of farming that can turn semi-desert areas into productive agricultural areas.

30. State any one problem experienced by people affected by floods.

31. Why is English used in Nigeria as official language communication?

32. Name the group of people who contributed to the fall of Bunyoro-Kitara Empire.

33. Mention any one reason why North Libya is more populated than the South.

34. Why did Uganda join the second world war in 1939?

35. Name any one physical feature colonialists used to fix a boundary between Uganda and the Democratic Republic of the Congo.

For questions 36-40, answer Christianity or Islam but not both on one number.

36. **Either:** State any one condition that can make a Christian lose faith in God.

Or: State any one condition that can make a Muslim lose faith in Allah.

37. **Either:** Why do Christians visit Namugongo on 3rd June every year?

Or: Why do Muslims go to mecca for Pilgrimage?

38. **Either:** Which Angel announced the birth of Jesus Christ to Mary?

Or: Which Angel brought revelation to prophet Muhammad (PBUH)?

39. **Either:** State any one thing a Christian does as a way of worship God.

Or: State any one thing a Muslim does as a way of worshipping Allah.

40. **Either:** Why is the Bible called a unique book?

Or: Why is the Quran called a unique book?

SECTION B: (60 marks)

41. (a) Name any one means of transport provided by government to connect Kalangala District to mainland.

- (b) State any two ways water transport has helped people to improve their economic standards of living.
(i) _____
(ii) _____
- (c) Give any one problem facing water transport on Lake Victoria.

42 (a) What is an extended family?

(b) State any two causes of a large family.

(i)

(ii)

(c) Give any one disadvantage of a large family.

43 (a) Name any one sub-region in Uganda where the European colonialists were resisted.

(b) State any one reason why European colonialists were resisted in sub-regions named in 43(a) above.

(c) Mention two reasons why Africans were easily defeated by the European colonialists.

(i)

(ii)

44. **Study the table below that shows countries of East Africa and national parks, and use it to answer question 44.**

<i>Country</i>	<i>National Game park</i>
Uganda	Ruvubu national park
Rwanda	Murchison Falls national park
Tanzania	Akagera national park
Burundi	Serengeti national park

(a) Uganda _____

(b) Rwanda _____

(c) Tanzania _____

(d) Burundi _____

45 (a) Name the special boat used by the early Arab traders to come to East African Coast.

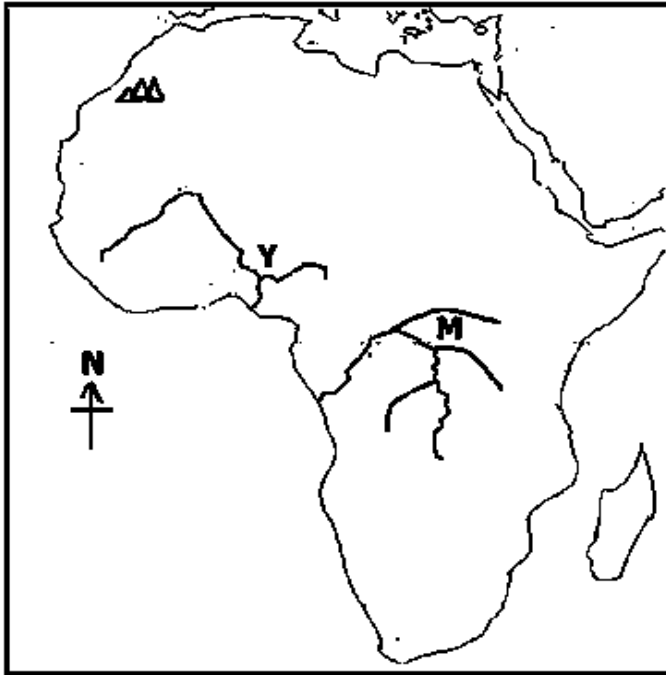
(b) In which way was the monsoon winds useful to the early Arab traders who came to East African coast?

(c) State any two ways Arabs contributed to the development of East Africa.

(i) _____

(ii) _____

46. Study the sketch map of Africa below and answer the questions below:



(a) Name the rivers marked by the following letters.

(i) Y: _____

(ii) M: _____

(b) Which mineral is found in the deltas of river marked Y?

(c) Using letter K show mountain Atlas on the map above.

47 (a) What is plantation farming?

(b) Name the plantation crop grown in Kilombero valley in Tanzania.

(c) State any two ways people of Tanzania have benefited from the plantation crop named in 47(a) above.

(i) _____

(ii) _____

48 (a) Name the country where Gezira irrigation scheme is found.

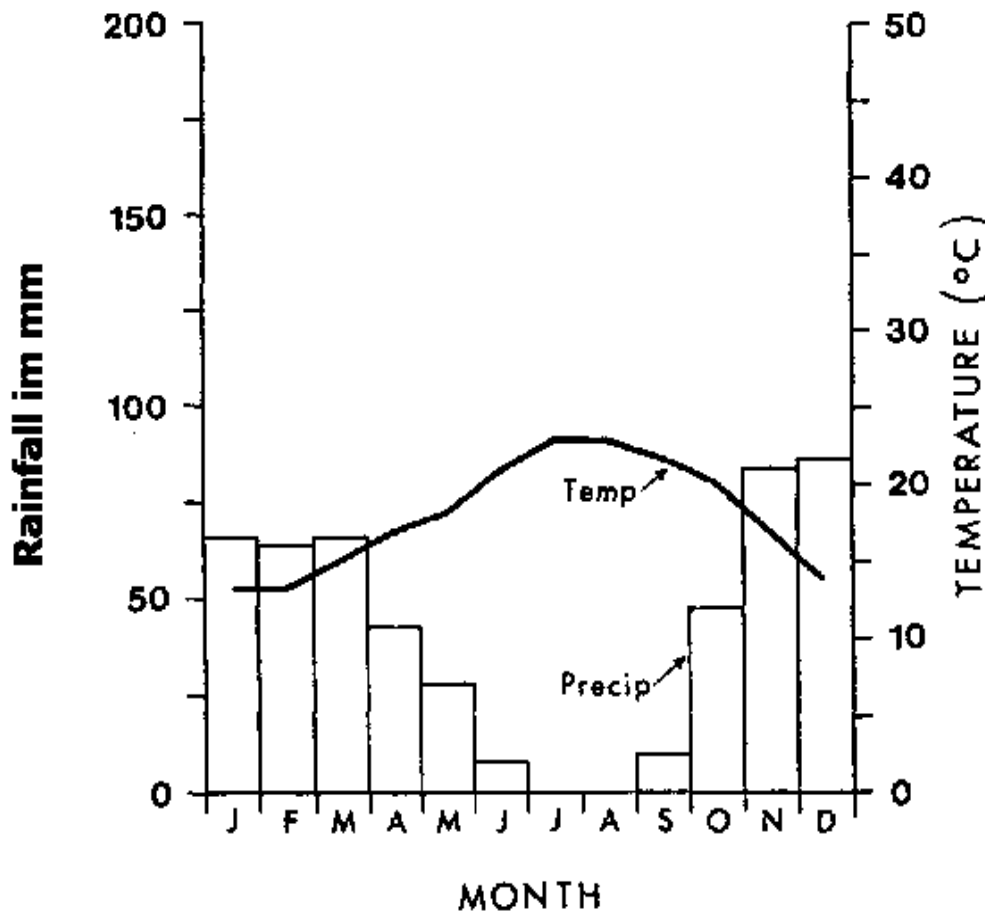
(b) State one way the Blue Nile has contributed to the growing of crops on Gezira Irrigation scheme.

(c) Mention any two problems faced by farmers on Gezira irrigation scheme.

(i) _____

(ii) _____

49. **The graph below shows average monthly rainfall and temperature recorded at a weather station. Study it and answer question 49.**



(a) Name the month when the highest average rainfall was recorded.

(b) Mention any one month when rainfall was not received at all.

(c) In which month was the lowest average temperature recorded?

(d) What is the relationship between average rainfall and average temperature recorded at the weather station?

50. *The table below shows monthly expenditure of Jacob's family. Study it and answer question 50.*


INCOME	ITEM	EXPENDITURE
Shs. 1,500,000	Feeding	600,000
	Fees	350,000
	Accommodation	250,000
	Medical care	100,000
	Others	150,000
	Total	1,450,000

(a) Name the type of budget shown on the table above.

(b) What advantage does Jacob's family have as a result of the budget named in 49(a) above?

(c) How much money does Jacob's family save at the end of the month?

(d) Draw the diagram to show the type of budget shown on the table.



For numbers 51-54 answer either Christianity or Islam, but not both in each number.

51. **Either:** (a) Name the town where Jesus was rejected.

(b) State any two reasons why Jesus was rejected from the town named in (a) above.

(i) _____

(ii) _____

(c) What did Jesus teach about how a believer should treat his enemy?

Or: (a) Name the town where Prophet Muhammed (PBUH) was rejected.

(b) state any two reasons why Prophet Muhammad(PBUH) was rejected.

(i) _____

(ii) _____

(c) What did Prophet Muhammad (PBUH) teach about how a believer should treat his enemy?

52. **Either:** (a) Name the material God used to create Adam.

(b) State two reasons why God created Adam.

(i) _____

(ii) _____

(c) How was the creation of Adam different from other creatures?

Or: (a) Name the material Allah used to create Adam.

(b) State two reasons why Allah created Adam.

(i) _____

(ii) _____

(c) How was the creation of Adam different from other creatures?

53. **Either:** (a) State any two factors that can cause a Christian marriage to break.

(i) _____

(ii) _____

(b) Mention any one effect of a broken family to a Christian.

(c) State any one commandment that protects holy matrimony.

Or: (a) State any two factors that can cause marriage to break according to Islam.

(i) _____

(ii) _____

(b) Mention any two effects of a broken family to Muslims.

(i) _____

(ii) _____

54. **Either:** (a) Name the town which Jesus Christ entered while riding on a donkey.

(b) State any two ways the people in the town named in 54(a) showed love to Jesus.

(i) _____

(ii) _____

(c) Mention any one activity Jesus performed while in the town named above.

Or: (a) Name the town where Prophet Muhammad went to seek refuge.

(b) State two ways the people in town named in (a) above showed love to Prophet Muhammad (PBUH).

(i) _____

(ii) _____

(c) Mention any one activity performed by Prophet Muhammad (PBUH) while in that town.

55. **Either:** *“I am the Lord’s servant, may it happen to me as you have said”.*
(Luke 1:38)

(a) Who said the above words?

(b) To whom were these words said?

(c) State any two lessons Christians learn from the life of the person named in 55(a) above.

(i) _____

(ii) _____

Or: *“I am only a messenger from Allah your Lord to announce to you the gift of a pure son”.*

(a) Who said the above words?

(b) To whom were these words said?

(c) State two lessons Muslims learn from the life of the person named in 55 Or(b) above. **END**

(i) _____

(ii) _____