

PRIMARY TWO MATHEMATICS HOLIDAY WORK

NAME: _____

1. Add correctly:

Sh. 1000 + sh. 2000 = _____

2. What can you see on a 200 coin?

3. Fill in the missing number.

+ 1 = 9

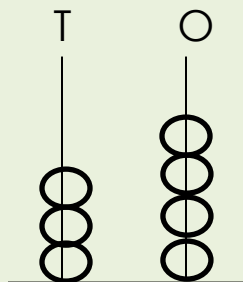
2 + = 12

4. Arrange the numbers in ascending order.

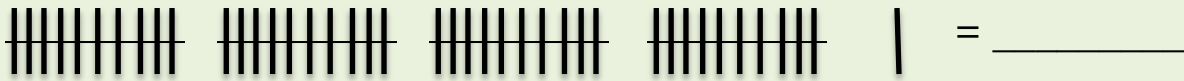
9, 4, 7, 1 _____

19, 10, 3, 16 _____

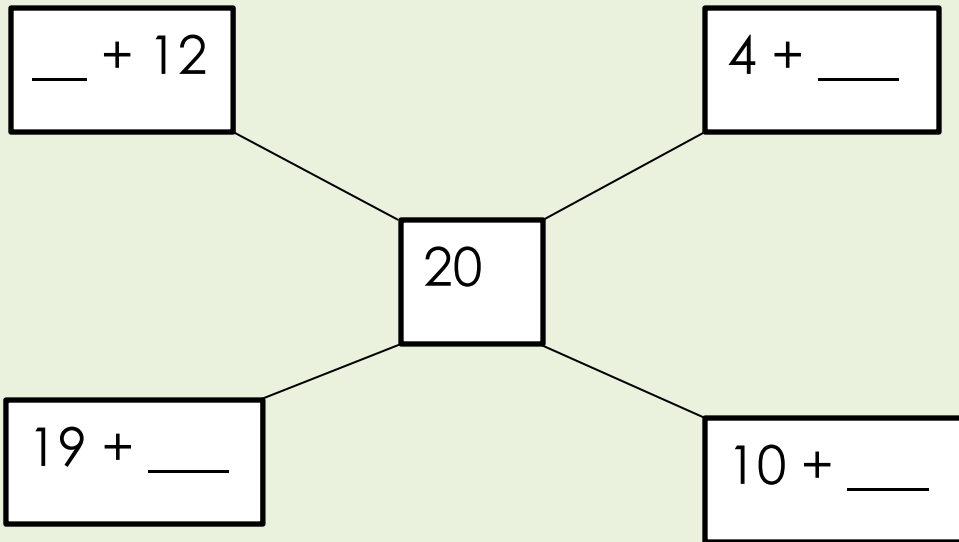
5. Complete the abacus correctly.



6. Write the number symbol shown by the bundles.



7. Fill in correctly.



8.



a) Name the shape above.

b) How many sides does it have?

9. How many minutes are in half an hour?

10. Study the shopping list below and answer the questions.

Sweet sh. 200



Pencil sh. 500



rubber sh. 300.



Questions

a) How much is the cheapest item?

b) What is the most expensive item?

c) How much is a pencil and a rubber?
