

**NUMBERS
PRIMARY ONE**

Time allowed: 1 hour 30 minutes

My name is _____

School _____

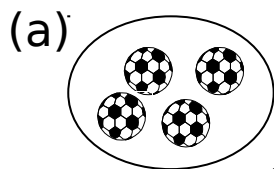
1. Count and write the number.

(a)  = _____


(b)  = _____

(c)  = _____

2. Name these sets.



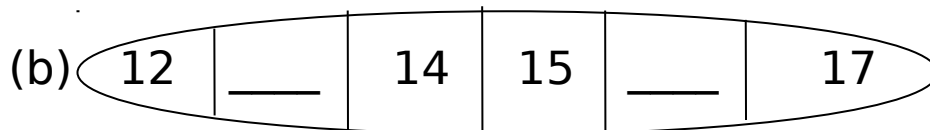
A set of _____



A set of _____

3. Fill in the missing numbers.

(a) 1, 2, __, 4, 5, __, 7, 8, 9, 10



4. Add the numbers.

1

(a) $7 + 2 =$

(c) $\begin{array}{r} 6 \\ + 0 \\ \hline \end{array}$

(b) $3 + 4 + 5 =$

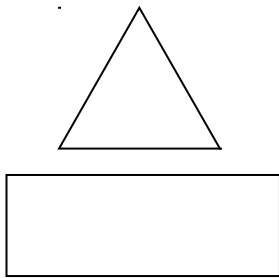
5. **Which number comes right after?**

(a) 4, _____

(b) 11, _____

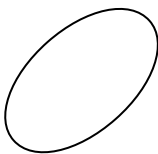
(c) 29, _____

6. **Match correctly.**



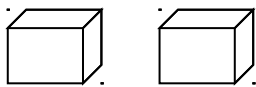
rectangle

oval



triangle

7. **Match correctly.**



5



1



2



3


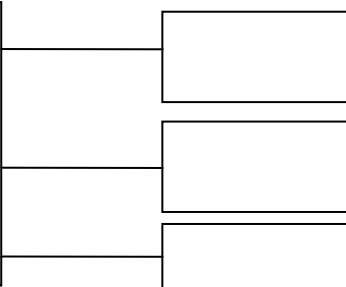



8. **Write the numbers.**

(a) eight _____

(b) fifteen _____

(c) twenty three _____

9. **Form small sets from a big set.**

			A set of _____
			A set of _____
			A set of _____

10. **Circle the greater number.**

(a) 17 and 7


(b) 12 and 21

(c) 10 and 11

11. **Draw these sets.**

(a) A set of 6 flowers.

(b) An empty set.



12. **Write in words.**

(a) 9 _____

(b) 12 _____

(c) 30 _____

13. **Arrange these numbers starting with the smallest.**


(a) 3, 1, 4 _____

(b) 9, 6, 10, 5 _____


(c) 30, 20, 10 _____

14. **Read and draw pictures.**

(a) 4 books



(b) 6 chairs



15. **Match correctly**

12

Thirty five

35


Eleven

11


Twelve

16. **Compare these sets.**

(a) Set A



Set B



(a) Set **A** has _____ members.

(b) Set **B** has _____ members.

(c) There are _____ members altogether.

17. Which number comes before 9?

18. (a) Peter has 4 books. Henry has 5 books.
They both have _____ books.

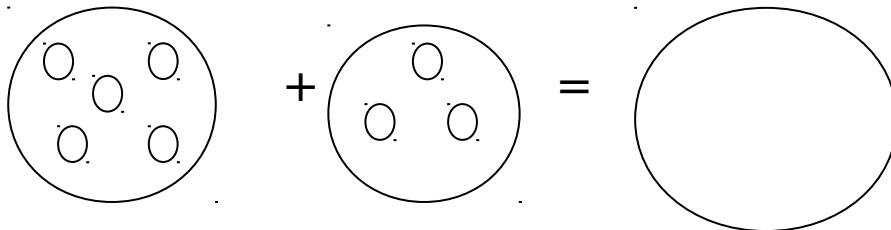
(b) Six mangoes plus two mangoes equals
_____ mangoes.

19. Write the number between.

(a) 9 ___ 11

(b) 18 ___ 20

20. **Join the sets**



Good luck