

HILLSIDE PRIMARY SCHOOL

SOCIAL STUDIES TERM II MOCK

EXAMINATION SET 2 2020

Name: Stream

... SECTION (40 MARKS)

1. Write any one condition of weather.

2. Name the physical feature that covers the largest part of Uganda.

3. Give one reason why Arabs came to Uganda.

4. Give one way vegetation supports wild animals.

5. What is the best season for harvesting crops?

6. Name one craft material got from swamps?

7. What causes day and night?

8. Why is Ignatius Musaazi is still remembered in the history of Uganda?

9. State the major reason why Christian Missionaries came to Uganda.

10. What is the motto of Uganda?

11. Name the African country that tried to colonise Uganda.

12. Why should children stand upright when singing the National Anthem?

13. State one advantage of having a nuclear family.

14. How is democracy practiced at school?

15. Give one danger of living near swamps.

16. Name the organ of the government that makes laws.

17. Which type of climate is described as hot and wet throughout the year?

18. Give any one contribution of the Bachwezi in Uganda.

19. How is Lake Katwe important to the people of Uganda?

20. How do water bodies influence the climate of Uganda?

21. Give one reason why people use a zebra crossing on busy roads.

22. Which political party led Uganda to independence?

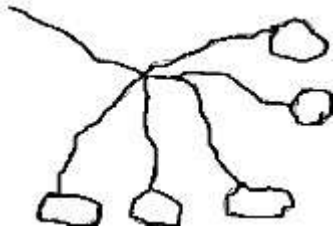
23. What does the Uganda Kob on the coat of Arms represent?

24. How do people benefit from making crafts?

25. Name one Bantu tribe in Uganda.

26. How was the Royal Geographical Society helpful to the early explorers?

27. How was the tool below useful to the early man?



28. Name one social service centre in your community.

29. How does one become a member of parliament?

30. State one reason why tourism is called an industry.

31. Give one use of land to people.

32. Write **LEGCO** in full.

33. What is the main work of Uganda police force?

34. State one means of transport used on roads.

35. Mention one way leaders are important in our community.

For questions 36-40, answer Either Christianity or Islamic but not both.

36. **Either:** Give one way Christians communicate to God?

OR: How do Moslems communicate to God?

37. Either: What sacrament helps a Christian to enter God's family?

Or: State one holy town in Islam.

38. Either: Give one way Jesus showed love to mankind.

OR: Give one way prophet Mohammed showed love to his followers?

39. Either: How was Noah and his family saved from floods?

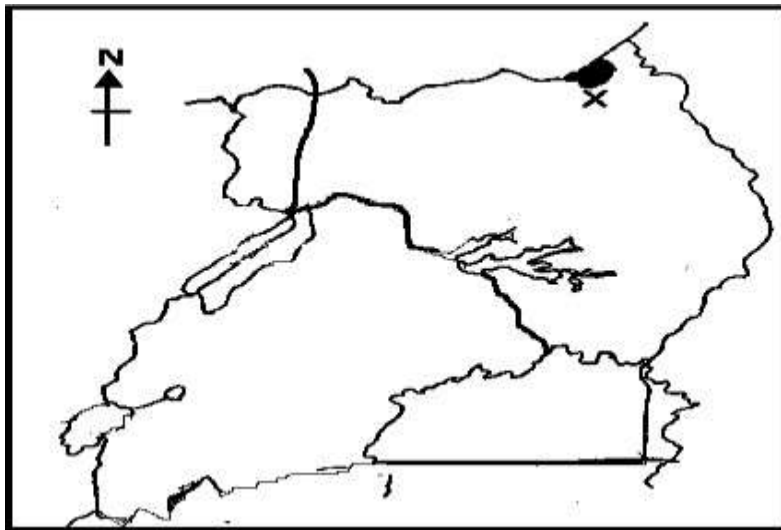
Or: How was Nuuh and his family saved from the floods.

40. Either: State one way Jesus Christ acted as the light of the world.

OR: State one prophet Mohammed served his people.

SECTION B (60 MARKS) 41.

Use the map below to answer questions that follow.



a. Name the game park marked X

b. Give a reason why the game park marked X has no crocodiles.

c. State one problem facing game parks in Uganda today.

d. Using letter B locate Victoria Nile on the map above.

42. a) Mention any two explorers who came to Uganda

i) -----

ii) -----

b) State one problem that European explorers faced in Africa.

c) Which feature attracted many European explorers to Uganda?

43. a) What is the direction of Uganda from Kenya?

b) Why is Kenya called a non land locked country.

c) Mention any one landlocked country neighbouring Uganda.

d) State one problem faced by landlocked countries.

44. a) What is rural urban migration?

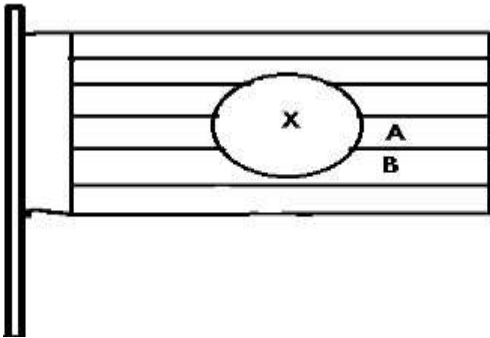
b) State two reasons why people move from villages to towns.

i. -----

ii. -----

c) Suggest one problem caused by rural urban migration in towns.

45. Use the diagram below to answer the questions that follow.



a) Which bird is represented by X?

b) Name the colours marked;

B -----

C -----

c) Give the reason why the flag above is carried by the national team when going for an international match.

46. a) What will be Alinda's new direction if she turned 45° clockwise from the South?

b) In which direction will the sun be seen at 7:30 am?

c) Name any two groups of people who use the compass in their daily work.

i. -----

ii. -----

47. a) Name the cash crops mainly grown in the following parts of Uganda.

i) West Nile -----

ii) Slopes of mountain Elgon -----

b) State any way crop growing promotes industrialisation.

c) Suggest one problem faced by crop farmers in Uganda today.

48. Complete the table below correctly.

A	B
Rwenzururu kingdom	
	Kabaka
Busoga kingdom	
	Omukama

49. a) What is communication?

b) Write any two means of modern communication.

i. ----- ii)

c) How are modern means of communication important to traders?

50. a) Which bank supervises commercial banks?

b) Give any two ways commercial banks are important to people in Uganda.

i. -----

ii) -----

c) Name any one commercial bank in your district.

For Questions 51-54, answer Either Christianity Or Islamic But not Both.

51. **EITHER:** a) Give one reason why Jesus Christ promised the Holy Spirit to the disciples.

b) Name the day when the Holy Spirit appeared to the disciples.

c) Identify any two fruits Christians get from the Holy Spirit.

i. ----- ii)

OR: Write the prophets in Islam who received the Holy books below;

a. Tauret -----

b. Injir -----

c. Zabur -----

d. Quran -----

52. **Either;** a) Name the prayer Jesus Christ taught his disciples.

b) Identify two requests of people in the prayer (a) above.

c) Why do Christians pray every day?

OR; a) Name any three daily prayers in Islam.

i. ----- ii) --

----- iii) -----

b) Why do Muslims pray every day?

53. Either: a) Why is a Bible a special book to Christians?

b) Mention any two gospel books in the Bible

i) -----

ii) -----

c) Give one reason why a good Christian should read the Bible daily.

OR: a) Why is a Quran a special book to Muslims?

b) Identify any two ways Muslims take care of the Quran

i) -----

- ii) -----

-- d) Give a reason why a good Muslim should read the Quran daily.

54. ~~Either: a) Name two disciples of Jesus Christ among the twelve disciples.~~

i) -----

ii) -----

b) Give the reason why Jesus Christ needed disciples.

c) What does the name **Peter** mean?

OR: a) Name the town where Prophet Mohammed was born.

b) How were the following people related to Prophet Mohammed?

i) Halima -----

ii) Khadija -----

c) Write one quality that Prophet Mohammed had as a good prophet of Allah -----

---- **55. FOR BOTH:** a) Why do we need to help those who are in need?

b) State any two ways of helping people who are in need.

i) -----

ii) -----

c) Name one group of people who need help from God fearing people.

END