

P.6 MATHEMATICS WEEKEND HOME WORK

Name _____ Stream _____

1. In a class of 80 pupils, $\frac{5}{8}$ of them are girls and the rest are boys.
 - a). What is the fraction of boys?



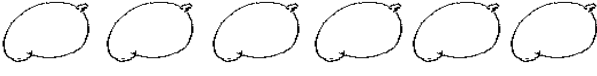


 - b). How many more girls are in the class than the boys?


2.
 - a) Find the value of 3 in 87.93
 - c). Write 54.5 in words.

3.
 - a) Express 15km in metres.

 - b). Work out: 223^{five} 144^{five}

4. Study the picture graph below and answer the questions that follow

Name	Number of fruits given
Peter	
Sarah	
John	
Kate	
Dan	

- Given that  represents 4 fruits.
- a). How many fruits were given to Peter?
- b). How many more fruits were given to John than Dan?
- c). Find the total number of fruits given to all the pupils.