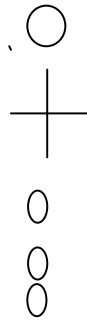
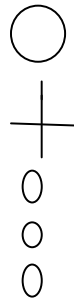
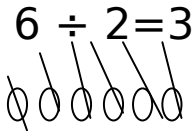


PRIMARY ONE MATHEMATICS
TOPIC: OPERATIONS OF NUMBERS.

SUB TOPIC: DIVISION

LESSON ONE WEEK SIX
Dividing by 2.



Exercise

$12 \div 2 =$

$14 \div 2 =$

$10 \div 2 =$

$4 \div 2 =$

$18 \div 2 =$

$30 \div 2 =$

$16 \div 2 =$

$24 \div 2 =$

$20 \div 2 =$

$2 \div 2 =$

$6 \div 2 =$

$22 \div 2 =$

$8 \div 2 =$

$28 \div 2 =$


Lesson 2

Dividing by 2 involving forming groups:

How many twos are in 4 and 6?

a) Example

Draw 4 balls

 Make groups of 2 out of the 4 balls drawn.

How many twos have you made / grouped?

There are 2 twos in 4.

Therefore $4 \div 2 = 2$

b) 6 - (How many twos are in 6?)

Draw 6 balls and make groups of 2 .



How many twos are in 6?

There are 3 twos in 6.

Therefore $6 \div 2 = 3$

Exercise

1. How many twos are in?

$$8 =$$

$$10 =$$

$$12 =$$

$$14 =$$

Lesson 3

Division by 2 involving word problems.

1. Share 8 bananas between 2 boys.

$$8 \div 2 = 4$$

Each boy gets 4 bananas.

Exercise

- Share 12 sweets equally between 2 girls.
- Share 30 sticks equally between 2 girls.
- Share 21 pens equally between 2 boys.
- Share 10 shirts equally between 2 men.
- Mummy had 12 books. She divided them equally between 2 children. How many books did each child get?

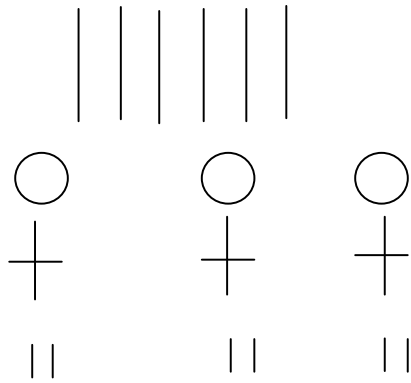
Lesson 4

Sharing equally among 3

1) $6 \div 3 = 2$

ii) $9 \div 3 = 3$

iii) $12 \div 3 = 4$



Exercise

Divide these numbers correctly.

$3 \div 3 =$

$6 \div 3 =$

$18 \div 3 =$

$15 \div 3 =$

$24 \div 3 =$

$36 \div 3 =$

$9 \div 3 =$

$12 \div 3 =$

$27 \div 3 =$

$21 \div 3 =$

$33 \div 3 =$

$30 \div 3 =$

Lesson 5

Division by 3

1. Six divided by three = _____
2. Nine divided by three, each gets _____
3. Twelve divided by three, each gets _____
4. Three divided by three, each gets _____
5. Fifteen divided by three, each gets _____
6. Twenty one divided by three, each gets _____
7. Twenty four divided by three, each gets _____
8. Twenty seven divided by three, each gets _____
9. Thirty divided by three, each gets _____
10. Thirty three divided by three is _____