



GAYAZA JUNIOR SCHOOL
LITERACY II FOR P.1 TERM I 2020

Name: _____ stream _____

1. What is a school?

2. Why do people go to school?

3. Who heads a school?

4. Give any two groups of people who work at school

5. Name these buildings found at school.



6. Where do school children go for treatment at school? _____

7. Why does a school need dormitories?

8. Fill in the missing letters.

te__cher

st__nes

nu__se

matr__n

bu__sar

penc__l

9. What is the name of your headteacher?

10. Why is a teacher needed in a school?

11. Match people to their work places.

Cook

classroom

Matron

kitchen




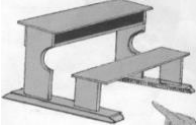
Secretary

office

Teacher

dormitory

12. Name these classroom objects.

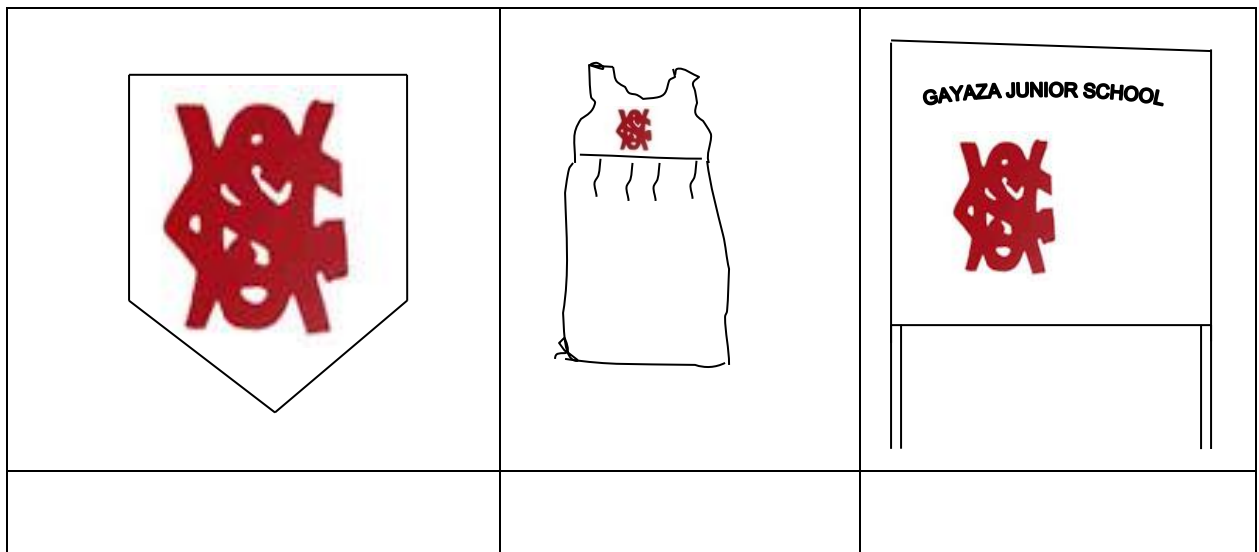
13. List down any three things found in the school compound.

14. What is the use of brooms in our school?

15. Where do we throw rubbish after picking it?

16. Where are school books kept?

17. Name these school symbols.



18. What is the colour of your school uniform?


19. What is your school motto?

20. Why do children wear school uniforms?

21. Write the three letters found on the school badge.

22. Which school symbol directs people to school?

23. Name these activities done at school.



24. Name any two activities children do on sports day?



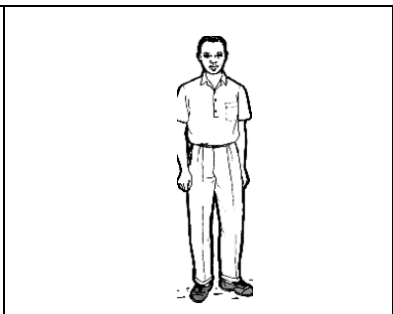
25. What is a home?

26. Who heads a family?

27. Why do we need a granary at home?

28. Where do people go for short or long calls at home?

29. Name these people found at home?

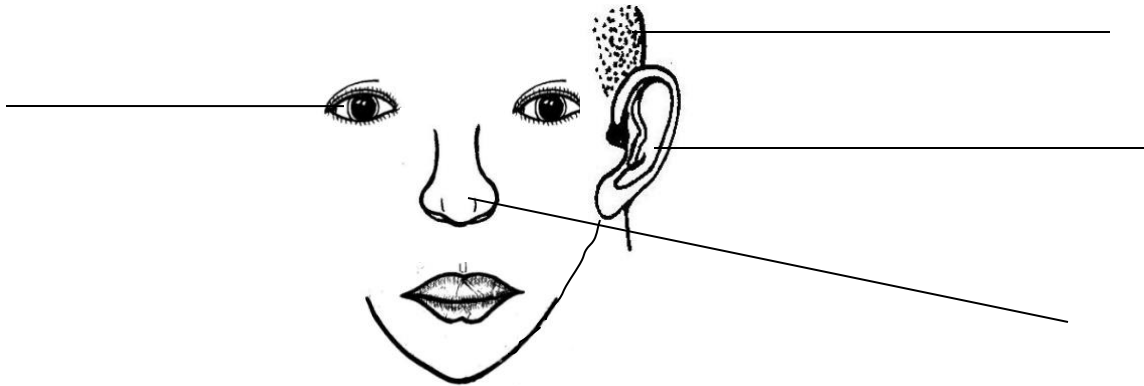
		

END



GJS LITERACY I P.1

1. Name these parts of the head.



2. Why do people need eyes?

3. Which body part do people use for smelling.

4. Write these words correctly.

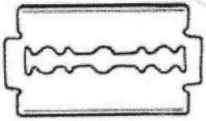
i) thmuo

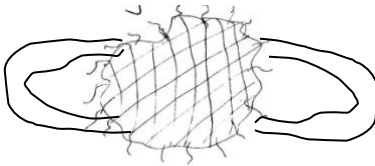
ii) sare

iii) cken

5. Name these things we use to clean our body?







6. Why do people keep hens at home?

7. How many legs has a cow?

8. Match correctly.



Smelling



Tasting



Seeing



Hearing

9. Name the food we get from cows?

10. Write down any two animals which eat grass.

i) _____

ii) _____

11. Fill in the missing letters.

i) w__t__r

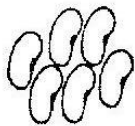
iv) sp__n__e

ii) bu__k__t

iii) s__ __p

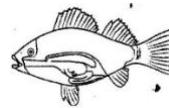
12. Which animal eats rats at home?

13. Name these foods eaten at home.











14. Why do we brush our teet...

15. Underline the common diseases.

Polio, Mumps, Tetanus, Whooping cough, Measles,
Malaria.

16. Name these activities we do to keep our bodies
clean.




17. We _____ our hands after visiting the toilets.

18. Which disease is spread by a mosquito.

(Typhoid, Malarai, Malaria, Measles)

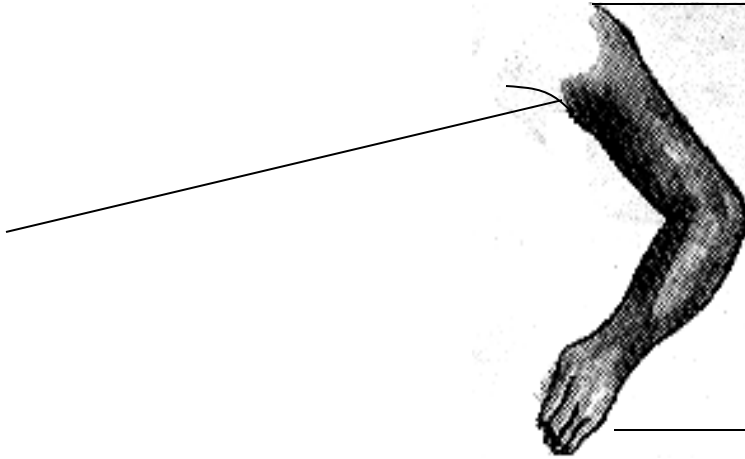
19. Name these body exercises.









20. Name the parts of the arm.




21. Name the animals.







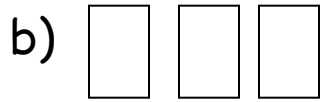





P.1

1. Count and write

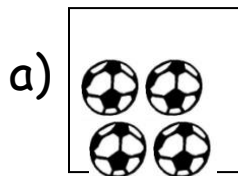







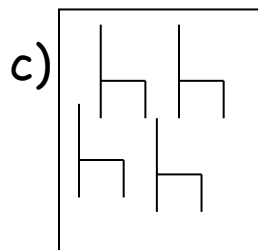


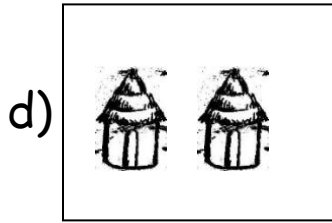
2. Name these groups.




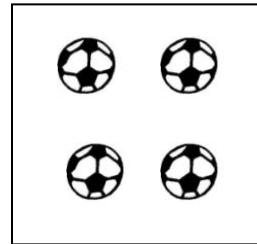
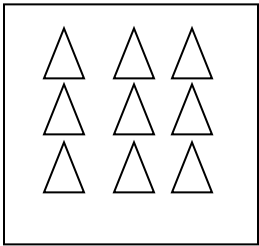
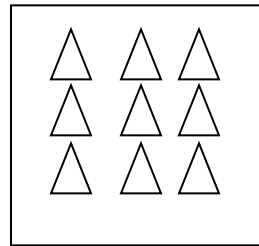

A group of balls






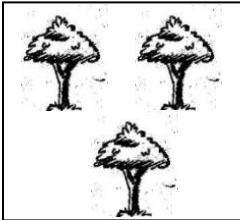

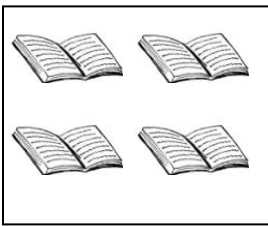
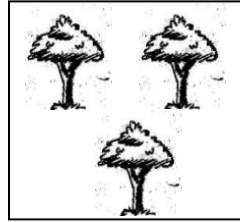



3. Match the same groups.




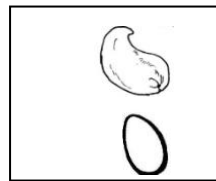

4a) What is a set?

b) Match correctly.





c) Match the same.

i)



5. Make new sets.



6. Draw the following sets.

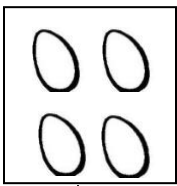
a) A set of stars.

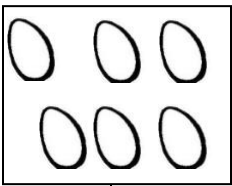
b) A set of flowers.

c) A set of pencils.

(d) A set of books


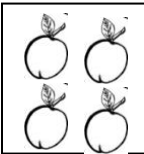
7. Identify numbers on the cards.

a)  _____

b)  _____

8. Comparing sets.


A B

a)  

Set A has _____ members.

Set B has _____ members.

b) M N


 

Set M has _____ members.

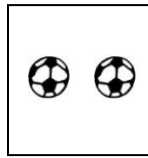
Set N has _____ members

9. Use less or more

a) A



B



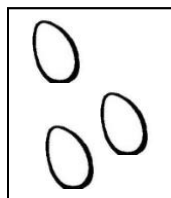
Set A has _____ members than set B.

Set B has _____ members than set A.

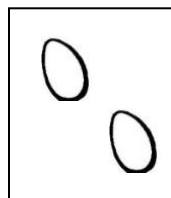
10a) What is an empty set?

b) Draw an empty set.




11. Join the sets.






and




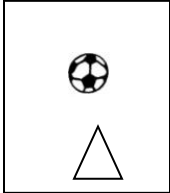

make






b.   and  make

$$4 + \underline{\quad} = \underline{\quad}$$

12. Separating sets.

a)  -  = 

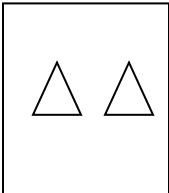
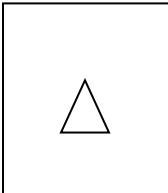
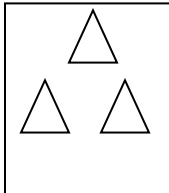
b)  -  = 

13. Fill in the missing ordinal numbers.

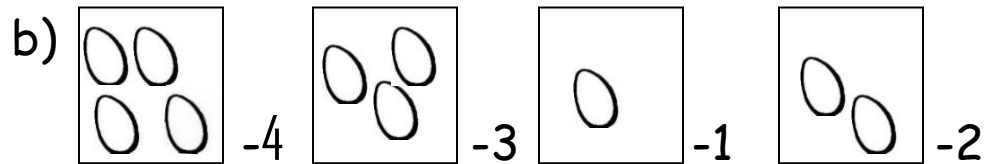
a) 1st , 3rd , 5th

b) 6th , 8th , 9th ,

14. Ordering sets.

a)  -2  -1  -3

Draw these sets again in order.



The sets have been drawn again, order using ordinal numbers.

15. Fill in the missing numbers.

a) 1, 2, _____, 4, 5, _____

b) 7, 8, _____, 10, _____

c) 6, _____, 4, _____, 2, 1

16. Write number words.

8 _____

4 _____

9 _____

3 _____

7 _____

2 _____

6 _____

1 _____

5 _____

0 _____

17. Add these objects.

a) $\begin{array}{c} \triangle \triangle \triangle \triangle \\ \triangle \triangle \triangle \end{array} + \triangle = \underline{\hspace{2cm}}$

b) $\begin{array}{c} \star \star \\ \star \star \end{array} + \star \star = \underline{\hspace{2cm}}$

18. Add correctly.

a) $4 + 3 = \underline{\hspace{2cm}}$

b) $7 + 1 = \underline{\hspace{2cm}}$

c) $2 + 0 = \underline{\hspace{2cm}}$

d) $5 + 1 + 2 = \underline{\hspace{2cm}}$

Add:

a) $\begin{array}{r} 5 \\ +3 \\ \hline \\ \hline \end{array}$

b) $\begin{array}{r} 6 \\ +2 \\ \hline \\ \hline \end{array}$

c) $\begin{array}{r} 4 \\ 1 \\ +3 \\ \hline \\ \hline \end{array}$

Add:


a) Four plus three equals _____

b) Six plus one equals _____

c) What is five plus three?


d) Anna has 4 books
Mary has +3 books
They both have _____ books

19. Use taller, longer and shorter.




Bottle A is _____ than bottle B

Bottle B is _____ than bottle A



ruler



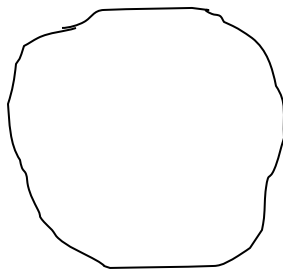
stick

- a) The ruler is _____ than the stick
- b) The stick is _____ than the ruler.

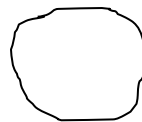
20. Use "heavier" or "lighter"

a)


stone A



stone B



- a) Stone A is _____ than stone B.
- b) Stone B is _____ than stone A.



bucket



cup

- a) The bucket is _____ than the cup.
b) The cup is _____ than the bucket.

Take away.

21. $9 - 4 =$

b) $5 - 5 =$

c)
$$\begin{array}{r} 8 \\ -3 \\ \hline \\ \hline \end{array}$$

d. Seven cats minus three cats

e. Eight dogs take away five dogs gives.

f. What is 7 minus 2?

Find the missing number.

a) _____ + 5 = 8

$$\text{b) } 6 + \underline{\quad\quad\quad} = 10$$

END



GJS ENGLISH P.1

THEME : OUR SCHOOL

1. My name is _____

My school is _____

My class is _____

How old are you?

I am _____ years old.

Are you a girl ?

What is the name of your class teacher?

2. Fill in the missing letters of the alphabet.

a) A B ___ D E F

b) G ___ I J K L

c) M N O ___ Q

3. Write these words in small letters.

BADGE _____

SCHOOL _____

FLAG _____

Write these letters in ABC order.

a) a f c b _____

b) k i l m _____

Write the letter which comes before and after.

(a) _____ b _____ (b) _____ g _____

4. Write 'a' or 'an' to complete the sentences correctly.

a) Show me _____ orange.

b) Bring me _____ hoe and _____ axe.

c) _____ aeroplane is flying over the hills

5. Read and draw people found at school.

Teacher	Pupil	Cook	Cleaner

6. Fill in He or She

i) Ritah is a girl

_____ is in Primary One.

ii) Peter is a boy

_____ is in Primary Two

iii) Our teacher of English is a woman.

_____ is called Mrs. Mwebaza.

iv) Our headteacher is a man

_____ is called Mr. Musisi.

7. Name these objects.







8. Fill in the missing letters.

w__nd__w

p__nc__l

d__st__r

r__ler

cha__kbo__rd

b__x

9. Activities done at school

Read and draw the picture.

Namuli is sweeping the compound.

John is reading a book.

Ritah is running to school.

Juma is dancing.

10. Complete the following sentences.

One  ball many  _____

One  pencil many  _____

One  _____ many  _____

11. Use the given words in their plural form.

a) Nalule has ten _____(book)

b) These are two _____(table)

c) There are twenty _____in the classroom. (girl)


12. Circle the oddman out.

- a) chair tree, pencil, book.
- b) Jane, Sarah, Peter, Ruth.
- c) Chair, bag, knife, table.
- d) goat, bench, duster, ruler.


Add -ing to the verb.

- a) clean = cleaning
- b) wash = _____
- c) drink = _____
- d) swim = _____
- e) skip = _____
- f) clap = _____
- g) drive = _____
- h) come = _____
- i) weave = _____


14. Read and shade these colours.




blue




yellow




green



red



black



purple

OUR HOME

15. Fill in the gaps with "is" or "are"

- a) There _____ many oranges in the basket.
- b) That _____ a policeman.
- c) These _____ yellow bananas.
- d) _____ Peter a good boy?

16. Write these words correctly.

therfa _ _____ tersis _ _____

thermo _ _____ cleun _ _____

ons _ _____ manwo _ _____

sincou _ _____ mothergrand _ _____

17. Write these sentences correctly.

a) food cooking Mother is some

b) pounding groundnuts. The grandmother is

c) milking the cow Father is

18. Draw and name four animals found at home.

19. Use the words in brackets correctly.

- i) The train is _____ on the railway line.
(move).
- ii) The children are _____ now. (dance)
- iii) Mr. Kato is _____ in the garden.(dig)
- iv) Alice is _____ (grind)
- v) Mrs. Kato is _____ matooke. (peel)

20. Underline the doing word (verb)

1. I am learning English now.
2. The children are eating maize.
3. Mother is cooking maize.
4. The baby is sleeping.
5. The teacher is writing on the chalkboard.

21. Read and answer correctly.



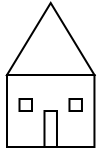
Is this a key?

Yes, it is

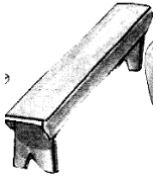


Is this a stone?

No, it is not.



Is this a hat?




Is this a bench?



Is this a pot?



Is this a tree?



What are these?



How many eggs can you see?

22. Make sentences about what is happening.

a)



b)



c)



d)



Read the story and answer correctly.

23. The Grandmother.

Nakato and Babirye have a grandmother. Her name is Mrs. Lubuto. She lives at Naalya town. She has a big farm. She grows maize, cassava, pineapples and sugarcane. She has goats, cows and sheep. She is a hardworking woman.

1. What is the grandmother's name?

The grandmother's name is _____

2. Where does she live?

She lives at _____

3. What does she grow?

She grows maize, _____ and _____

4. Write three animals she has

_____, _____, _____

5. Draw Nakato and Babirye with their grandmother.



END