



GIANT PANDA

Kindergarten and Junior School

Tel. 0754855828, 0782862209, 0774970924 e-mail: giantpandakd@gmail.com

PRIMARY ONE HOLIDAY WORK SET III JUNE 2021 MATHEMATICS

My name is

1. Add:

a) $1+4=$ _____ b) six cups plus 2 cups equals _____

c) Rose had six sweets. She ate all the sweets. How many sweets did she remain with?

2. Name the set.



3. Write the number shown.

   _____

4. Circle the smallest number.

42

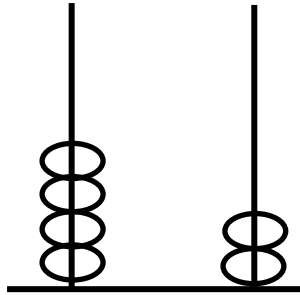
22

12

32

5. _____ days make a week.

6. Write the number shown on the abacus.



_____ = _____

7. Which day comes before Monday?

8. Complete correctly.

eleven, twelve, thirteen, _____, fifteen

9. Complete:

6 tens and 3 ones = _____

10. Join the sets.



11. Add correctly.

$$\begin{array}{r} 3 \quad 2 \\ + 2 \quad 2 \\ \hline \\ \hline \end{array}$$

12. Subtract:

$$13 - 6 = \underline{\hspace{2cm}}$$

13. Multiply:

$$2 \times 4 = \underline{\hspace{2cm}}$$

14. Expand 57 using values.

15. Take away.

$$\begin{array}{r} 74 \\ - 50 \\ \hline \\ \hline \end{array}$$



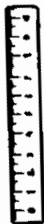
16. Draw bundles of tens and ones for the number.

$$37 = \underline{\hspace{10cm}}$$

17. Use “shorter” or “longer.”



A



B

Ruler A is _____ than ruler B.

Ruler B is _____ than ruler A.

18. Shade the second box.



19. Fill in the missing numbers.

a) 10, _____, 30, _____, 50, _____, 70

b) 1, _____, 3, _____, 5, _____, 7

20. Write in words.

a) 0 _____ b) 4 _____

c) 2 _____ d) 15 _____

e) 6 _____


21. Draw these sets.

a) a set of three boys


b) a set of five trees



c) a set of eight cups



22. Count and write the number.

a)  = _____

b)  = _____

c)  = _____

d)  = _____



GIANT PANDA
KINDERGARTEN AND JUNIOR SCHOOL

-END-