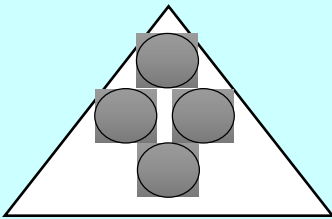


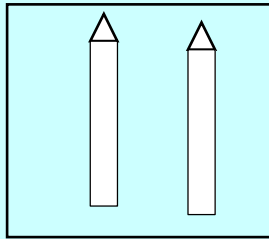
# PRIMARY ONE MATHEMATICS WEEKEND HOME WORK

**NAME:** \_\_\_\_\_

1. Name these sets.

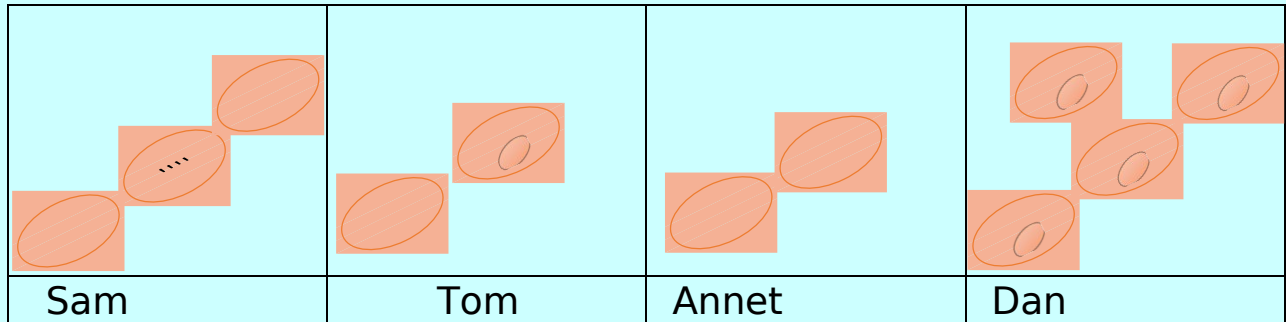


\_\_\_\_\_



\_\_\_\_\_

2. Study the graph and answer the questions that follow.



a) Who collected 4 eggs?

b) How many eggs did Tom collect?

c) How many eggs did Annet and Sam collect altogether?

d) Who collected the same number of eggs?