

# PRIMARY ONE MATHEMATICS HOLIDAY WORK

**NAME:** \_\_\_\_\_


1. Work out.

$$20 \div 2 =$$

2. Shade



3. Name the shaded fraction.



4. Circle the greater bigger fraction.

$$\frac{1}{2}$$

$$\frac{1}{6}$$

5. Compare using longer and shorter.



S












T

Pencil T is \_\_\_\_\_ than pencil S.

Pencil S is \_\_\_\_\_ than pencil T

6. Add: 3 metres + 4 metres = \_\_\_\_\_ metres

7. Study the pictograph below and answer the questions.

Jane				
Tom				
Carol				

a. Who has more balls?

b. Who has least number of balls?

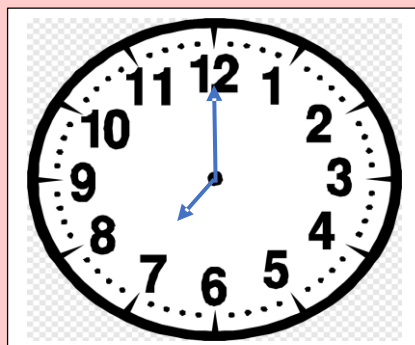
c. How many balls has Jane?

d. How many balls do they all have together?

8. Fill in the missing days of the week.

Wednesday, \_\_\_\_\_ Friday, \_\_\_\_\_

9. Tell time.



10. Find the missing number.

$$\square + 2 = 3$$