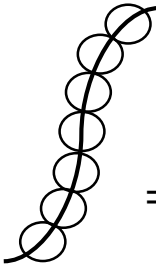
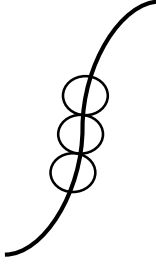





# GLORY INTERNATIONAL ACADEMY

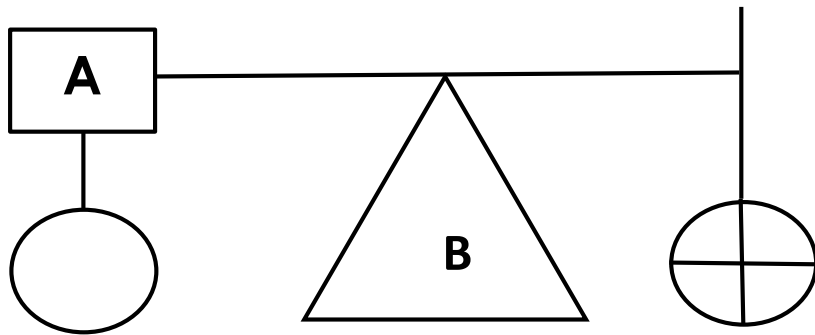
## MID-TERM ONE EXAMS 2023

### P.1 MATHEMATICS

Name: \_\_\_\_\_ CLASS: \_\_\_\_\_

|             |  |             |          |                   |          |          |   |  |          |   |                   |    |  |          |    |   |       |  |       |       |       |       |  |       |       |       |
|-------------|--|-------------|----------|-------------------|----------|----------|---|--|----------|---|-------------------|----|--|----------|----|---|-------|--|-------|-------|-------|-------|--|-------|-------|-------|
| 1.          | <p><b>Count and write the number.</b></p> <div style="display: flex; justify-content: space-around; align-items: center;"><div style="text-align: center;"><br/>= _____</div><div style="text-align: center;"><br/>= _____</div></div>  |             |          |                   |          |          |   |  |          |   |                   |    |  |          |    |   |       |  |       |       |       |       |  |       |       |       |
| 2.          | <table style="width: 100%; border-collapse: collapse;"><tr><td style="width: 50%; border-right: 1px solid black; padding: 5px;"><b>Add:</b></td><td style="width: 50%; padding: 5px;"><b>T</b></td><td style="width: 50%; border-right: 1px solid black; padding: 5px;"><b>O</b></td><td style="width: 50%; padding: 5px;"><b>T</b></td><td style="width: 50%; padding: 5px;"><b>O</b></td></tr><tr><td style="border-right: 1px solid black; padding: 5px;">3</td><td style="padding: 5px;"></td><td style="border-right: 1px solid black; padding: 5px;">2 metres</td><td style="padding: 5px;">4</td><td style="padding: 5px;">5 <del>○○○○</del></td></tr><tr><td style="border-right: 1px solid black; padding: 5px;">+3</td><td style="padding: 5px;"></td><td style="border-right: 1px solid black; padding: 5px;">7 metres</td><td style="padding: 5px;">-2</td><td style="padding: 5px;">3</td></tr><tr><td style="border-right: 1px solid black; padding: 5px;">_____</td><td style="padding: 5px;"></td><td style="border-right: 1px solid black; padding: 5px;">_____</td><td style="padding: 5px;">_____</td><td style="padding: 5px;">_____</td></tr><tr><td style="border-right: 1px solid black; padding: 5px;">_____</td><td style="padding: 5px;"></td><td style="border-right: 1px solid black; padding: 5px;">_____</td><td style="padding: 5px;">_____</td><td style="padding: 5px;">_____</td></tr></table> | <b>Add:</b> | <b>T</b> | <b>O</b>          | <b>T</b> | <b>O</b> | 3 |  | 2 metres | 4 | 5 <del>○○○○</del> | +3 |  | 7 metres | -2 | 3 | _____ |  | _____ | _____ | _____ | _____ |  | _____ | _____ | _____ |
| <b>Add:</b> | <b>T</b>   | <b>O</b>    | <b>T</b> | <b>O</b>          |          |          |   |  |          |   |                   |    |  |          |    |   |       |  |       |       |       |       |  |       |       |       |
| 3           |  | 2 metres    | 4        | 5 <del>○○○○</del> |          |          |   |  |          |   |                   |    |  |          |    |   |       |  |       |       |       |       |  |       |       |       |
| +3          |  | 7 metres    | -2       | 3                 |          |          |   |  |          |   |                   |    |  |          |    |   |       |  |       |       |       |       |  |       |       |       |
| _____       |  | _____       | _____    | _____             |          |          |   |  |          |   |                   |    |  |          |    |   |       |  |       |       |       |       |  |       |       |       |
| _____       |  | _____       | _____    | _____             |          |          |   |  |          |   |                   |    |  |          |    |   |       |  |       |       |       |       |  |       |       |       |
| 3.          | <p><b>Draw these sets.</b></p> <p>a.  A set of 8 apples.</p> <p>b.  A set of 4 eggs.</p> <p>c.  An empty set.</p>   |             |          |                   |          |          |   |  |          |   |                   |    |  |          |    |   |       |  |       |       |       |       |  |       |       |       |

3. Identify and name the shapes.



a = \_\_\_\_\_ b = \_\_\_\_\_

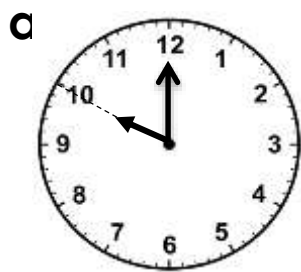
4.a Write these numbers starting from the biggest.

14, 12, 18 \_\_\_\_\_

b. Arrange numbers from small to big.


1, 10, 7, 9 = \_\_\_\_\_

5. Tell the time.



It is \_\_\_\_\_ o'clock.

b.



It is \_\_\_\_\_ o'clock

6. Write the number names.

a. 9 \_\_\_\_\_

b. 12 \_\_\_\_\_

7. Compare the following using "taller" or "shorter".



Okello

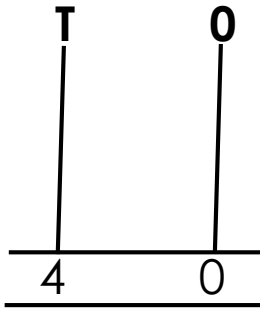
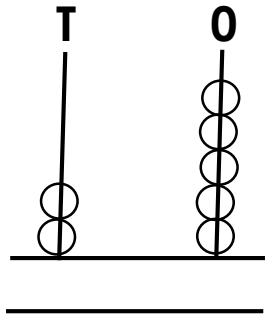


Ruth

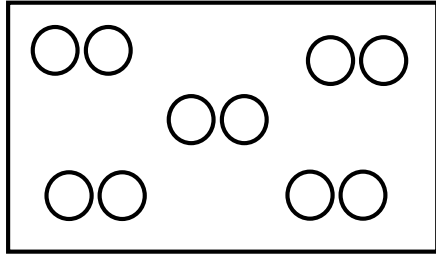
Ruth is \_\_\_\_\_ than Okello.

Okello is \_\_\_\_\_ than Ruth.

8. Complete the abacus.



9. Group the eggs in twos.




- a. There are \_\_\_\_\_ groups of twos.  
b. How many eggs are there altogether?  
\_\_\_\_\_ eggs.

10. Multiply;

$$2 \times 3 = \underline{\quad}$$

$$5 \times 0 = \underline{\quad}$$

11. Match correctly.



4

2

7

9

12. **Write the missing letters.**

Sund \_\_\_\_ y

Fr \_\_\_\_ day

13. **Fill in correctly.**

35 = 3 tens 5 ones.

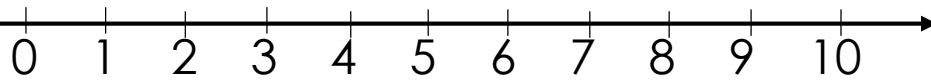
24 = \_\_\_\_ tens \_\_\_\_ ones.

19 = \_\_\_\_ tens \_\_\_\_ ones.

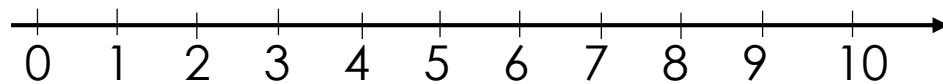
7 = \_\_\_\_ tens \_\_\_\_ ones.

14. **Use a numberline to workout:**


a.  $3 + 2 =$  \_\_\_\_\_




b.  $5 - 3 =$  \_\_\_\_\_




15. **Join the sets below.**



+



=



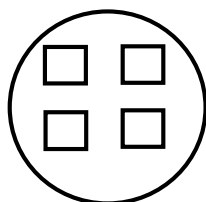
6

+


2

=


\_\_\_\_\_



+



=



4


+

0

=


\_\_\_\_\_

16. **Answer correctly.**



5 metres

**Ruler A**



2 metres

**Ruler B**

a. Which ruler is longer?

\_\_\_\_\_

b. Ruler \_\_\_\_\_ is shorter.

c. Ruler A has \_\_\_\_\_ metres.

17. **Fill in the missing numbers.**

a.  $6 + \square = 9$

b.  $\square + 5 = 7$

18. **Circle the less number.**

**(1mk@)**

a. 10 and 20

b. 5 and 2

19. **Add correctly;**

a.  $3 + 1 + 2 = \underline{\hspace{2cm}}$

b.  $2 + 3 + 5 = \underline{\hspace{2cm}}$

20. **Word problems.**

There are \_\_\_\_\_ days in a week.

21. How many letters are in the word "Sunday"?

\_\_\_\_\_ letters.

|     |  |
|-----|--|
| 22. | I have _____ fingers.  |
| 23. | Tom is 7 years old. Tina is 4 years old.<br>How old is Tom and Tina altogether?  |
| 24. | <b>Write these numbers in figures.</b> <span style="float: right;"><b>(1mk@)</b></span><br>a. fourteen _____<br>b. twenty five _____<br>c. eight _____ |
| 25. | Write a half in figures. <span style="float: right;"><b>(1mk)</b></span><br>_____  |

**-The end-**