

PRIMARY SEVEN
SOCIAL STUDIES AND RELIGIOUS EDUCATION

Time allowed: 2 hours 15 minutes

Name: _____

School Name: _____

Read the following instructions carefully:

1. The paper has **two** sections: **A** and **B**
2. Section **A** has 40 questions (40 marks)
3. Section **B** has 15 questions (60 marks)
4. Answer **ALL** questions. All answers to both Sections A and B must be written in the spaces provided.
5. All answers must be written using a blue or black ball point pen or ink. Diagrams should be drawn in pencil.
6. Unnecessary crossing of work may lead to loss of marks.
7. Any handwriting that cannot be easily read may lead to loss of marks.
8. Do **not** fill anything in the boxes indicated;
For Examiner's use only.

FOR EXAMINER'S USE ONLY

FOR EXAMINER'S USE ONLY

Qn. No	MARK	SIGN
1 – 10		
11 – 20		
21 – 30		
31 – 40		
41 – 43		
44 – 46		
47 – 49		
50 – 52		
53 – 55		
TOTAL		

Turn over

SECTION A

(Questions in this section carry 1 mark each)

1. Which country in East Africa is not crossed by the Equator?

.....
.....

2. Why is LakeKatwe important to the people of Uganda?

.....
.....

3. Where in Tanzania is diamond mined?

.....
.....

4. What is a crater lake?

.....
.....

5. Which country is separated from Uganda by river Semliki?

.....
.....

6. Why are Ugandans below 18 years not allowed to vote in national elections?

.....
.....

7. How is crude oil transported to Mombasa and Dar-es-salam for refining?

.....
.....

8. Who was the founder of the Uganda National Congress?

.....
.....

9. What is a "Protectorate" as known during the colonial period?

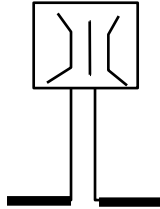
.....
.....

10. Apart from being a missionary, what else was DavidLivingstone's work?

.....
.....

11. Give one reason why Semei Kakungulu is remembered in the history of Uganda.

.....
.....



12. What does the road sign above tell road users?

.....
.....

13. What is recycling?

.....
.....

14. State the role of the Electoral Commission in democracy.

.....
.....

15. Which means did the people of Kenya use to get independence?

.....
.....

16. Why did the British use indirect rule to administer most parts of Uganda?

.....
.....

17. In which kingdom were the **Abarusura** used?

.....
.....

18. How did the work of explorers help European countries to get colonies in East Africa?

.....
.....
19. How can a good road network promote trade in East Africa?

.....
.....
20. Name the main cash crop grown on Zanzibar Island.

.....
.....
21. What is the name of the bank which is jointly owned by all the East African countries?

.....
.....
22. Why is there snow on top of Mt. Kilimanjaro?


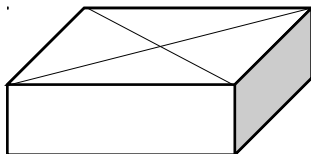
.....
.....
23. Give any one export from which Uganda earns foreign exchange.

.....
.....
24. State one problem caused by overgrazing.

.....
.....
25. In which East African country was a railway line first built?

.....
.....
26. What is a national budget?

.....
.....
27. Draw the map of the box below.



28. In what way did William Mackinon help in the development of East Africa?

.....
.....

29. Give any one result of the Lamogi rebellion.

.....
.....

30. Mention any one disadvantage of a country having a small population.

.....
.....

31. Apart from attracting tourists, suggest any one way waterfalls can be useful to man.

.....
.....

32. Why is the area around Lake Victoria suitable for farming?

.....
.....

33. Name the modern means of communication which was affected by digital migration in Uganda.

.....
.....

34. What would be the economic value of keeping donkeys in our homes?

.....
.....

35. How can soil erosion be controlled in hilly areas without using terraces?

.....
.....

36. How was the power of the Kabaka reduced by the 1900 Buganda Agreement?

.....
.....

For each of the questions 37 to 40, answer EITHER a Christian OR an Islamic question but not both. No marks will be awarded to one who attempts both alternatives.

37. Either: Mention any one of the qualities of a good friend.

.....

Or: Mention the first Arab to teach Islam in Buganda.

.....

38. Either: Why do Christians work?

.....

Or: Why do Muslims work?

.....

39. Either: Why should a Christian not fear death?

.....

Or: Why should a Muslim not fear death?

.....

40. Either: What is Prophet Job remembered for?

.....

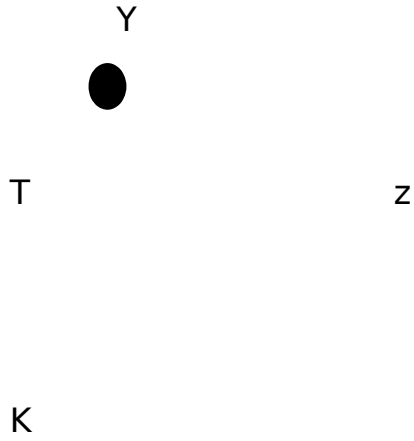
Or: W

.....
.....



marks each)
at follow.

41. Use the



(a) Name the country marked **Y**.

.....
.....

(b) Name the capital city of country **Z**.

.....
.....

(c) Give one reason why tourists visit the area shaded

.....
.....

(d) Using a scale 1:200 km, find the actual distance from Kampala to Dar-es-salaam on a straight route.

.....
.....

42a) Name the railway line that passes through southern Tanzania.

.....
.....

(b) State any two advantages of transporting goods by train.

(i)

.....
.....

(ii)

.....
.....

(c) Give the major reason why countries of the East African community want to develop their railway network.

.....
.....

43a) What is an ethnic group?

.....
.....

(b) State any two reasons ethnic groups were forced to migrate.

(i)

.....
.....

(ii)

.....
.....

(c) Mention one result of ethnic migration in East Africa.

.....
.....

44a) Name any two groups of foreigners that came to East Africa.

(i)

.....
.....

(ii)

.....
.....

(b) Give two reasons why Ludwig Krapf and JohanneRebmann came to East Africa.

(i)

.....
.....

(ii)

.....
.....

45. Otim made a budget for his family for the month of December. In his budget the total income was sh. 500,000/= and expenditure sh. 610,000/=

(a) Give two reasons why Otim made the budget.

(i)

.....
.....

(ii)

.....
.....

(b) What type of budget did Otim make?

.....
.....

(c) Give a reason for your answer in (b) above.

.....
.....

.....
.....

46a) Give any two ways by which a person becomes citizen of Uganda.

(i)

.....
.....

(ii)

.....
.....

(b) Give the meaning of each term below

(i)

constituency.....
.....

.....
.....

(ii) Constitution

.....
.....

47a) Name the first president of each country below.

(i) Tanzania

.....
.....

(ii) Uganda

.....
.....

(b) What is a Republic?

.....
.....

(c) Name the leader who declared Uganda a republic.

.....
.....

48a) Mention three factors that influence vegetation distribution in East Africa.

(i)

.....
.....

(ii)

.....
.....

(iii)

.....
.....

(b) Give one reason why areas with thick forests receive plenty of rainfall.

.....
.....

49a) Apart from fish, mention two other products from swamps.

(i)

.....
.....

(ii)

.....
.....

(b) Give any two reasons why a high population is not good for swamps.

(i)

.....
.....

(ii)

.....
.....
50a) Which arm of government decides whether one has broken the law or not?

.....
.....
(b) What is the main duty of the police?

.....
.....
(c) Give the title of the head of the Uganda Police.

.....
.....
(d) State the major reason why police officers wear uniforms.

.....
.....
For each of the questions 51 to 55, answer EITHER Christian OR Islamic questions but not both. No marks will be awarded to a pupil who attempts both alternatives.

51. **Either:**

(a) Who sent the Holy Spirit to the disciples?

.....
.....
(b) In which form did the Holy Spirit appear to;
(i) the disciples?

.....
.....
(ii) Jesus Christ?

(c) How was the Holy Spirit helpful to the disciples?

.....
.....

Or:

(a) Name the prophet who received salaah (prayer) as a pillar of Islam.

.....
.....

(b) Which prayer do Muslims perform latest in the evening?

.....
.....

(c) Give two reasons why Muslims pray.

(i)

.....
.....

(ii)

.....
.....

52. **Either:**

(a) Name the greatest source of happiness for a Christian.

.....
.....

(b) Give two reasons why it is good to give to others.

(i)

.....
.....

(ii)

.....
.....

(c) How did Jesus show that he cared for the needs of others?

.....
.....
Or:

(a) What is uprightness?

.....
.....
(b) Identify any two problems of adolescence.

(i)

.....
.....
(ii)

.....
.....
(c) Give any one benefit of respecting elders.

.....
.....
53. **Either:**

(a) Who spoilt the good relationship between God and man?

.....
.....
(b) Where was man living before his good relationship with God was broken?

.....
.....
(c) What did Adam and Eve do that annoyed God?

.....
.....
(d) How did God restore His good relationship with man?

Or:

(a) What was Musa doing when Allah called him?

.....
.....

(b) Who went with Musa to Egypt?

.....
.....

(c) Why did the person named in (b) above go with Musa?

.....
.....

(d) Name the holy book that Allah gave to Musa.

.....
.....

54. **Either:**

(a) Who brought the good news to Mary?

.....
.....

(b) Why was Mary considered to be a blessed woman?

.....
.....

(c) What was the work of Joseph, Mary's husband?

.....
.....

(d) What was God's purpose of sending Jesus Christ on earth?

.....
.....

Or:

(a) Name the last and greatest prophet in Islam.

.....
.....

(b) Who was the mother of the prophet mentioned above?

.....
.....
(c) Why was Prophet Muhammad hated by some people in Mecca?

.....
.....
(d) Name the angel who asked Muhammad to read the Qur'an.

.....
.....
55. **Either:** (a) When should Christians pray?

.....
.....
(b) Who taught Christians how to pray?

.....
.....
(c) What should a Christian do before praying?

.....
.....
(d) Why should a Christian pray?

.....
.....
Or:

(a) What is ablution?

.....
.....
(b) Mention any two types of ablution.
(i)

.....
.....
(ii)

.....

.....

c) Mention one reason why a Muslim performs ablution.

.....

.....

Good Luck

