

PRIMARY THREE

LITERACY II

Time allowed: 2 hours 15 minutes

Name: _____

School: _____

Read the following instructions carefully:

1. The paper has **two** sections: **A** and **B**
2. Section **A** has 40 questions (40 marks)
3. Section **B** has 15 questions (60 marks)
4. Answer **ALL** questions. All answers to both Sections A and B must be written in the spaces provided.
5. All answers must be written using a blue or black ball point pen or ink. Diagrams should be drawn in pencil.
6. Unnecessary crossing of work may lead to loss of marks.
7. Any handwriting that cannot be easily read may lead to loss of marks.
8. Do **not** fill anything in the boxes indicated; For Examiner's use only.

FOR EXAMINER'S USE ONLY

FOR EXAMINER'S USE ONLY

Qn. No	MARK	SIGN
1 – 10		
11 – 20		
21 – 30		
31 – 40		
41 – 43		
44 – 46		
47 – 49		
50 – 52		
53 – 55		
TOTAL		

Turn over

SECTION A

1. Write one symbol of a school.

2. Give one use of a camel to people.

3. Mention one example of a temporary house.

4. What is the work of a school nurse?

5. In what season do farmers plant their crops?

6. Give one means of road transport.

7. Circle the first person to live on earth.

Kintu Nambi Adam Walumbe Eve

8. In which compass direction does the sun set?

9. What product do we get from sugarcanes?

10. Give the use of desks in your classroom.

11. Write **L.C** in full.

12. **Draw and name the main natural source of water.**



13. How is a teacher important in a community?

14. Give any one example of a garden tool.

15. Why do people have mobile phones?

16. Underline the biggest ethnic group.

Nilotics, Hamites, Bantu, Nilo-hamites

17. What is a community?

18. What do people do in order to get money?

19. Give any one source of food.

20. Which element of a good map tells what the map is showing?

21. Why do people wear clothes?

22. What does a cow feed on?


23. Why do children go to school?

24. What is the work of a blacksmith?

25. Who is the Minister of Education and Sports?

26. Kenyans are from Kenya as _____ are from Tanzania.

27. Name the road sign shown below.

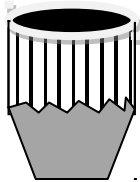


28. Circle the cash crop only.

banana cassava coffee potatoes

29. Why do some people keep cats at their homes?

The diagram below shows an instrument. Use it to answer question 30.



30. What is the use of the instrument shown above?

31. Give one duty of a Policeman.

32. Write any one danger of electricity.

33. Draw and name any one product from animal skins.



34. Write the local name for Lake Victoria.

35. Mention any one raw material used to make cloth.

For each of questions 36 to 40, answer EITHER a Christian OR an Islamic question but not both.

36. **Either:** Name any one non-living thing which God created.

Or: Name any one non-living thing which Allah created.

37. **Either:** Write any one way we talk to God.

Or : Write any one way of talking to Allah.

38. **Either:** How many apostles did Jesus have?

Or : How many times should a Muslim pray in a day?

39. **Either:** Name the place where Jesus was born.

Or : Name the place where Prophet Muhammad was born.

40. **Either:** Why do Christians celebrate Christmas day?

Or : In which book do we find Surat-Al-Nasr?

SECTION B

41. **Write True Or False about the ethnic groups.**

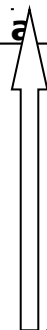
(a) Bantu is an ethnic group. _____

(b) Millet is the staple food for Baganda. _____

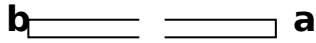
(c) The Acholi belong to the Nilotic group. _____

(d) The Banyoro speak Luganda as their mother tongue.

42. **Below is the diagram of a compass direction. Use it to answer questions that follow.**



North



(a) Name the points marked **a** and **b**.

a. _____

b. _____

(b) Give the use of the compass direction.

(c) What do we call the four main points of a compass?

43. **Write the following in full.**

(a) Dr. _____

(b) Hm. _____

(c) Sch. _____

(d) Tr. _____

44. **Match the animal in List A to its use in List B**

	List A (Animal)	List B (Use)
(i)	cow	gives us eggs
(ii)	dog	gives us milk
(iii)	sheep	guards our homes
(iv)	hen	provides us with mutton
		gives us veal

(i) cow _____

(ii) Dog _____

(iii) Sheep _____

(iv) Hen _____

45. Write the features shown by these symbols on a map.

46. **Read the sentence and give one word for the underlined group of words.**

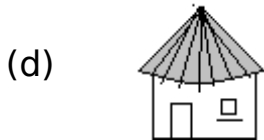
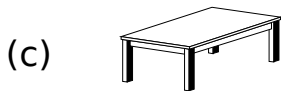
(a) Farmers grow crops in the land between two hills.

(b) We climbed but did not reach the top of the mountain.

(c) The condition of the atmosphere today is very good.

(d) Can you show me the head of this school now? _____

47. **Draw maps of the following pictures.**



48. **Complete each sentence with a suitable word.**

Our country is called _____. It is found on a continent called _____. The capital city of Uganda is _____. Kampala is found in _____ kingdom.

49. **Tick the things which promote peace and security at school.**

Stealing

fighting

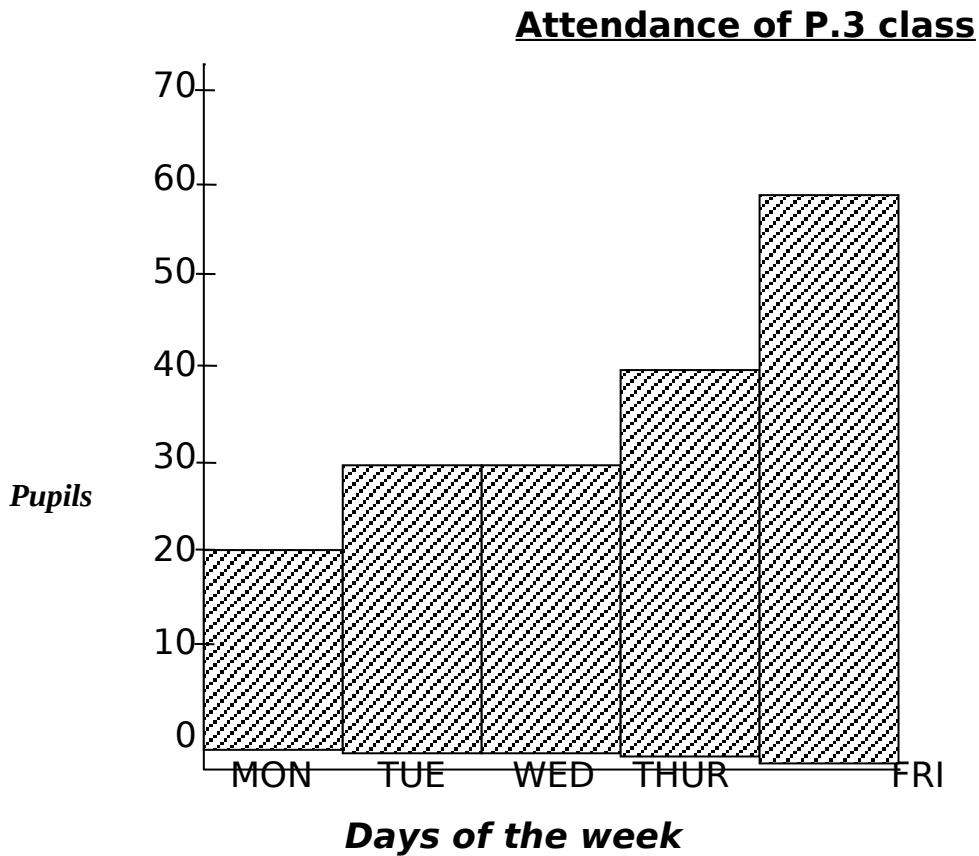
sharing

Love

forgiving

slapping

50. **The graph below shows the attendance of Primary Three class of Sir Apollo Kaggwa.**



(a) What is the graph about?

(b) Which day had the highest number of pupils?

(c) How many pupils attended class on Tuesday?

(d) On which day was the attendance lowest?

For each of the questions 51 to 55, answer EITHER the Christian OR Islamic question but not both.

51. **Either:**

(a) Why do Christians go for prayers on Sunday?

(b) Who leads prayers in a church?

(c) Why do Christians pray to God?

(d) Mention any one good thing God has given to you.

Or:

(a) Where do Moslems go for Juma prayers?

(b) Who leads prayers in a mosque?

(c) Why do Moslems pray to Allah?

(d) Mention any one good thing Allah has given to you.

52. **Either: Read the story and answer the questions.**

Jesus told the fishermen to put their nets into the deep water. These fishermen had caught nothing in the night. But when Jesus told them; they caught a lot of fish that they even told others to help them. Both boats were filled with fish. These fishermen were amazed. They left the boats and followed Jesus.

(a) Who told the fishermen to put their nets into the deep water?

(b) What had happened to these fishermen in the night?

(c) Where did the fishermen put their fish?

(d) Write the last sentence of the story above.

Or:

- (a) What is the holy book for Moslems called?

- (b) Who received the holy Qur'an from Allah?

- (c) Name two places where the Qur'an can be found.
 - (i) _____
 - (ii) _____

53. **Either:**

Match the name in list A to the correct statement in list B

List A

List B

- | | |
|--|---|
| <ul style="list-style-type: none"> (a) Lazarus (b) Peter (c) Moses (d) Judas | <ul style="list-style-type: none"> betrayed Jesus received the ten commandments was raised from the dead by Jesus. denied Jesus three times. went to heaven alive. |
|--|---|

- (a) Lazarus _____
- (b) Peter _____
- (c) Moses _____
- (d) Judas _____

Or: Draw and name the symbols of Islam found on a mosque.

- (a) Give the importance of Adhan.

- (b) Where do Moslems face when praying?

54. **Either:**

Give four people who serve us in church.

- (i) _____
- (ii) _____
- (iii) _____
- (iv) _____

Or:

Write any four of the pillars of Islam.

- (i) _____
- (ii) _____
- (iii) _____
- (iv) _____

55. **Either:** a) Draw and name any four parts of your body.

Or: Match the Prophet to what they did.

	List A	List B
(i)	Prophet	- He suffered a lot but remained faithful to Allah. - Allah sent him to Egypt to rescue His people. - He built the ark and saved lives from the floods. - He is the last and greatest prophet.
(ii)	Mohammad	
(iii)	Prophet Nuhu	
(iii)	Prophet Musa	
	Prophet Ayub	

- (i) Prophet Mohammad _____
- (ii) Prophet Nuhu _____
- (iii) Prophet Musa _____
- (iv) Prophet Ayub _____

Good Luck

