

FRIDAY, 21ST AUGUST, 2020

PRIMARY ONE MATHEMATICS HOME WORK

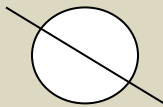
NAME: _____

1. Set $X = \{ 1, 2, 3, 4, 5 \}$

$Y = \{ 1, 7, 9, 3 \}$

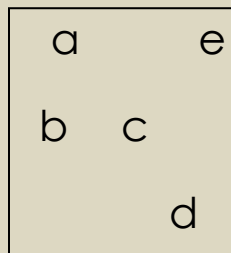
Find $X \cap Y$

2. Identify the set symbol below.

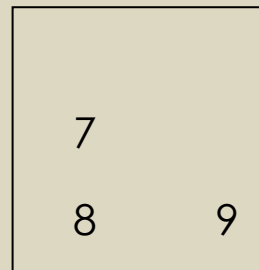


3. Use more or less to fill in the gaps.

A



B



Set A has _____ members than set B.

4. Write the following in Roman numerals.

20 = _____

9 = _____

5. Convert these Roman numerals into Hindu Arabic numerals.

a) XCIII = _____

b) LV = _____

c) XLIX = _____