

14 DAYS LOCKDOWN REVISION WORK

FOR PRIMARY SEVEN

Stay at home, Wash your hands, Revise and Revise

SECTION A

For each of the questions 1 - 5, fill in the blank space with the most suitable word or group of words to complete each of the given sentences

1. It has been raining _____ morning.
2. Uganda is likely to become a desert _____ people plan more trees.
3. We are _____ forward to sitting for End of Term I Examinations.
4. Maureen needn't _____ gone to the shop at night.
5. The _____ has been repairing my sister's car since last week.

Complete each of the sentences 6 - 15 using the correct form of the word or words given in brackets

6. My father's hen _____ an egg yesterday.(lay)
7. All my classmates are _____.(Rwanda)
8. The people of Uganda have been impoverished because of poor _____ delivery by their leaders. (serve)
9. Erica listened to her mother _____.(careful)
10. The game park ranger _____ survived being killed by the stray lion.(narrow)
11. We _____ a lovely three -week holiday in the South of Spain last year. (spend)
12. Having washed their clothes on Saturday, they _____ them on the line. (hang)
13. All the _____ were at the Examination centre in time.(invigilate)
14. Linda and her bandmates like wearing _____ clothes at every show. (colour)
15. This is the girl to whom the letter _____.(give)
16. The traffic police is always warning drivers against reckless _____. (drive)

In question 18 - 19, write the full form of each of the given short forms

17. Shan't _____

18. Vol. _____

In questions 21 - 22, arrange the given words to form a correct sentence

19. flour, flavor, floor, flora, flood

20. seek, see, seam, sea, sleep

In questions 21 - 22, arrange the given words to form a correct sentence

21. power voted he into was by electorate the

22. zebra crossing at a busy road cross a

In questions 23 - 24, use each of the given words in a sentence to show the difference in meaning

23. bee _____

24. be _____

In questions 25 - 26, re-write the sentences, giving the opposite of the underlined words

25. There are many body changes that occur in boys during puberty.

26. Some private primary schools in Uganda give conducive environment for learning.

In questions 27 - 28, write the plural form of the underlined word or group of words

27. The tailor lost his pair of scissors

28. Avocado gives the body good health.

In questions 29 - 30, rewrite the sentences giving one word for the underlined group of words

29. The woman who heads that school has called for a parents' meeting today.

30. Immediately we entered the restaurant, we were handed the list of food available.

SUB SECTION II

In each of the questions 31 - 50, re-write the sentences as instructed in the brackets

31. The small boy prefers playing to reading his books.

(Re-write the sentences using.....than)

32. She is rich. She is famous. (Join these sentences using:not only.....)

33. "Where is the kitten, David?" Tony asked.

(Re-write the sentence using:asked)

34. Maria was sick during the Examination but she got a first grade.

(Re-write the sentence using:the fact that.....)

35. Patricia and Patrick prefer biscuits to sweets.

(Re-write the sentence using: more than.....)

36. No sooner had I arrived at the party than the chief guest left.

(Re-write the sentence using: immediately.....)

37. He reached the bus station before midnight.

(Re-write the sentence using.....arrived.....)

38. School children should learn to speak their local languages, if they don't, they will lose their identity.
(Rewrite the sentences using:.....or else.....)
-
39. The police woman handcuffed a young man. The young man was suspected of stealing money. (Begin: Being suspected.....)
-
40. Pedestrians should not cross a busy road at a bend or corner.
(Re-write the sentences using:ought.....)
-
41. He insulted her in front of her friends. He threatened to beat her up.
(Join the sentences usingnot only.....)
-
42. Jacob is a rich man. James is a rich man.
(Re-write as one sentence using:.....and so.....)
-
43. We use ropes to tether goats.
(Rewrite the sentence using:.....used for.....)
-
44. The baker did not make any cakes because he did not get flour.
(Re-write the sentence beginning: If the baker had.....)
-
45. When the holiday is long, you do many activities.
(Re-write the sentence beginning: Thethe.....)
-
46. I intend to buy a car next year. (Re-write the sentence beginning: My)
-
47. Anna does not speak French. David does not speak French.
(Re-write as one sentence beginning: Neither.....)
-
48. John is a very good teacher. (Re-write the sentence beginning: What.....)
-
49. The girls and boys in the boarding section are used to watching TV every Sunday. (Re-write the sentence using.....accustomed.....)
-
-

50. All the pupils visited a very interesting site. All of them enjoyed.
(Re-write as one sentence using:suchthat.....)
-

SECTION B

51. Below is a short passage, read it carefully and answer in full sentence the questions that follow

NDIFUNA'S RESTAURANT

In Kinawa village lives an old man called Ndifuna. He has three children; one boy and two girls. The girls wake up early in the morning at 5:00am to go and work in their father's restaurant as waitresses as their mother cooks the food. The boy walks all over the village looking for food that will be prepared in the restaurant the next day. In addition, this boy had to fetch water using a very old bicycle. None of Ndifuna's children goes to school as they are fully in business.

Ndifuna gets a lot of profits from this restaurant because he does not have to pay the workers. Food like matooke, rice, meat, peas, beans and potatoes is sold. Juice is well prepared and most customers pop in for this good, fresh juice that is made from local fruits like pineapples, oranges and passion fruits. The price of food is determined by the sauce, then all the food of one's preference is provided. This is well illustrated on the menu, for example, chicken stew at eight thousand shillings, beans at three thousand five hundred shillings, peas at four thousand shillings and fish at ten thousand shillings. When one pays for the stew, he is free to choose any food. Juice is at seven hundred shillings a glass.

At Ndifuna's restaurant, food is well prepared and the place is really clean. Furthermore, the waitresses are very kind, disciplined and welcoming. This had made their business attract a lot of customers from near and far.

The customers are received from morning to evening and sometimes even at night. Heavy breakfast is served in the morning; Katogo with tea and immediately after, the chef makes sure that lunch is also ready.

The most interesting thing in this restaurant is that one pays before being served. On the wall, there are instructions, "ORDER WITH CASH." The money is paid to the cashier who offers a receipt. No customer leaves without paying for the food eaten. Ndifuna has been able to build himself a house, buy plots of land and to live a happy life. He enjoys his job, however, people have always blamed him for not taking his children to school.

Questions

- a. What is the passage about?

- b. How many children does Ndifuna have?

- c. At what time do the children start working?

- d. What determines the price of food at this restaurant?

- e. How much is a plate of fish with all the food?

- f. Why do you think this restaurant receives a lot of customers?

- g. How much is juice at this restaurant?

- h. Who receives the money in this restaurant?

- i. Write the opposite of the word "profits" .

- j. Give another word to mean: preference .

52. Study the poster below carefully and answer the questions in full sentences

DEVINE PARENTS' SCHOOL .
PREFECTS' ELECTIONS 2020 - 2021

It is exactly a fortnight left to the voting day!

Date: Friday 31st March, 2020
Time : 9:00 am - 1:00pm
Venue : Kapeeka Football Ground

Note:
Deadline for submission of Nomination Forms is Saturday, 18th March, 2017.

- All candidates must abide by the Electoral Rules and Regulations
- High Academic achievement is an added advantage towards attaining any desired post.
- All pupils are free to contest for any post of their choice

THE WINNER TAKES IT ALL

GOOD LUCK!
(Secretary, Electoral Commission)
13th February, 2020

Grace Chantal

Questions

a. What is the poster about?

b. Who wrote the poster?

c. When will the election take place according to the poster?

d. What do you think will happen to a pupil who submits the forms after the deadline?

e. How many weeks are remaining to the voting day?

f. Where will the voting exercise take place?

g. What added advantage is considered for the successful candidate?

h. How long will the voting exercise take that day?

i. Why do you think it's important to have a prefects' body in a school?

j. Which school will hold these elections?

53. Read the poem below and answer the questions about it in full sentences

SAFETY ON THE ROAD

Everyone, everywhere!

People on the move

Back and forth they travel

Vehicles rushing left and right

Pedestrians, motorists and cyclists

Crossing at every point of the road

Leaving traffic police officers in confusion

Who is to blame for safety on the road?

Everyone, Everywhere!

Overloaded vehicles hooting

Noise breaking ears of the hearers

Reckless drivers and cyclists in the lead

As if it's a motor rally car race,
To see who reaches the destination first!
And the Highway Code is left in silence
Who is responsible for safety on the road?

Everyone, Everywhere!
Taxi drivers loading and offloading
At every point of the road, they are busy.
Passengers heading for their destinations
While others crossing busy roads
Just at the mercy of their creator!
Where is safety on the road?

Everyone, Everywhere!
Whose concern is it, mine or yours?
Speeding cars in a rush
With no respect for life they crash
And causing fatal accidents as they smash
Innocent travelers die with cries and sorrows
Laving relatives and friends in endless pain.
Why not listen and obey road safety rules?

Attention, everyone, everywhere!
Road safety is everybody's concern
Stop pointing fingers and play your part
Be careful as you use the road
Follow and respect the Highway code
Collaborate with the traffic police
To assist in controlling traffic
Together we shall save life.

Joy Nabaasa P.6 Y
Bushenyi Parents' School

Questions

a) What is the poem about?

b) How many stanzas are in the poem?

c) Who wrote the poem?

d) In what class is the writer?

e) Who cross at every point of the road according to the poem?

f) Who is responsible for road safety according to the poem?

g) In which stanza is loading and offloading talked about?

h) Where does the writer study from?

i)

j)

54. Read the dialogue below between Abel and Ben, and then answer the questions that follow in full sentences

Abel : What does democracy mean?

Ben : Democracy means a system in which leaders are elected by people.

Abel : Which leaders exactly are you talking about?

Ben : These could be prefects in your school, the president, Members of Parliament and other Local Council leaders.

Abel : When are these leaders elected in Uganda?

Ben : School prefects are elected every year, the president and other Local Council leaders after every five years.

Abel : How important is this democracy in a country like Uganda?

Ben : Generally, democracy promotes unity among the people in a country.

- Abel** : Does democracy promote peace among its members?
Ben : Wonderful! yes, it does. Countries with democracy are very peaceful and people live in harmony.
- Abel** : Is Uganda a democratic country?
Ben : Yes, it is. This is seen through the elections we participate in to choose the leaders we want.
- Abel** : How can children exercise democracy at school?
Ben : This can be done through electing school and class prefects and taking part in decision making.
- Abel** : Then what happens to countries without democracy?
Ben : There are always conflicts among its members. Even homes without democracy have conflicts and because of this, such countries don't develop.

Questions

1. Which leaders are elected in your school?

2. What shows that Uganda is a democratic country?

3. Why does the writer complain about most road users?

4. Write a suitable title to this poem.

5. How do conflicts affect a country?

6. Why do we need democracy in our homes?

7. What is democracy according to ben?

8. Which activity is done in schools to show democracy?

9. Apart from the prefects and the president, which other leaders are elected?

10. When is the president elected?

11. Give another word or group of words to mean;

i) conflict _____


ii) promote _____

55. Use the given word bank to fill the puzzle below

WORD BANK

accidental, careless, disasters, equipment, entry

harmful, prevention, purpose, respond, it



ACROSS

- 1. Stopping something from happening.
- 4. the reason something is done.
- 5. to react
- 7. not paying attention
- 8. happens for no apparent reason, unexpected
- 9. Pronoun used on animals.
- 11. Where one enter from.

DOWN

2. tools needed for a job
3. causing harm or hurt
6. sudden misfortunes

END

MATHEMATICS

Candidate's name :.....Stream.....


Index No.

SECTION	MARKS
A	
B	
T	

DO NOT OPEN THIS BOOKLET UNTIL YOU ARE TOLD TO DO SO
Read the following instructions carefully.

1. The paper has two sections: A and B.
2. Answer ALL questions. All answers to both sections A and B must be written in the spaces provided.
3. All answers must be written using a blue or black ball point pen or ink. Diagrams should be drawn in pencil.
4. No calculators are allowed in the examination room.
5. Unnecessary changes of work may lead to loss of marks.
6. Any handwriting that cannot be easily read may lead to loss of marks

1. Workout : $40 + 136$.

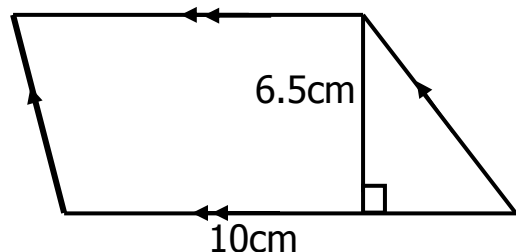
2. Express " Four hundred forty thousand four" in numerals.
3. Simplify: $3y^2 + 3xy^2 - 4y^2 + xy^2$.
4. If  stands for 6 balls, how many such pictures represent 42 balls?
5. What is the product of the next two numbers in the sequence;
42, 31, 24, 19, _____, _____
6. A cup is $\frac{3}{4}$ full of water. If Jane drunk $\frac{2}{3}$ of the water in the cup, what fraction of the water remained?

7. Express CDXCVI in Hindu –Arabic numerals.

8. Given that $P = (2, 3, 5, 11, 19)$ and $Q = (1, 3, 5, 7, 9, 11, 13)$. How many proper subsets are in the intersection of set P and Q?

9. Express 15m/sec as km/hr.

10. Workout the area of the figure below.



11. If 5 books cost sh. 3000. What is the cost of three quarters of a dozen of similar books?

12. Workout: $2^3 + 4^0$

13. Round off 59.96 to the nearest tenths.

14. If a dice is tossed once. What is the chance that a square number shows up?

15. Using a ruler and a pair of compasses only, construct an angle of 150° .

16. Subtract 2121 **three** – 122 **three**

17. Given that $x = y$ and $y = 4$. Evaluate $\frac{3x + 5}{y}$
18. Find the circumference of a circle whose radius is 21dm
19. If today is Friday, what day of the week was it 45 days ago?
20. Given that $F_x = (2_1, 2_2, 3_1, 3_2)$ and $F_y = (2_1, 2_2, 2_3, 3_1)$. What is the H.C.F of F_x and F_y ?

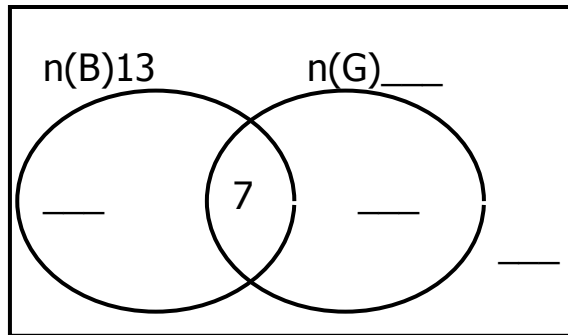
SECTION B (60 MARKS)

21. In a class of 25 pupils, 13 pupils eat beans (B), 7 pupils eat both greens (G) and beans, X pupils eat greens (G) only and 4 pupils eat none of the sauces.

a) Use the above information to complete the venn diagram below.

(2marks)

$$n(\Sigma)=25$$



b) Find the value of x.

(2marks)

c) How many pupils do not eat beans?

(1mark)

22. James spends $\frac{1}{4}$ of his income on rent and $\frac{4}{9}$ of the remainder on food and saves the rest.

a) What fraction does he save?

(3marks)

b) If he saves sh. 30,000. How much money does he earn?

(2marks)

23. The table below shows the marks obtained by P.7 candidates at Cornerstone Junior School in Mukono.

Marks	80	70	96	46
No. of candidates	2	3	4	1

- a) Find the median score (2marks)

- b) What was the modal score? (1 mark)

- c) How many candidates got below the average mark? (3marks)

24. The diagonals of a rhombus are 19dm and 24dm respectively.
a) Calculate its area. (2marks)

b) Find the distance around the rhombus. (4 marks)

25. The sum of three consecutive odd numbers is 111. If the median is y .
a) Find the numbers (3marks)

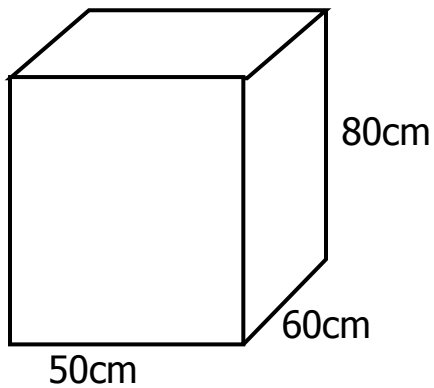
b) Workout their range. (2marks)

26. Given the numeral, 487.96;
a) Expand the above numeral using exponents. (2marks)

b) What is the sum of the place values of 8 and 6? (2marks)

c) Express 487.96 in scientific notation. (1mark)

27. Below is John's rectangular tank full of water for sale.



a) How many litres of water does it contain? (2marks)

b) If he sold all the water in the tank using a 20 litre jerrycan at sh. 550 each. How much money did he get? (3marks)

28. a) Solve for a; $2a + 4 = 1+6$ (2marks)

b) Solve and find the solution set for $2(4 - x) \leq 12$ where x is a whole number?
(3 marks)

29. a) Using a ruler and a pair of compass only, construct triangle PQR where $PQ = 6\text{cm}$, $\angle PQR = 60^\circ$ and $\angle QPR = 45^\circ$. (4marks)

b) Measure \overline{PR} (1mark)

30. Jane went to the market and bought the following items.

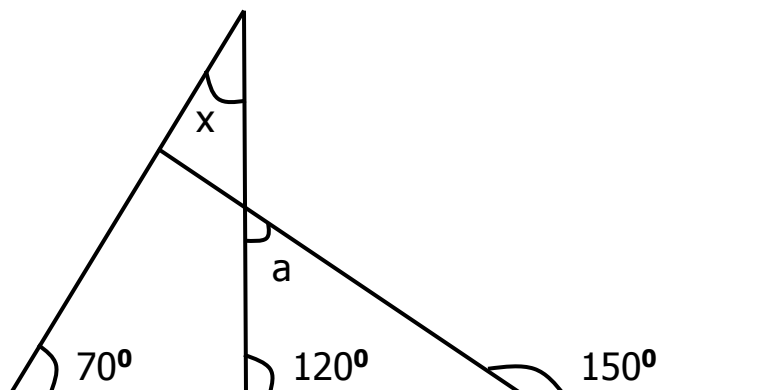
- 4 bars of soap at sh. 12,000.
- 2 ½ kg of meat each at sh. 8,000.
- 2kgs of rice at sh. 2,400 per kg
- 500ml of cooking oil at sh. 3,000 per litre.

a) What is her total expenditure?

(4marks)

b) If Jane was given a discount of 10%. How much did she pay? (2marks)

31. Study the figure below and answer questions that follow



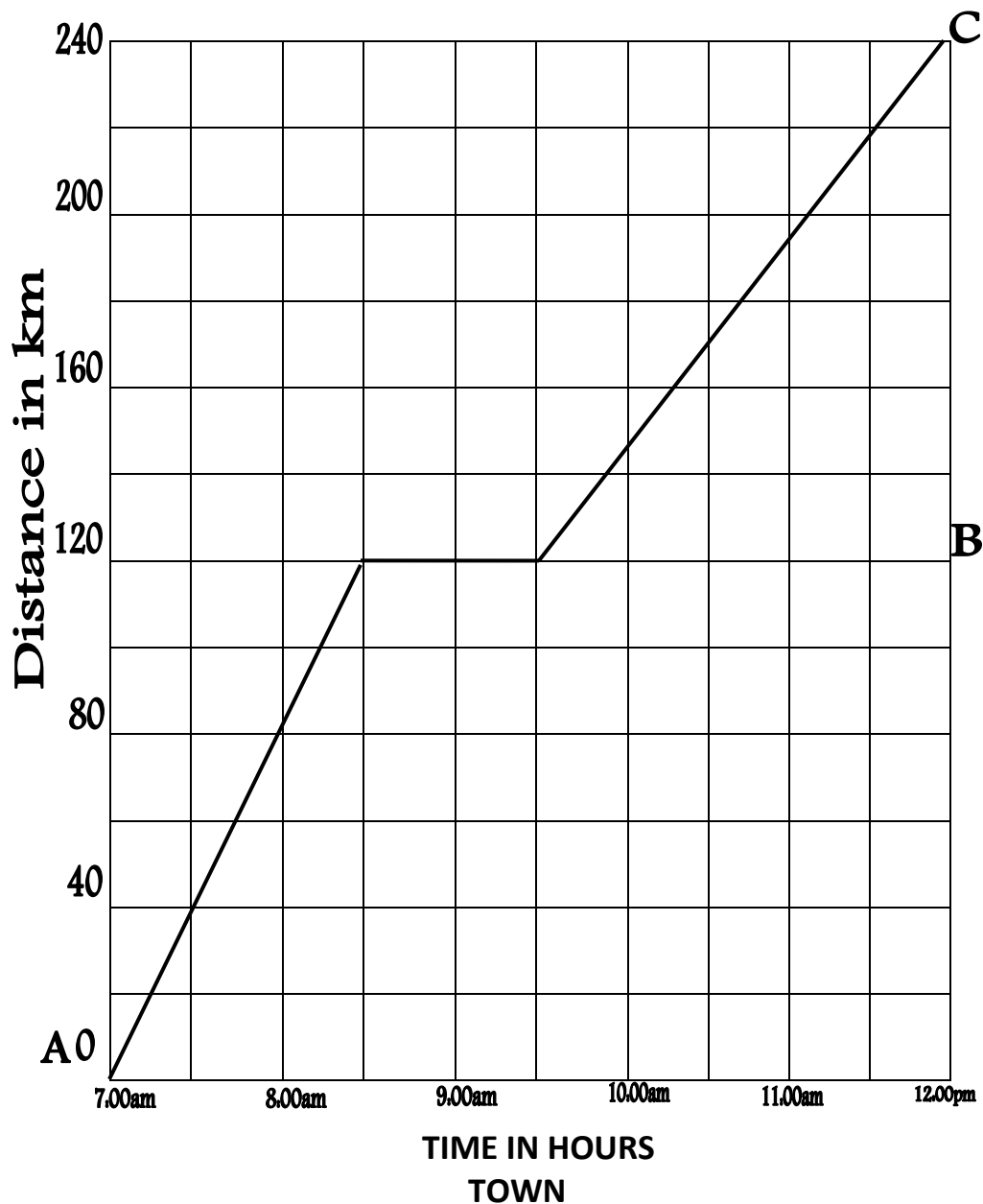
a) Find the size of angle marked

(2marks each)

i) x

ii) a

32. The graph below shows how Okot moved from town A to town C.



a) At what time did Okot reach two B?

(1 mark)

b) For how long did Okot rest at B?

(1mark)

c) Calculate his average speed for the entire journey.

(2marks)

END

SCIENCE

1. Why is vapour in the atmosphere considered as matter?

2. Mention any one possible cause of dehydration in children.

3. Of what importance are ventilators in a living house?

4. Why do most cattle keepers prefer rearing Friesians to other types of dairy breeds of cattle?

5. What happens to the pollen grains when they land on the stigma of a flower?

6. Identify the type of tooth illustrated below



7. Mention any one characteristic that makes a cat to be regarded as a carnivorous mammal.

8. How does a fish depend on the swim bladders?


9. What method of heat transfer enables water in a saucepan to boil when put on fire?

10. Briefly explain how humus is formed.

11. How do railway line constructors prevent bending of rails during railway construction?

12. Give one characteristic that makes enzymes to be easily destroyed by heat.

Use the diagram below to answer questions 13 and 14.



13. To which group of simple machine does the tool above belong?

14. By the help of an arrow, show the direction of effort.

15. Which blood vessel distributes oxygenated blood to all body parts?

16. Why do images in a pinhole camera appear upside down on the screen?

17. Apart from excretion, write any other importance of sweating to the human body.


18. How does smoking lead to lung cancer?

19. Placenta plays an important role during the development of the baby in the womb. How useful is the placenta to the baby?

20. Identify the effect of too much diarrhoea and vomiting to a person.

21. Which kind of injury of the muscular and skeletal system is caused by over stretched muscles?

Below is a foot of a bird



22. Which type of foot is shown above?

23. To which group of birds does the above foot belong?

24. State the usefulness of part X to birds with such a foot.

25. Which body organ in humans has the same function as the feelers of a grass hopper?

26. Why are drops of water seen around a bottle which has been removed from a fridge?

27. State the importance of root hairs to a bean plant.

28. Explain a reason why electric wires appear loose on a hot day between poles.

29. On the diagram below, show how magnetic lines of force flow.



30. Where does fertilization in she-goats take place?

31. Identify any one factor to consider when selecting a suitable site.

32. Identify any one urinary tract infections that can easily lead to contraction of HIV/ AIDS.

33. How is dusting of stores using chemical important during storage of grains?

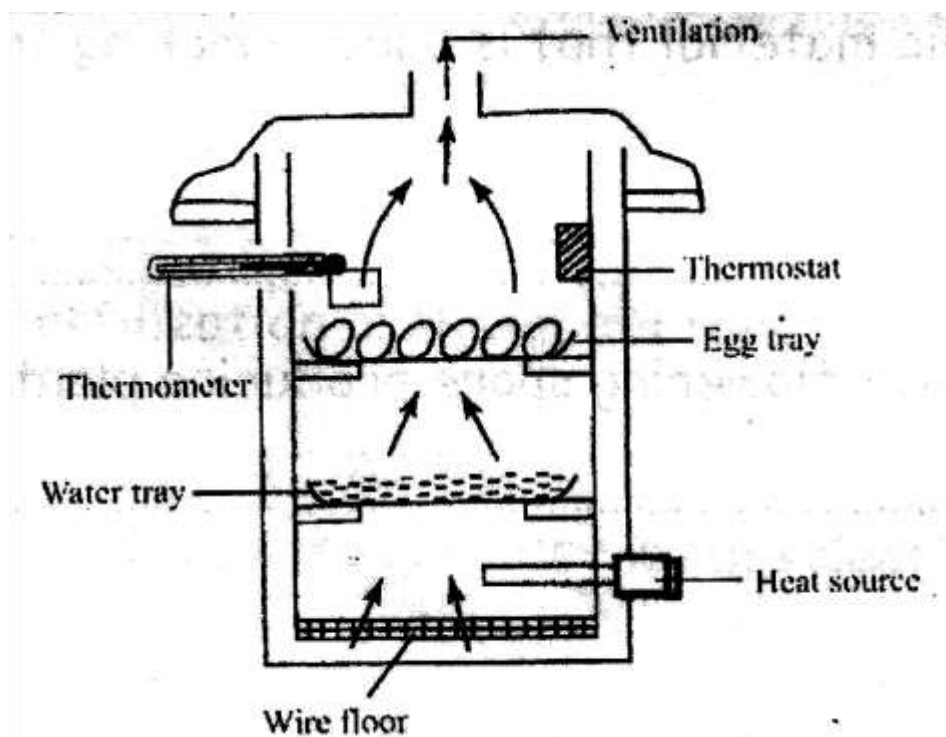
34. State the food deficiency prevented by eating fish.

35. Mention the type of manure got from rabbitary project.
-
36. How is the small intestine adapted to its role of food absorption?
-
37. Suggest any one characteristic of seeds dispersed by animals.
-
38. Why do amphibians lay many eggs?
-
39. Name the non-metallic material that is used in making the positive terminal of a dry cell.
-
40. Write down any one non-flowering spore producing plants.
-

SECTION B

41. a) How are monotremes different from other mammals?
-
- b) What name is given to animals that are active at night and sleep during day?
-
- c) Give any two groups of vertebrates besides mammals.
- i) _____
- ii) _____
42. a) Name the static electricity in nature.
-
- b) What force helps the above type of electricity to take place?
-
- c) Give one way in which the electricity in (a) above is a disadvantage in the environment.
-
- d) How is the electricity above helpful to a crop farmer?
-

43. Study the diagram below and answer questions that follow



a) Name the machine show above. _____

b) What method of hatching eggs use the machine above?

c) Give one advantage of using the above machine in hatching of eggs.

d) Give a reason why the machine above is not commonly used in rural areas.

44. a) How is a charcoal obtained?

b) During the processing of charcoal, state the reason why each of the following is carried out;
i) covering the wood with grass.

ii) covering the wood and grass with soft/ moist soil.

c) Mention one material recommended for stopping charcoal from burning during it's harvest.

45. a) What are resources?

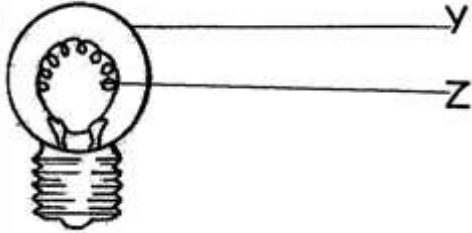
b) Identify any two energy resource found in our environment.

i) _____

ii) _____

c) Why should non-renewable resources be used sparingly?

46. Use the diagram below to answer questions that follow



a) Name part marked Z. _____

b) Why is part marked z coiled?

c) State the energy changes that occur in the bulb when the circuit is complete.

d) Give the function of part marked Y.

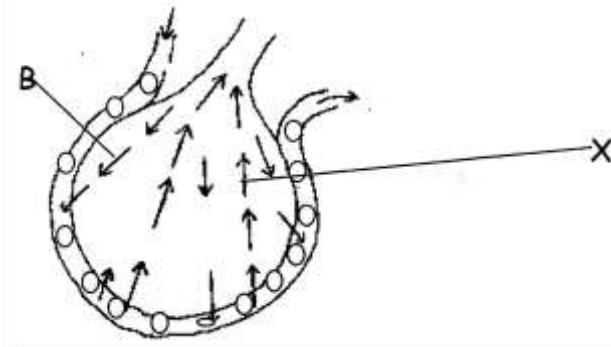
47. a) What is temperature?

b) How does increase in temperature affect plants?

c) Give one reason why mercury is used in thermometers.

d) Convert 77°F to Celsius scale.

48. The diagram below shows parts of the lungs. Use it to answer questions that follow.



a) Identify the structure drawn.

b) By what process does gaseous exchange take place in the structure above?

c) Name the gas marked X.

d) Identify any one disease that attacks the respiratory system.

49. a) Describe the term active smoking.

b) Give one reason why people smoke.

c) State one difference between drug abuse and drug misuse.

d) Identify any one non-infectious disease caused by smoking.

50. a) Write VIP in full as used in sanitation.

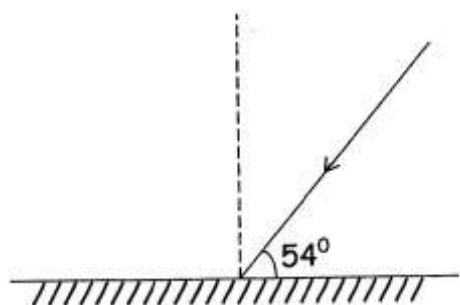
b) State the function of the following parts on a VIP latrine;

i) Vent pipe

ii) Screen

c) Suggest one way of reducing bad smell in an ordinary pit latrine.

51. a) Complete the diagram below



b) Calculate the angle of incidence

(2marks)

c) State the law of reflection of light.

52. a) Describe the following terms as used in sound energy.

i) Pitch

ii) Volume

b) Give any one method of storing sound energy

c) How can stored sound be reproduced?

53. **Match the following excretory organs with their excretory products**

Excretory organs

Liver

Skin

Kidneys

Lungs

Excretory products

water vapour

excess sugar

lactic acid

urine

a) Liver _____

b) Skin _____

c) Kidneys _____

d) Lungs _____

54. a) Describe the term milking.

b) Identify one way of obtaining clean milk during milking process.

c) State the importance of a strip cup during milking process

d) Give any one method of preserving milk.

55. **Study the list of organisms below;**

caterpillar , hen , cabbage, eagle

a) Which of the above organism is;

i) primary consumer _____

ii) tertiary consumer _____

b) Name the source of energy needed by the producer to make its own food.

c) Using the above organisms, construct a food chain.

End.

SOCIAL STUDIES AND RELIGIOUS EDUCATION

Candidate's name :.....Stream.....

Index No.

SECTION	MARKS
A	
B	
T	

DO NOT OPEN THIS BOOKLET UNTIL YOU ARE TOLD TO DO SO
Read the following instructions carefully.

1. Read the instructions carefully

2. Answer ALL questions in Section A & B

3. Answers should be put in the space provided.

4. All answers should be written in blue or black ink.

5. Unnecessary alterations may lead to loss of marks

6. Any handwriting that cannot be read may lead to loss of marks.

1. What is the compass direction of Democratic Republic of Congo from Kenya?

2. Which cash crop is grown in Kumasi in Ghana?

3. Why is it difficult to travel by boat between Jinja and Pakwach?

4. Write UPE in full.

5. Name the ocean current responsible for dry condition in Namib Desert.

6. Why was Liberia not colonized?

7. How does legislature help judiciary to do its work?

8. Which ethnic group in East Africa originated from Cameroon highlands?

9. Give one way democracy is practiced in Uganda.

10. Why is English spoken in Nigeria and Uganda?

11. How do commercial banks help people to develop?

12. Name the organization that replaced organization of African Unity (OAU).

13. Give any one reason for the formation of IBEACO.

14. Give one reason why the British settled in Kenya highlands.

15. Give one advantage which a country with a large population has.

16. How was the Union Jack (British flag) treated on the 9th October, 1962?
-
17. Why is it not proper to harvest crops during a wet season?
-
18. Which important discovery marked the end of Stone Age?
-
19. How did the Berlin conference affect Africa?
-
20. Why is road construction difficult in Kapchorwa district?
-
21. Give one way order is kept at school.
-
22. Give any one reason for the coming of Arabs to East Africa.
-
23. What is the duty of the police in a country?
-
24. Give one way tobacco flue curing affects the environment.
-
25. Name one country in the Horn of Africa.
-
26. Why is Africa known as the cradle land of man?
-
27. Ghana lies on Prime meridian. If the time in Ghana is 8:00p.m. What time will it be in East African standard time?
-
28. What was apartheid as used in South Africa?
-
29. Which body is responsible for building major roads in Uganda?
-

30. Give one example of Crater Lake in Uganda.

31. Name one human basic need.

32. Which mineral is mined in Osukuru hills in Tororo?

33. How is the formation of Atlas Mountains different from Drakensberg Mountains?

34. How are camels helpful to the Berbers of North Africa?

35. Name the major crop grown in the Kilombero irrigation scheme in Tanzania.

For questions 36 – 40, answer either the Christian or the Islamic questions

36. **Either:** Why was King Herod not happy with the birth of Jesus?

Or: Why did Mohammed leave Mecca to go to Medina?

37. **Either:** State one commandment which protects married Christians.

Or: Give one pillar of Iman which is similar to that of Ibadat.

38. **Either:** What does Jesus teach us to do to those who do wrong to us?

Or: What reward is given to a person who repents sincerely to Allah?

39. **Either:** Why were the Jews against Jesus Christ?

Or: How do Moslems get the title Haji or Hajat?

40. **Either:** Why was Moses called to Mt. Sinai?

Or: Which celebration mark the end of fasting during Ramadhan?

SECTION B (60 MARKS)

41. a) Identify one tribe in Nigeria that practices transhumance.

b) Give any two problems faced by the above mentioned people in (a) above.

i) _____

ii) _____

c) Give any one social importance of cattle to the pastoralist.

42. a) What was the Great Trek?

b) State any two results of Great Trek.

i) _____

ii) _____

c) Mention any one place the Dutch settled after the Great Trek.

43. a) Give any two factors that have led to industrial development in Africa.

i) _____

ii) _____

b) State two ways people benefit from industries in an area.

i) _____

ii) _____

44. a) Why were Ugandans not happy with Legco before 1945?

b) Give any first two Ugandans to join Legco.

i) _____

ii) _____

c) How did they join Legco?

45. a) Name any one common market in Africa.

b) State any two benefits of common markets to their member states.

i) _____

ii) _____

c) Why is their limited trade between some member countries of common markets?

46. a) Mention any two oil producing countries in Africa.

i) _____

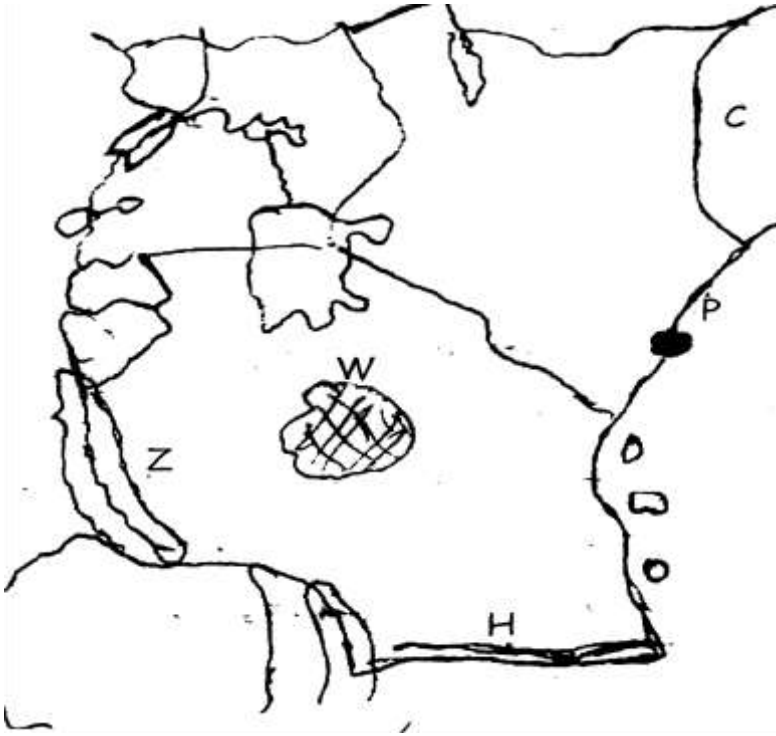
ii) _____

b) Give any two products got from petroleum.

i) _____

ii) _____

47. Use the map to answer questions



a) Name the country C. _____

b) Why is area W having a low population?

c) Of what political importance is river H?

d) Give the importance of town P to Uganda.

48. a) What does the term independence mean?

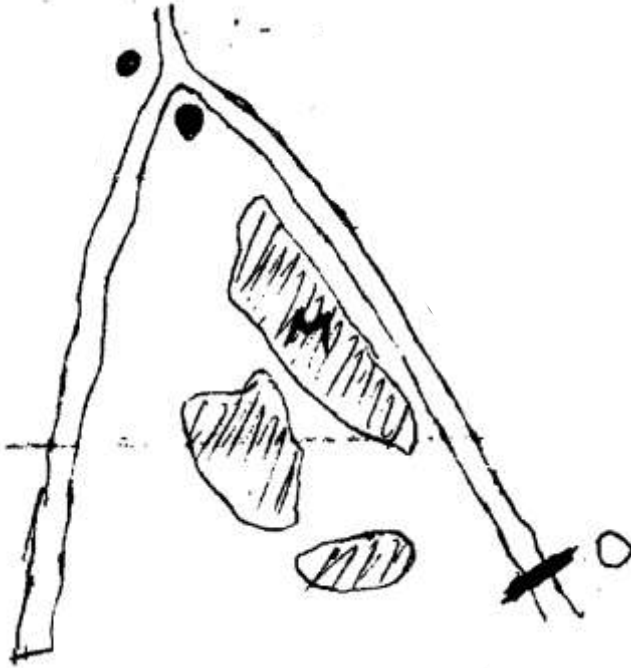
b) Give two reasons why Africans fought for independence.

i) _____

ii) _____

c) Which European country colonized DRC?

49. Study the map below about Gezira irrigation scheme and answer questions



a) Name the dam marked O. _____

b) Identify the major crop grown in M.

c) Between which two rivers is the above scheme located?

i) _____

ii) _____

50. a) Give two reasons why Mau-Mau rebellion took place.

i) _____

ii) _____

b) State two disadvantages of Mau-Mau rebellion.

i) _____

ii) _____

For questions 51 – 55, answer either Christian or Islamic questions but not both

51. **Either:** a) State any two reasons why Christians pray after waking up in the morning.

i) _____

ii) _____

b) Give any two symbols of a Christian family?

i) _____

ii) _____

Or: a) What is Salat?

b) Give any two reasons why Muslims pray.

i) _____

ii) _____

c) Which special prayers are conducted after Isha at night during Ramadan?

52. **Either:** a) Why is Apostle Thomas regarded as the apostle who had little faith?

b) Apart from Baptism, mention two other sacraments in Christianity.

i) _____

ii) _____

c) In which African country was Jesus taken when he was young?

Or: a) What happened to Prophet Mohammed on the day of Miraj.

b) Name two caliphs who replaced Mohammed.

i) _____

ii) _____

c) Why did Prophet Mohammed go to Medina?

53. **Either:** a) Identify one type of marriage in Uganda.

b) State two reasons why Christians marry.

i) _____

ii) _____

c) Mention one quality of a good partner to marry.

Or: a) Write down one type of marriage in Uganda.

b) State two reasons why Muslims marry.

i) _____

ii) _____

c) Mention one quality of a good husband / wife to marry.

54. **Either:** a) Write in full the following;

i) UJCC

ii) YMCA

b) How can Christians serve the needy in the community?

i) _____

ii) _____

Or: a) Write the following in full

i) UMSC

ii) UMEA

b) How can Muslims serve the needy in the community?

i) _____

ii) _____

55. **Both:** a) What is sin?

b) Give two reasons why there is high rate of sin today.

i) _____

ii) _____

c) How can we avoid sin?

End.