

KANYANYA JUNIOR SCHOOL
PRE MOCK EXAMINATIONS 2020
PRIMARY SEVEN

SOCIAL STUDIES WITH RELIGIOUS EDUCATION

TIME ALLOWED: 2 HOURS 15 MINUTES

INDEX NO

--	--	--	--	--	--	--	--	--

Candidate's Name: _____

Candidate's signature: _____

Branch: _____ Stream: _____

District Name: _____

Read the following instructions carefully.

1. Section **A** has **40** questions (**40 marks**)
2. Section **B** has **15** questions (**60 marks**)
3. Answer all questions. All answers to both sections, **A** and **B**, must be written in the spaces provided.
4. All answers must be written using a blue or black point-pen or fountain pen.
Only diagrams or graph work **must** be done in pencil.
5. Unnecessary alteration of work may lead to loss of marks.
6. Any handwriting that cannot be easily read may lead to loss of marks.
7. Do not fill any thing in the boxes "For Official Use Only"

FOR OFFICIAL USE ONLY.			
Section	Exams marks	Total marks	Office
A			

B			
Total			

SECTION A (40 marks)

1. Mention one group of people who need a map in their work.

2. Give one example of a beverage crop grown in E. Africa.

3. Suggest any one way people can be encouraged to conserve the natural forests in Uganda.

4. State one advantage of industrial development to E. African countries.

5. Which uprising was staged by chief **Awich of Payera** against British colonial rule?

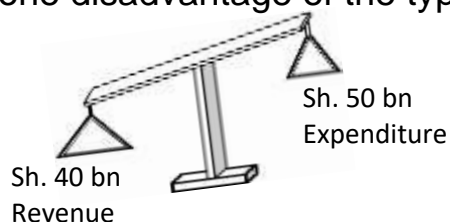
6. Explain the term '**Dairy farming**'

7. Why are some mountain tops in E. Africa covered with snow?

8. How are the chagga related to Bagisu in terms of their culture?

9. Which type of climate is suitable for citrus fruit growing in Africa?

10. Suggest one disadvantage of the type of budget below to a country.



11. Suggest any one way through which people can promote good health in our communities.

12. Name one product got from the **wattle tree**.

13. How were the monsoon winds helpful to the early Arabs to E. African Coast?

14. Suggest any one way strong wind can be controlled at school.

15. State any one advantage of irrigation farming.

16. Why are mangrove forests useful to the ship building industry?

17. Give any one reason why people find it difficult to meet their needs.

18. State any one role of the **Civil Aviation Authority** (CAA) in Uganda.

19. Point out any one common aspect about the **common wealth** countries.

20. What title was given to the political leader of government in Uganda between 1962 to 1966?

21. Explain the term '**Nomadic pastoralism**'.

22. Apart from terracing, give one other way people can control soil erosion in hilly areas of E. Africa.

23. Suggest any one way class records can be kept in a school.

24. Mention any one cause of environmental degradation in our communities.

25. How does a thin population affect development?

26. What are the Bachwezi remembered for in relation to the economy?

27. Suggest any one way a school can benefit the people living around it.

28. How can farming help in promoting industrial development in East Africa?

29. State any one advantage of having a museum in our community.

30. What was the main **inland slave trade** centre in East Africa?

31. What is the mouth of **R. Ruvuma** in Tanzania?

32. A hippopotamus is an example of **aquatic animal**. Give the meaning of **aquatic animals**.

33. Suggest any one problem an area would face if it received unreliable rainfall.

34. In which one way did the Berlin conference affect the African continent?

35. Taxation is one of the sources of government **revenue**. What does this term refer to?

RELIGIOUS EDUCATION

(For questions 36-39, answer either Christianity or Islam but not both in a number)

36. Either

Apart from singing hymns, give one other way Christians worship God.

Or

Apart from getting ablution, give one other way muslims prepare themselves for prayers.

37. Either

Give any one example of a **temptation** among Christians.

Or

Give any one example of a **temptation** among muslims.

38. Either

Explain the term '**Redeemer**' according to Christian teaching.

Or

Explain the term '**Shahadat**'.

39. Either

Jesus was sent on earth to die for man's sin. Give one cause of **sin** among the Christian community.

Or

Give one cause of **sin** among the muslim community.

40. For Both.

Point out one way pupils can show disobedience to school rules and regulations.

SECTION B (60 marks)

41. a) Explain how the following terms in relation to river flow.

i) **Confluence** _____

ii) **Tributary** _____

b) Why do most rivers have their origin from highland areas?

c) State any one problem faced by rivers in Africa.

42. a) State any two social factors that make people keep animals at home.

i) _____

ii) _____

b) Suggest any two factors that hinder people from rearing animals at home.

i) _____

ii) _____

43.a) Which group of people succeeded the Bachwezi?

b) What were the headquarters of the Bachwezi?

d) The **Tembuzi** were the founders of Bunyoro-Kitara Empire. Why were they called demi-gods?

d) State any one political contribution of the Bachwezi to E. Africa.

44.a) Mention the largest National Game Park in East Africa.

b) Which natural vegetation cover is a habitat of mountain gorillas in Uganda?

c) What is the role of game rangers in National game parks?

d) Explain the term '**National Game Park**'.

45. a) Write **A.U** in full.

b) Which continental body was replaced by the body in a) above?

c) Where is the secretariat of A.U?

d) Why was the **A.U.** formed by the African states?

46.a) Identify the dates when the sun is overhead

i) **The Equator** _____

ii) **Tropic of cancer** _____

b) State any two factors that influence Africa's climate.

i) _____

ii) _____

47.a) Point out the personalities who led their respective countries to independence;

i) **Uganda** _____

ii) **Kenya** _____

b) Why was the struggle for independence in Uganda more peaceful than in Kenya?

c) Which area in Kenya did the **white settlers** occupy?

48. Match the following personalities to their role correctly.

Permanent Secretary	-	keeps law and order in the Parliament.
Speaker	-	leader of government business in parliament.
Chief Justice	-	head of civil servants in every ministry.
Prime Minister	-	head of the judiciary organ in the country.
	-	heads the proceedings in the parliament.

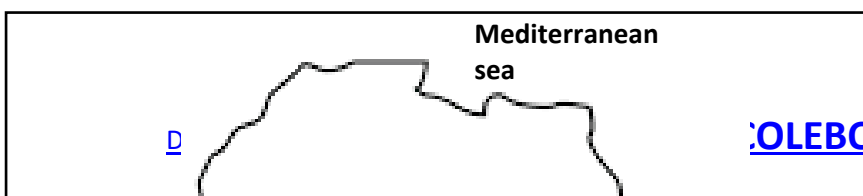
i. **Permanent Secretary** - _____

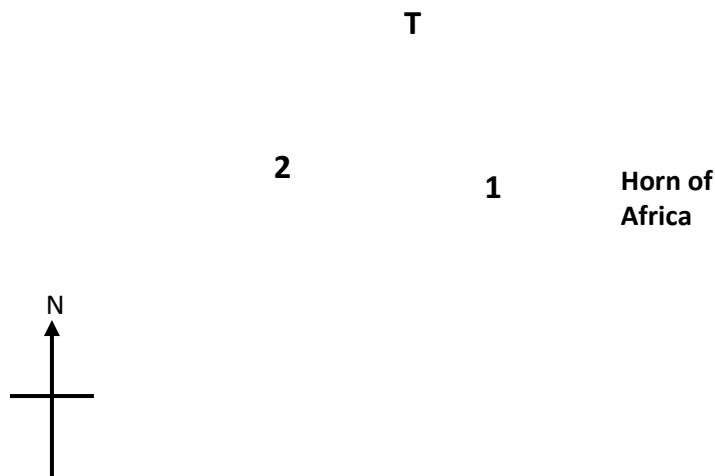
ii. **Speaker** - _____

iii. **Chief justice** - _____

iv) **Prime minister** - _____

Study the sketch map of Africa and answer the questions that follow;





49. a) Point out one climatic zone found in country marked **T**.

b) What is the mouth of River marked **2** on the map?

c) Mention any one country located in the area named Horn of Africa on the map.

d) Give a reason why river marked **1** flows towards the Mediterranean Sea.

50.a) What is **Mass Media**?

b) Point out any one example of mass media in Uganda.

c) Suggest any two ways how communication promotes economic development of a country.

i)

ii)

RELIGIOUS EDUCATION

(For questions 51-54, answer either Christianity or Islam but not both in a number)

51. Either

a) What is a **sacrament**?

b) **Apart from Holy Communion**. Mention any one sacrament performed by Christians.

c) State the importance of the following symbols to Christians during Holy Communion service.

i) **Bread** _____

ii) **Wine** _____

Or

a) What is **Hajj**?

b) State any one condition before performing **Hajj** in Islam.

c) Of what value is **Hajj** to muslim believers?

i) _____

ii) _____

52. Either

a) Give the meaning of the name '**Adam**'

b) How did God show love to Adam more than any other creature?

c) Point out one punishment God gave to each for disobedience;

i) **Adam** _____

ii) **Serpent** _____

Or

a) Give the meaning of the term '**Iman**'

b) State any one articles of Iman.

i) _____

ii) _____

- c) Give any one way Muslim believers express their love for Allah.

53. Either

- a) What is a **prayer**?

- b) Point out any one type of prayers in Christianity.

i) _____

- c) State any one value of prayer to a Christian.

- d) Give one way how Christians praise God.

Or

- a) What is **Jihad**?

- b) Point out any two examples of Jihads in Islamic history.

i) _____

ii) _____

- c) State any one cause of Jihads in Islamic history.

54. Either

- a) What is **marriage**?

- b) How is civil marriage different from Holy marriage?

- c) State any one reason why people marry.

- d) Explain the term '**Monogamous marriage**' as a custom in Christianity.

Or

- a) What is **Nikkah**?

b) Give any one custom in Islam about Nikkah.

c) State any one reason why people perform Nikkah.

d) Suggest any one condition that can lead to breakage of Nikkah.

55.For Both

a) Who is a **friend**?

b) Why is it necessary to have friends in our society?

c) Point out one quality of a good friend.

d) Suggest any one circumstance that can spoil people's relationship as friends.

END