

FRIDAY 7TH AUGUST, 2020
PRIMARY SEVEN SCIENCE HOME WORK

NAME: _____

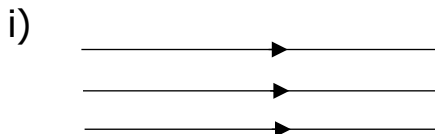
1. a) Name the form of energy which enables us to see.

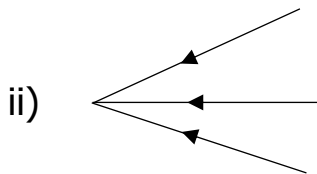
2. Identify two principles of light.

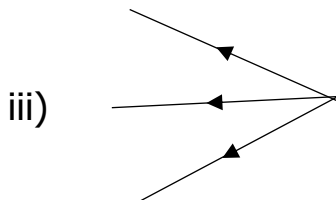
i) _____

ii) _____

3. Name the following types of beams shown below.







4. a) What do you understand by the term reflection?

b) State the two laws of reflection.

i) _____

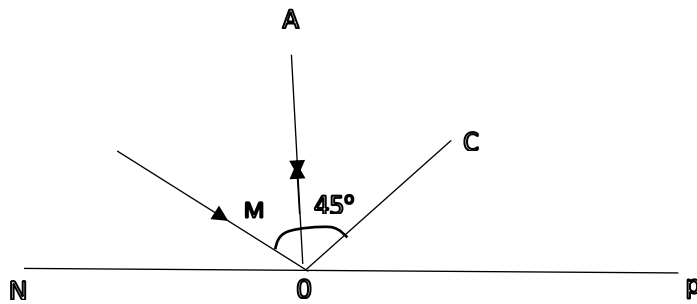
ii) _____

c) Write down two types of reflection.

i) _____

ii) _____

5. Use the diagram below to answer the questions.



a) Name the rays

i) AO _____ ii) OC _____

b) i) Name the angle M.

ii) Calculate the size of angle M