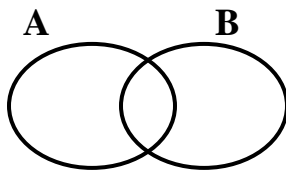


FRIDAY, FEBRUARY 19TH, 2021
PRIMARY FIVE MATHEMATICS WEEKEND HOME WORK
NAME: _____

1. Add $27 + 13$

2. Write in short: $x + 2x + 3x$

3. Shade $A - B$

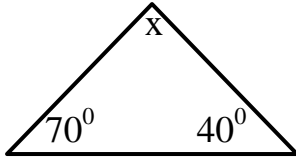


4. Express 4m as cm³

5. What number has been prime factorized to give $\{2_1, 2_2, 3_1, 5_1\}$

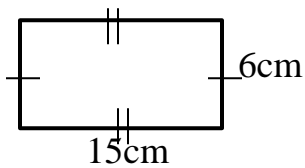
6. How many items are in 3 dozens?

7. Find the size of angle x



8. Write 54 in Roman numerals.

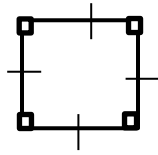
9. Find the perimeter of the figure below.



10. Write the next number in the sequence.
1, 3, 6, 10, 15, _____

11. Find the LCM of 8 and 12

12 How many lines of folding symmetry has the figure below?



13. List all factors of 12

14. A coin is rolled once. What is the probability of head showing up?

15. Add: HRS MINS
3 40
+ 2 30

