

PRIMARY FOUR
SOCIAL STUDIES AND RELIGIOUS EDUCATION

Time allowed: 2 hours 15 minutes

Name: _____

School: _____

Read the following instructions carefully:

1. The paper has **two** sections: **A** and **B**
2. Section **A** has 40 questions (40 marks)
3. Section **B** has 15 questions (60 marks)
4. Answer **ALL** questions. All answers to both Sections A and B must be written in the spaces provided.
5. All answers must be written using a blue or black ball point pen or ink. Diagrams should be drawn in pencil.
6. Unnecessary crossing of work may lead to loss of marks.
7. Any handwriting that cannot be easily read may lead to loss of marks.
8. Do **not** fill anything in the boxes indicated;
For Examiner's use only.

FOR EXAMINER'S USE ONLY

Qn. No		MARK
1 - 10		
11 - 20		
21 - 30		
31 - 40		
41 - 43		
44 - 46		
47 - 49		
50 - 52		
53 - 55		
TOTAL		

Turn over

SECTION A

1. Give the local name for Mt. Elgon.

2. Why do people grow sugarcanes?

3. Name the local language spoken mostly in central Uganda.

4. What title is given to the head of Police in Uganda?

5. Which school symbol helps pupils to be identified?

6. State the importance of a blacksmith in a community.

7. Name the largest lake in Uganda.

8. Give one animal from which we get fur.

9. Why do people save money?

10. What are cash crops?

11. Mention any one cardinal point of a compass.

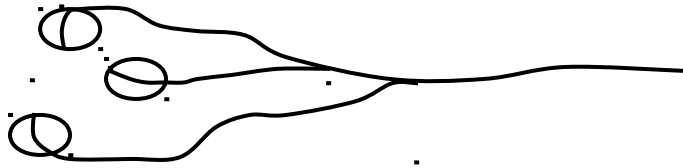
12. Name the major line of longitude which is 0° .

13. _____ ap symbol for dam.

14. Who is the current minister of Education and Sports in Uganda today?

15. Give one activity farmers do in the dry season.

The diagram below shows a tool of early man. Study it and answer question 16.



16. Name the tool shown above.

17. Give one duty of the Bank of Uganda.

18. Mention any one form of child abuse.

19. Give one reason why few people use aeroplanes to travel in Uganda.

20. State the importance of planting trees in our school compound.

21. What title is given to the cultural head of Buganda kingdom?

22. Why do people keep money in banks?

23. Where did Walumbe hide after killing Kintu's children?

24. Name the district which is located in Lake Victoria.

25. Give any one social service provided in your district.

26. Name the weather instrument used to measure the amount of rainfall.

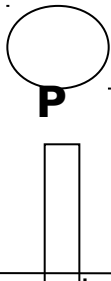
27. What is a custom?

28. Give the word which means the place where things of long ago are kept.

29. What is done at a Post Office?

30. Mention one basic need of man.

The diagram below shows a road sign. Use it to answer question 31.



31. What does the road sign above mean?

32. Mention any one activity which was taught to girls long ago.

33. Write K.C.C.A in full.

34. Give any one cause of accidents on roads.

35. Which physical feature is found between two hills?

36. Give any one reason why a child should not move from school to home alone.

For each of the questions 37 to 40, answer EITHER the Christian OR Islamic question but not both. No marks will be awarded to anyone who answers both alternatives.

37. **Either:** Who built the ark?

Or : Who built the Kaaba?

38. **Either:** Where was Adam put to live?

Or : Where did Allah put Adam and Hawa to live?

39. **Either:** Why do Christians kneel down when praying?

Or : Why do Muslims remove their shoes when entering a mosque?

40. **Either:** When does a Christian become a member of God's family?

Or: What does a non-muslim do to become a Muslim?

SECTION B

41 Match the words in list A to the correct sentences in list B

	List A	List B
(i)	Key	- measures the actual distance between two places on a map.
(ii)	Scale	- shows direction
(iii)	Title	- explains symbols used on a map.
(iv)	Compass	- tells what a map is all about.

(i) Key _____

(ii) Scale _____

(iii) Title _____

(iv) Compass _____

42 (a) What is wind?

(b) Give two uses of wind.

(i) _____

(ii) _____

(c) How is wind dangerous to people?

43. (a) Give any two examples of crafts.

(i) _____

(ii) _____

(b) Mention any two materials that are used to make crafts.

(i) _____

(ii) _____

44. (a) What is a family?

(b) Give any one duty of a family head.

(c) Mention any two types of families.

(i) _____

(ii) _____

45. Write down the social services we get from the following places:

(i) hospital _____

(ii) school _____

(iii) taxi park _____

(iv) police station _____

46. (a) How many colours does the Uganda flag have?

(b) Write down any two colours of the Uganda flag.

(i) _____

(ii) _____

(c) Which colour on the Uganda flag represents sunshine?

47. (a) _____

What is a food taboo?

(b) Write down any two examples of food taboos.

(i) _____

(ii) _____

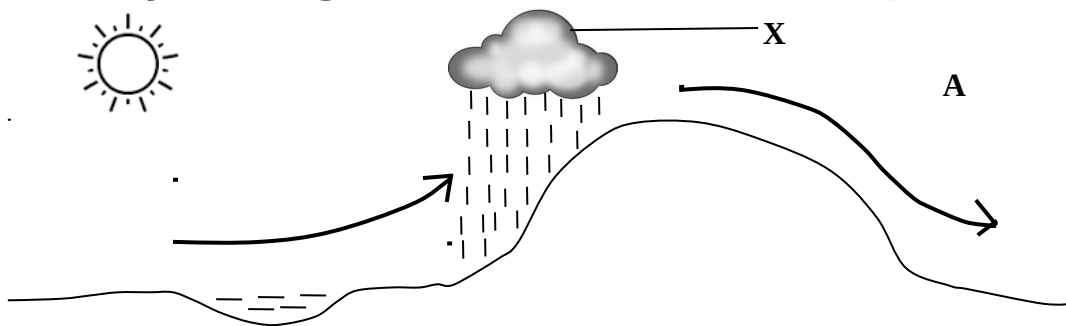
(c) Write any one animal which Muslims don't eat.

48. **Complete the table below correctly.**

	List (A) CROP	List (B) PRODUCT
--	---------------	------------------

(a)	Soft wood	papers
(b)	_____	clothes
(c)	Tobacco	_____
(d)	_____	posho
(e)	Sisal	_____

49 **Study the diagram below and answer the questions that follow.**



(a) Name side **A** of the highland above.

(b) What type of rainfall is shown in the diagram above?

(c) Which type of cloud is marked with letter **X**?

(d) Which letter has been used to show the leeward side of the mountain?

50. (a) What general name was given to the three sons of Kintu?

(b) Name the three sons of Kintu.

(i) _____

(ii) _____

(iii) _____

For questions 51 to 55, answer EITHER the Christian OR Islamic question but not both on one number.

51. **EITHER:**

(a) Name any three symbols of God's family.

(i) _____

(ii) _____

(iii) _____

(b) What is the day of worship for Christians?

Or:

(a) What is a mosque?

(b) Give any two examples of people who serve us in a mosque.

(i) _____

(ii) _____

(c) How can you serve your fellow Muslims in a mosque?

52. **Either:**

(a) Write any two miracles which Jesus performed.

(i) _____

(ii) _____

(b) Where did Jesus perform his first miracle?

(c) Where is Jesus living today?

Or:

(a) Give the Islamic word for hell.

(b) Write any three actions which can lead a Muslim into hell.

(i) _____

(ii) _____

(iii) _____

53. **Either:** (a) Who received the Ten Commandments from God?

(b) On which mountain did God handover the Ten Commandments?

(c) Write down any two commandments of God.

(i) _____

(ii) _____

Or: (a) Who are angels?

(b) Mention three angels of Allah.

(i) _____

(ii) _____

(iv) _____

54. **Either:** (a) How many apostles did Jesus have?

(c) Name the apostle who;

(i) Denied Jesus three times.

(ii) Betrayed Jesus.

(iii) Doubted that Jesus had risen.

Or: (a) What is Wudhu?

(b) Why does a Muslim perform wudhu?

(c) Name any two body parts that are cleaned before prayers.

(i) _____

(ii) _____

55. **Either:** Draw and name any four non-living things that God created.

--	--	--	--

Or: Draw and name any four non-living things that Allah created.

Good Luck

