

FRIDAY, FEBRUARY 19TH, 2021
PRIMARY TWO MATHEMATICS WEEKEND HOME WORK

NAME: _____

1. a) Write in full.

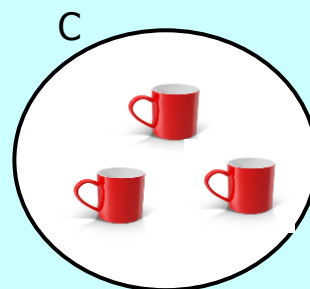
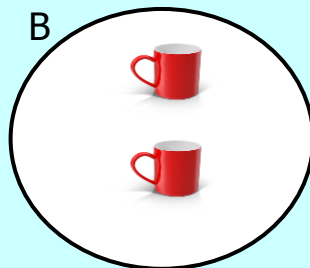

Sun. _____

Fri. _____

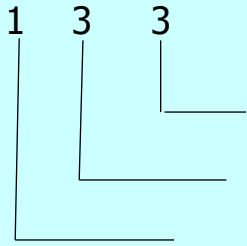
b) _____ is the first day of the week.

2. Find the value of 2 in the number 321.

3. Arrange the sets in ascending order



4. Write the place value of the given numbers.



5. Add correctly.

$$\begin{array}{r} \text{a) T} \quad \text{O} \\ 3 \quad 8 \\ + 1 \quad 9 \\ \hline \end{array}$$

$$\begin{array}{r} \text{b) T} \quad \text{O} \\ 2 \quad 4 \\ + 3 \quad 8 \\ \hline \end{array}$$
