

UGANDA NATIONAL EXAMINATION BOARD  
 PRIMARY LEAVING EXAMINATION  
 2015  
 SOCIAL STUDIES WITH RELIGIOUS EDUCATION  
 Time allowed: 2hours 15 minutes

**Index No:**

--	--	--	--	--	--	--	--	--

**Candidate's Name**.....

**Candidate's signature**.....

**School name**.....

**District Name**.....

**Read the following instructions carefully**

1. This paper has two sections **A** and **B**.  
 Section A has 50 question B has 5 questions. The paper has 15 pages altogether
2. Answer all question, **all** answer to both section A and B must be written in the space provided.
3. All answer must be written using a blue or black ball point pen or ink. Any work written in pencil other than graphs, picture and diagrams will not be marked.
4. Unnecessary change of work may lead to loss of marks
5. Any hand writing that cannot easily be read may lead to loss of marks
6. Do not fill anything in the boxes indicated:  
 "For examiners". And those inside the question paper

<b>FOR EXAMINERS USE ONLY</b>		
<b>Qn. No</b>	<b>MARKS</b>	<b>EXR'S NO.</b>
<b>1-10</b>		
<b>11-20</b>		
<b>21-30</b>		
<b>31-40</b>		
<b>41-43</b>		
<b>44-46</b>		
<b>47-49</b>		
<b>50-52</b>		
<b>53-55</b>		
<b>TOTAL</b>		
<b>L</b>		

SECTION A 40 MARKS  
question 1 to 40 carry one mark each

1. Name any one domestic animals kept for milk  
.....  
.....

2. Which landform covers most areas of Uganda  
.....  
.....

3. Give any one modern way of preserving fish  
.....  
.....

4. Apart from Rwanda, name on the other landlocked country that borders Uganda  
.....  
.....

5. What is the direction of Uganda from Burundi  
.....  
.....

6. Mention any one activity that the Bachwezi are remember for  
.....  
.....

7. Give any one-way m which children can help to keep security at home  
.....  
.....

8. Which element of weather is measured using o barometer?  
.....  
.....

9. Mention any one port m East Africa that handles Uganda's imports and exports  
.....  
.....

10. Name any one tribe in Uganda that belongs to the plain Nitotes  
.....  
.....

11. How does the heading of a map help a man reader?  
.....  
.....

12. How are trees in a school compound useful to pupils?  
.....  
.....

13. What was the major item of trade from Africa to America during the triangular trade (Trans-Atlantic trade  
.....

.....

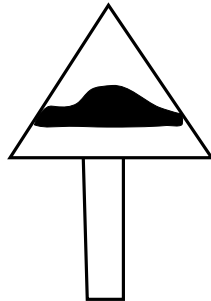
14. Give any one main crop grown in Doha irrigation Scheme

.....  
.....

15. State any one way in which democracy is practiced in school

.....  
.....

16. What does the road sign shown below mean?



17. Mention any one way in which African showed that they were not happy with the European rule.

.....  
.....

18. State any one advantage of getting a leader through inheritance.

.....  
.....

19. Name the type of soil that is used in the pottery industry.

.....  
.....

20. Name any one of the tools used in schools to change from one daily activity to another.

.....  
.....

21. What was the bolas used for during the Stone Age period?

.....  
.....

22. Give any one reason why a re-cycling factory can be useful in on area.

.....  
.....

23. Why is it important for a farmer to have the knowledge of seasons of the year?

.....  
.....

24. Mention one group of leaders who serve without payment.

.....  
.....

25. Give one social reason for the construction of the Kenya-Uganda Railway in 1896.

.....  
.....

26. Name any one group of people who help to keep rules and regulations in a community.

.....  
.....

27. How is the work of a Veterinary Officer (Different from that of an Agricultural Officer)?

.....  
.....

28. Why tourism is called an industry?

.....  
.....

29. Mention any one way in which government spends its income.

.....  
.....

30. Name the rapids along river Niger where Mungo Park drowned

.....  
.....

31. Name any one Relief Agency that cares for the people who have been affected by landslides in Uganda.

.....  
.....

32. State any one way in which an Oasis is important to the people who live in the Sahara Desert.

.....  
.....

33. Give any one factor that attracted the Bantu cultivators to settle within the lake regions of East Africa

.....  
.....

34. Mention any one island country found in West Africa

.....  
.....  
35.State any one way in which the Judiciary promotes peace in a country.

.....  
.....  
For each of the questions 36 to 40, answer EITHER the Christian OR the Islamic questions but not both. No marks will be awarded to a candidate who attempts both alternatives in a particular number.

36. EITHER:  
Name the son of Adam who killed his brother .....

OR:  
Name the son of Adam who killed his brother .....

37. EITHER:  
How did Abraham show his faith to God?  
.....

OR:  
How did prophet Ibrahim show his faith to Allah?  
.....

38.EITHER:  
What was the work of Matthew before he became on Apostle?  
.....

OR:  
What was the work of Khadijah the wife of prophet Muhammed (HSUM)?  
.....

39.EITHER:  
In which one way can a Christian reconcile with others?  
.....

Or:  
In which one way can a Muslim reconcile with others?  
.....

40. EITHER;  
Why is the Bible called a Holy Book?  
.....

OR;  
Why is the Quran called a Holy Book?  
.....

SECTION B:60 MARKS

Question 41 to 55 carry four marks each

41, (c). Name the two European explorers who made two journeys to East Africa.

(i) .....

(ii) .....

(a) Mention any two ways in which the work of the early explorers contributed to the development of Africa.

(I) .....

(II) .....

42. (a) What title is given to the highest civil servant in a ministry?

.....

(a) State the way in which one can become a LC V chairperson in any district of Uganda.

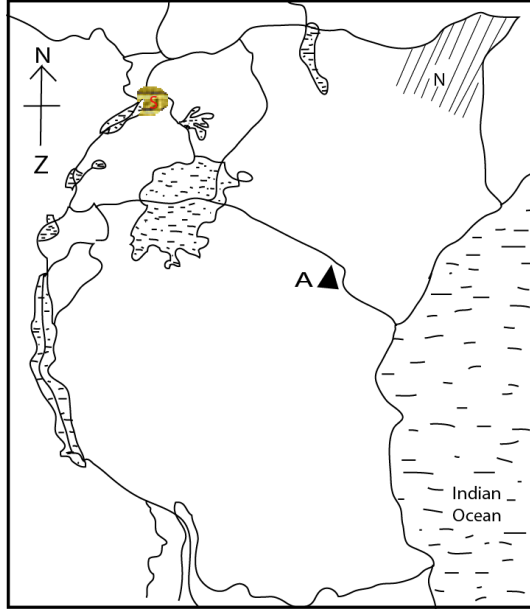
.....  
.....

(b) Give any **two** ways in which leaders can improve on the welfare of the people in their communities.

(i) .....

ii) .....

43 Study the sketch map of East Africa below and answer the questions that follow.



(a). Name the mountain peak marked with letter A.

.....

(b). Why is the shaded area marked with letter N not suitable for plantation farming?

.....

(c) Give any one advantage country marked with letter Z has over Rwanda when carrying out international trade.

.....

(c) Give any one reason why settlement is not allowed in the area marked S.

.....

44.(a) Name two element of wind that are measured at a weather station

(i) .....

.....

(ii) .....

.....

(b). Why are the North East and South East Monsoon winds called trade winds?

.....

.....

(c) Give any one reason why the North-East trade winds that blow toward the interior of Africa do not bring rainfall.

.....

.....

45. (a) Name the organization that was replaced by the African Union.

.....

(b) Mention one country in Africa which is not a member of the African Union.

.....

(c) Give any two member states of the African Union.

.....

46. (a) What mineral is mined from Witwatersrand in South Africa?

.....

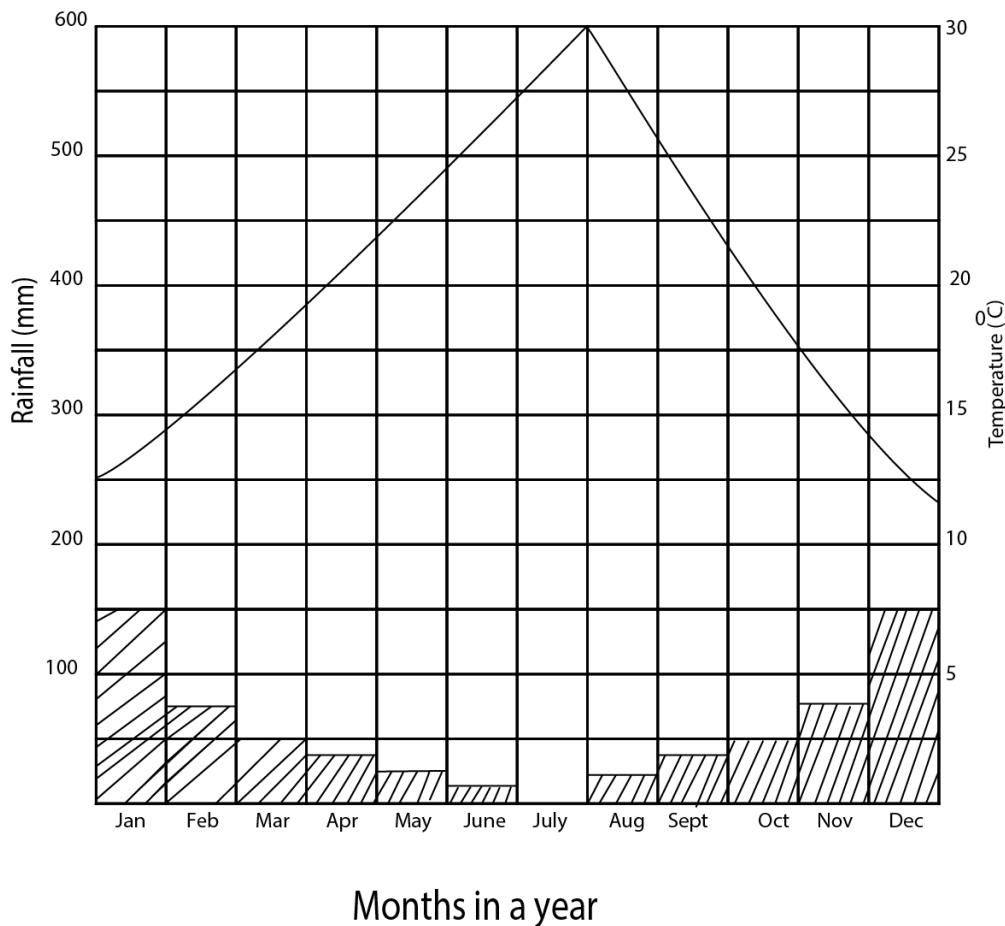
(b) Mention any two factors that have promoted the development of mining in South Africa.

.....

(c) State any one danger of the mining industry to the environment.

.....

**47. Study the graph below and answer the questions that follow.**





(a) During which months of the year doe this place experience no rainfall at all?

.....  
(b) Name the months in which the highest amount of rainfall received.

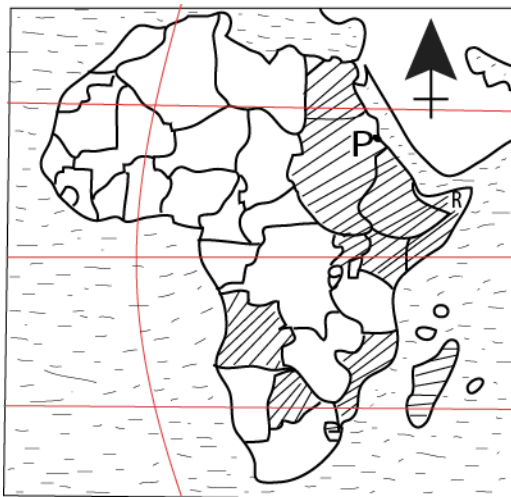
.....  
.....

(c) What type of climate is shown on the graph?

.....  
(d) Mention any one economic activity suitable in this area.

.....

48. Study sketch map Africa below and answer question



(a) Name the port marked with letter P on the map above

.....  
.....

(b) In which one way does port P benefit its country?

.....  
.....

(c) Name the regional economic grouping to which the shaded countries belong.

.....  
.....

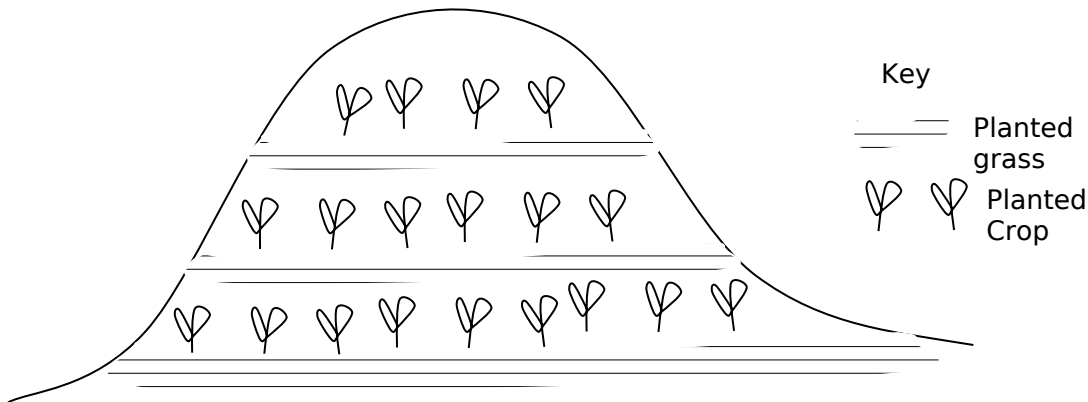
(d) Mention any one problem faced by country marked R on the map

.....  
 .....

49. Complete table below correctly

Country	Political leader	Political party
Tanganyika	Mwalimu Julius Nyerere	.....
Uganda	.....	Uganda National congress (UPC)
.....	Nelson Madela	African Nation congress (ANC)
Kenya	.....	Kenya Africa National union (KANU)

50. The diagram below shows a method of farming practiced in some parts of Uganda. Use it to answer the questions that follow.



(a) Name the method of farming shown in the diagram above.

.....

(b) State the importance of the planted grass in the farming shown in the diagram above.

.....

(c) State any two problems faced by farmers in the above-named physical features.

(i).....

(ii).....

For each of the questions 51 to 55, answer EITHER the Christian OR the Islamic questions but not both. No marks will be awarded to candidates who attempt both alternatives in a particular number.

51. EITHER;

(a) Name any one church founded organization that promotes youth activities in Uganda.

.....  
(b) State any two challenges faced by the organization you have mentioned in (a) above.

(i) .....

(ii) .....

(c) Mention any one example you can copy from the activities of the organization named in (a) above.

.....  
OR;

(a) Name any one Islamic founded organization that promotes youth activities in Uganda.

.....  
.....

(b) State any two challenges faced by the organization you have mentioned in (a) above.

(i) .....

(ii).....

(b) Mention any one example you can copy from the activities the organization named n (c) above.

.....

52. EITHER; “We are going to Jerusalem, where the son of man will be handed over to the Chief Priest and teachers of the law. They will condemn him to death.”(Mart. 20 18-19)

(a) Who said these words?

.....

(b) Name the group of believers to whom the above whom the above words were said.

.....

(c) Mention any two thing which happened shortly after the death of the person in (a) above.

.....  
.....

(C) Mention any two things which happened shortly after the death of the person named in (a) above

(i) .....

(ii) .....

OR; **“There is no God except Allah. Death really causes pain. Oh God! Cover me with your forgiveness and mercy” (Reported by: Abu Hurairat)**

(a) Who said these words?

.....  
.....

(b) Who was the most beloved wife of the person you named In (a) above?

.....  
.....

(c) Mention two things you learn from the person you have named in (a) above.

- (i) .....
- .....
- (ii) .....
- .....

53. EITHER

(a) Mention any two types prayer in Christianity

- (i) .....
- (ii) .....

(b) Apart from praying, state any one other way Christians communicate to God.

.....  
.....

(d) State any one way prayer is important in Christianity.

.....  
.....  
.....

(e) **OR;**

(a) Mention any two types of prayer in Islam.

- (i) .....
- (ii) .....

(b) Apart from praying, state any other way Muslims communicate to Allah.

.....  
.....

(c) State any one way prayer is important in Islam

.....  
.....

54. **EITHER;**

(a) Which sacrament joins a man and a woman as husband and wife in Church?

.....

(b) What do the following represent during the Holy Communion?

(i) Bread.....

(ii) Wine.....

( c ) Why do Christians get the sacrament Holy communion

.....  
.....

**OR:**

(a) Which pillar of Islam the rich and the poor together?

.....  
.....

(b) Give the two types of the pillar you named in (a) above

(i) .....

.....

(ii) .....

.....

(c) What is the important of the pillar you mentioned (a) above?

.....  
.....  
.....

55. **EITHER;** Use a pen and match correctly the days of the Christian calendar in list A to their events in list B

	<b>LIST A</b>	<b>LIST B</b>
(a)	Palm	Resurrection of Jesus
(b)	Good Friday	Birth of Jesus Christ
(c)	Easter Sunday	End of tent
(d)	Christian day	Death of Jesus Christ

OR; Match the information in list A to that in list B

	<b>LIST A</b>	<b>LIST B</b>
(a)	1 <sup>st</sup> Muharram	Celebration of Iddi-El-Fitir

(b) 12 <sup>th</sup> Rabbil-awwal	Celebration of Idi Adhuha
(c) 1 <sup>st</sup> Swawwaal	Birth of prophet Muhammed
(d) 10 <sup>th</sup> Dhul-hajjah	Beginning of a new year

END