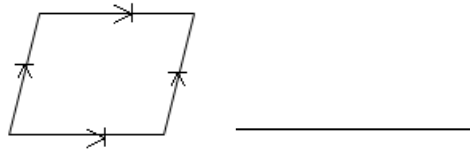


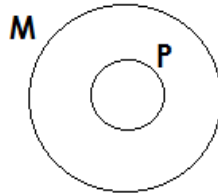
P.4 MATHS HOME WORK 6TH NOV

1. What name is given to the geometrical figure drawn below?




2. Express XCVIII as a Hindu- Arabic numeral.

3. Describe the relationship between the sets below.



4. Write 2,202 in expanded form using values.

5. Given that  represents 5 cups. Draw picture cups to represent 20 cups.

6. In a school, there are 400 pupils. 139 are girls and the rest are boys.

(a) How many boys are there in the school?

(b) By how many boys than girls are there in the school?

7. Solve: $2y = 16$.

8. Find the difference of values of 3 and 2 in 8,302

9. Write **ten thousand, three hundred two** in figures.

*****END*****