

YUDESI NURSERY AND PRIMARY SCHOOL

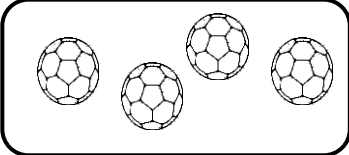
P.1 NUMERACY HOLIDAY PACKAGE TERM 1, 2020


Name: _____ Stream: _____

SETS

1. A _____ is a group of objects / things.

2. Name these sets.

a)  A set of _____

b)  A set of _____

c) { } _____

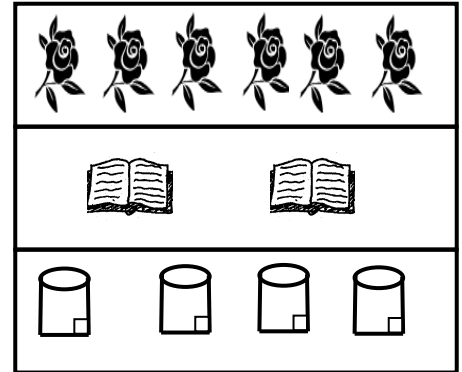
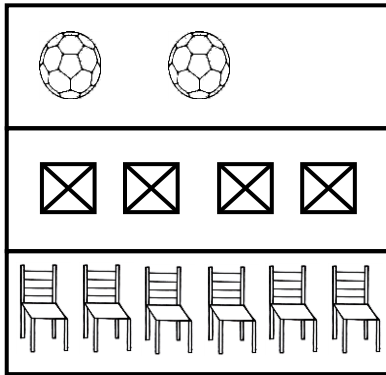
3. Draw these sets.

a) A set of 3 flowers.

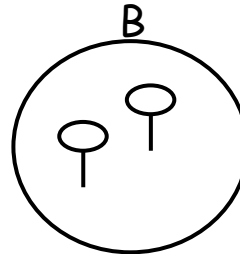
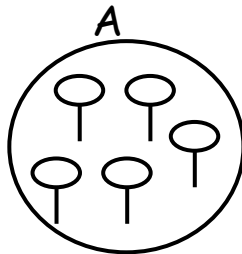
b) A set of pencils.

c) An empty set.

4. Match correctly.



5. Use less or more to compare the sets.

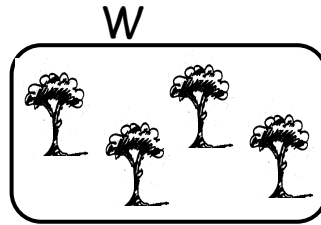
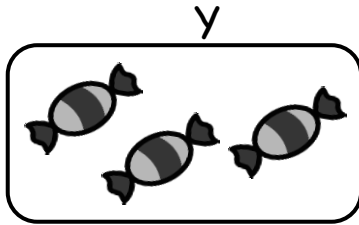


a) Set A has _____ members.

b) Set B has _____ members.

c) Set _____ has less members than set _____.

6. Answer correctly.



a) Which set has more members?


b) Which set has less members?

c) How many elements are in set Y?


d) How many elements are in set Y and Z?

e) Which set has four members?


7. Form / make new sets.



A set of _____



A set of _____

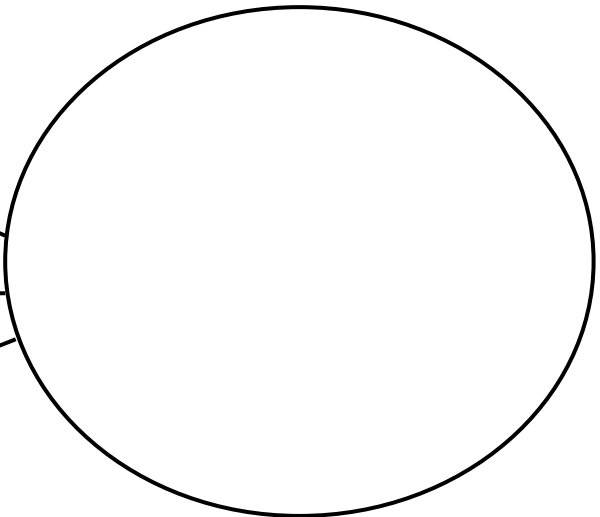
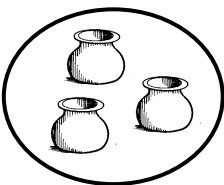
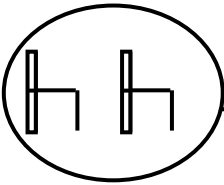
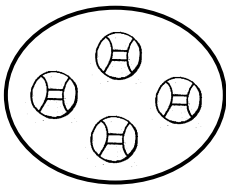


A set of _____



A set of _____

8. Form a big set from small sets.



WHOLE NUMBERS:

9. Arrange numbers from the smallest to the biggest.

a) 7, 1, 2 = _____

b) 12, 18, 15 = _____

c) 5, 9, 3, 1 = _____

d) 50, 10, 20, 40, 30 = _____

10. Write in words.

a) 11 _____

b) 12 _____

c) 18 _____

d) 20 _____

e) 32 _____

f) 33 _____

g) 40 _____

h) 47 _____

11. Write the number symbol.

a) twenty-two _____

b) twenty _____

c) thirty-nine _____

d) forty-three _____

e) fifty _____

f) fifteen _____

12. Write the number after.

a) 24, _____

b) 41, _____

c) 36, _____

d) 45, _____

e) 12, _____

f) 49, _____

g) 29, _____

13. Which number comes before?

a) _____, 22

b) _____, 8

c) _____, 15

d) _____, 20

e) _____, 38

f) _____, 17

14. Circle the greater number.

a) 14 and 41

b) 32 and 23

c) 08 and 03

d) 10 and 50

15. Underline the smallest number.




a) 1, 2, 3





b) 10, 11, 9, 4

c) 50, 10, 20, 30

d) 22, 12, 42

16. Count and write tens and ones.

a)    = _____
____ tens ____ ones = _____

b)     = _____
____ tens ____ ones.

c) 
____ tens ____ ones = _____

e) Sarah has 8 books. Jane has 4 books.
How many books do they have altogether?

f) How many legs do 2 boys have?

g) Nine subtract three equals _____

h) 10 minus 2 equals _____

i) three takeaway zero equals _____