



SUCCESS INTEGRATED PRIMARY SCHOOL

Pre-PLE Mock Examination (Set 8), 2020

Social Studies and Religious Education

Time allowed: 2 hours and 15 minutes

INDEX NUMBER

--	--	--	--	--	--	--	--	--

NAME: _____

Signature: _____

District _____

EMIS Number _____

EXAMINER'S USE ONLY

A	
B	
TOTAL	

Read the following instructions carefully:

1. The paper is made up of section A and B.
2. Section A has 40 short answer questions (40 marks).
3. Section B has 15 questions (60 answers).
4. Answer ALL questions. All answers to both section A and B must be written in the spaces provided.
5. All answers must be written in blue ink.
6. Any handwriting that cannot easily be read will lead to loss of marks.
7. Unnecessary alteration of work may lead to loss of marks.
8. Show all the necessary side work in pencil.

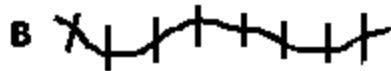
<u>PARENT'S COMMENT</u>	<u>SIGNATURE</u>

Section A (40 marks).

1. What helps a person to find the actual distance between two places on the map?

2. Name one food crop that grows well in swampy areas.

3. Give the differences between the two given symbols below.



4. Who is the chief accounting officer for funds from the Central government to the district?

5. Give one factor that makes human settlement difficult in Miombo woodlands

6. A part from the colonial rulers, which other group of foreigners helped to develop social services in Uganda?

7. Why is a clock important in a class room?

8. State one political contribution of the Bachwezi in the history of Uganda.

9. Why is it important to have family rules and regulations?

10. Which ministry in Uganda is responsible for maintaining roads?

11. Mention the mineral mined in the Albertine region in Uganda.

12. State any one cause of the Luo migration to Uganda.

13. What is the work of the Sergeant at arms in the Parliament?

14. Give one reason why the people living in the Sahara desert wear turbans on their heads.

15. Why are there many mountains gorillas in Bwindi National Game Park?

16. Mention the rebellion that was staged by Chief Awich of Payera against colonial rule in Acholi.

17. How did the 1900 Buganda agreement reduce Kabaka's power?

18. Why is Africa referred to as "the cradle land of man"?

19. It is 2:00 p.m. at Accra Ghana (GMT). What time will it be in Uganda using the East Africa standard time?

20. State one contribution of Julius Nyerere to the development of Tanzania.

21. Name the country in the Horn of Africa which was not colonized?

22. Why are the sides of the Stevenson screen made of louvers?

23. Give any one reason why the LEGCO was formed by the British in Uganda.

24. Name the highest peak on Mt. Rwenzori.

25. What is decentralization?

26. How can people be encouraged to live and work in rural areas?

27. Name the government organ responsible for enforcing law, and order in the country.

28. Which tax is imposed on exports of Uganda?

29. What are by- laws?

30. At which stage of a river development is hydro-electricity generated?

31. How does fencing the school help to reduce quarrels in the community?

32. Apart from elections, state one other way of getting leaders.

33. How is the harvesting of coffee similar to that of cotton?

34. Give a reason why Lake Kyoga is shallow.

35. State one reason why government of Uganda needs to carry out population census.

For questions 36 – 40 answer either Christian or Islam but not both.

36. **Either:** Which was the last miracle performed by Jesus?

Or: Which miracle did prophet Muhammad perform at Jerusalem?

37. **Either:** Who is considered to be the greatest prophet in the Bible?

Or: Who was the first prophet in Islam?

38. **Either:** Why do Christians perform petition prayer?

Or: Why do Muslims pray five times a day?

39. **Either:** How is Mt. Sinai important in Christianity?

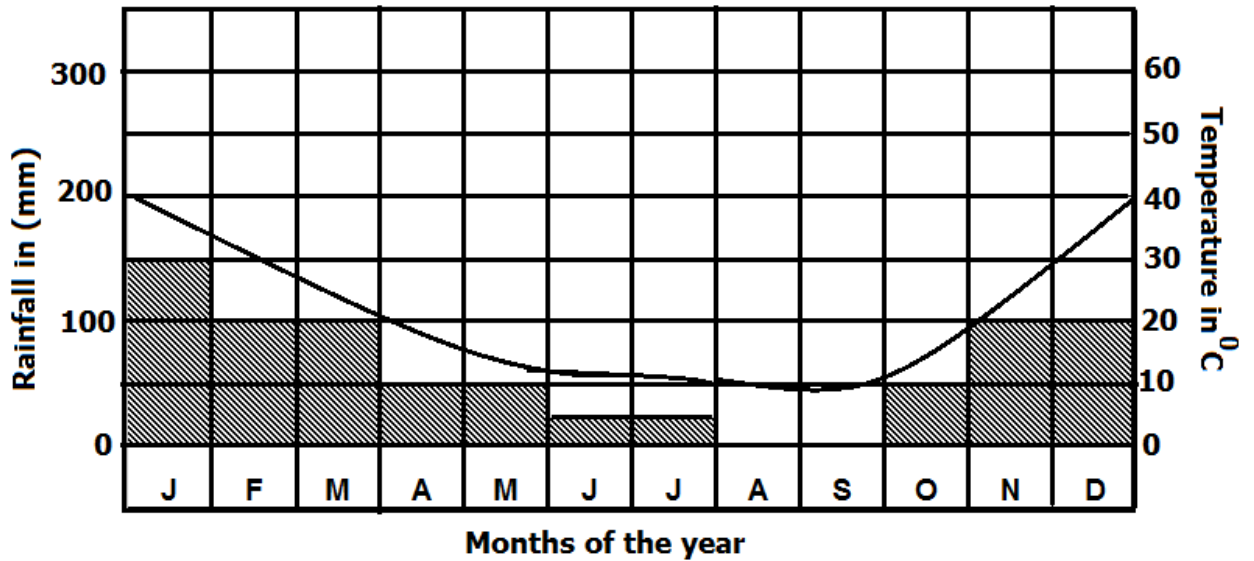
Or: How is Mt. Hira important in the Islamic faith?

40. **Either:** State any one way Christians show respect to God during prayers.

Or: State any one way Muslims show respect to Allah during prayers

SECTION B

41. Study the graph drawn below and answer the questions that follow.



- (a) What type of climate is shown on the above graph?

- (b) Calculate the total amount of rainfall received in the months of January and December.

(c) What is the relationship between temperature and rainfall?

(d) What temperature was recorded in the month of November?

42(a) What is mining?

(b) Name the mineral mined at Mwadui near Shinyanga in Tanzania.

(c) Mention one importance of the mining industry to East Africa.

(d) How is Hima similar to Osukuru Hills in terms of economic development?

43. **Match the names in List A to the phrases in list B.**

List

List B

Omukama Kabalega

was restored by Capt. Lugard to his throne

King Rumanika

invited Christian missionaries to Buganda

Kabaka Muteesa I

Gave accommodation to Richard Burton in his kingdom.

Omukama Kasagama

was exiled to Seychelles Islands.

(i) Omukama Kabalega _____

(ii) King Rumanika _____

(iii) Kabaka Muteesa I _____

(iv) Omukama Kasagama _____

44(a) Mention any one cause of the Great Trek.

(b) Name any one state founded by the Boers after the Great Trek.

(c) Give two ways Apartheid policy was practiced in South Africa.

(i) _____

(ii) _____

45(a) Write any two roles of the government to its citizens.

(i) _____

(ii) _____
(b) In which two ways can the citizens of Uganda help the government to perform its role?

(i) _____

(ii) _____

46(a) What is Dairy farming?

(b) State two factors necessary for starting a Dairy farm.

(i) _____

(ii) _____

(c) Mention anyone problem faced by Dairy farmers in Uganda.

47(a) Write any two PIASCY messages displayed in your school compound.

(i) _____

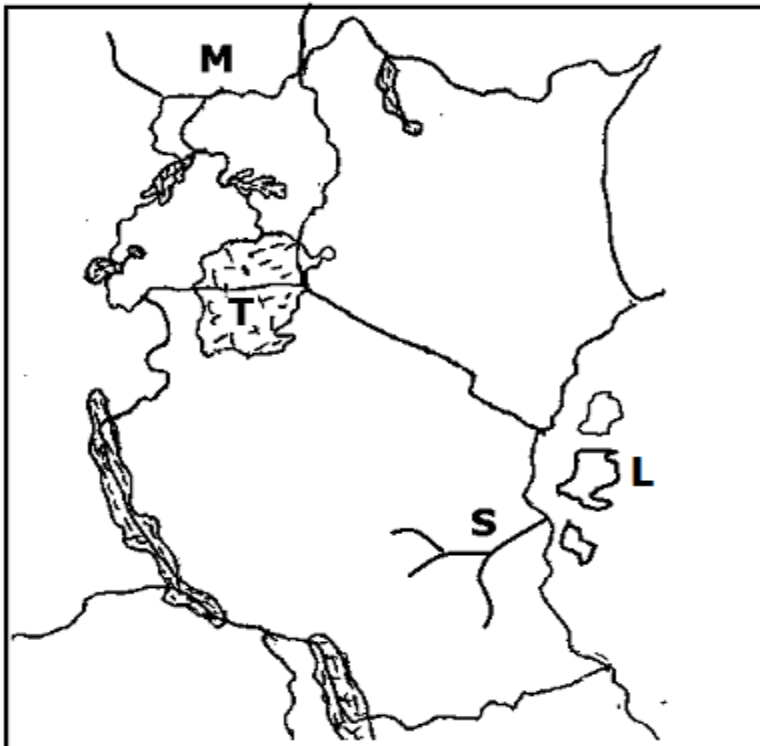
(ii) _____

(b) Give two reasons why PIASCY was introduced to schools in Uganda.

(i) _____

(ii) _____

Use the map of East Africa below to answer question 48.



48(a) Name the Island marked L on the map.

(b) How is country marked M important to the economic development of Uganda?

(c) Which rebellion in Tanganyika was started around river marked S?

(d) Of what formation is the lake marked T?

49(a) Name the largest natural forest in Uganda.

(b) Give two types of trees found in natural forests of Uganda.

(i)

(ii)

(c) State one characteristics of a natural forest.

50(a) What title is given to the head of a Central Bank?

(b) Give one way commercial banks are useful to farmers.

(c) State two reasons why people save their money:

(i)

(ii)

For questions 51 – 55 answer either Christianity or Islam but NOT both.

51. **Either:** (a) Write any two ways in which Jesus showed that He was a good leader.

- (i) _____
- (ii) _____

(b) Give any two reasons why Christians should copy Jesus' style of leadership.

- (i) _____
- (ii) _____

Or: (a) Write any two ways in which Prophet Isa's leadership was blessed by Allah.

- (i) _____
- (ii) _____

(b) Give any two reasons why Muslims should copy prophet Isa's style of leadership.

- (i) _____
- (ii) _____

52. **Either:** (a) State one way Jesus was tempted in the wilderness.

(b) Mention any two ways in which fasting is important to a Christian.

- (i) _____
- (ii) _____

(c) Mention one way of avoiding temptations.

Or: (a) What name is given to the early morning meal for a Muslim during the month of Rhamadan?

(b) Name the night prayer said by Muslims during fasting.

(c) Mention two ways in which fasting is important to a Muslim.

(i) _____

(ii) _____

53. **Either:** (a) Name the holy book for Christians.

(b) Give any two qualities of the holy book mentioned in (a) above.

(i) _____

(ii) _____

(c) How is the holy book mentioned in (a) above important to Christians?

Or: (a). Name the holy book for Muslims.

(b) Give two qualities of the holy book mentioned in (a) above.

(i) _____

(ii) _____

(c) How is the holy book mentioned in (a) above important to Muslims?

54. **Either: " Don't come any closer. Take off your sandals, for you are standing on a holy ground" (Exodus 3:5)**

(a) Who said the above words?

(b) To whom were the above words said?

(c) How did the person mentioned in (a) appear to the person mentioned in (b)?

(d) What role did the person mentioned in (a) give the person mentioned in (b)?

Or: "Read in the name of your Lord who created man and taught him by the pen." (Qur'an Surah Al- alaq 96: 1-5)

(a) Who said the above words?

(b) To whom were the above words said?

(c) Where did the above event take place?

(d) What material did Allah use to create man?

55. **For both:** (a) Name the religious organization that unites all religious denominations in Uganda.

(b) State any two ways religious organizations have improved people's way of life.

(i) _____

(ii) _____

(c) Mention any one problem faced by religious organizations in Uganda.
