



Plot 48 Muwaire Rd (behind IHK Hospital)
P.O.BOX 5337, KAMPALA - UGANDA
Tel: 256783111908
Email: info@stagnes.co.ug
Website: www.stagnes.co.ug


P.2 MATHEMATICS HOME WORK 4TH/DECEMBER 2020

NAME: _____

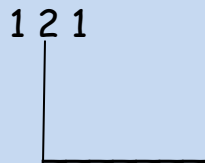
1. Add

	H	T	O	
	2	4	1	
+	1	4	0	.
<hr/>				
<hr/>				

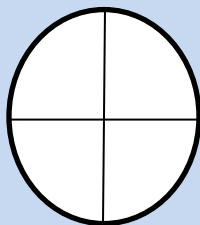
2. Name this shape.



3. Write the place value of 2 in the number



4. Shade the fraction



=

5. Subtract T O

6 5

- 3 5 .
