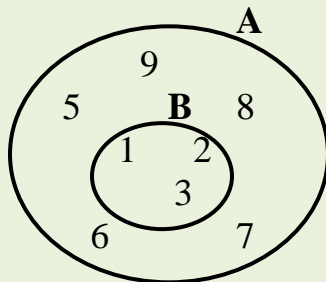


FRIDAY, FEBRUARY 12TH, 2021

PRIMARY FIVE MATHEMATICS WEEKEND HOME WORK
NAME: _____

1. Study the Venn diagram below and use it to answer the questions that follow.



(a) Find the number of subsets in $A \cap B$

(b) List all elements of set A.

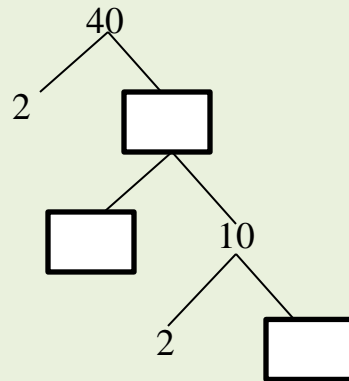
(c) Find the $n(A-B)$.

2. (a) Round off 967 to the nearest hundreds.

(b) Find the sum of the value of 9 and the place value of 6.

(c) Expand the above number using values.

3. (a) Complete the factor tree



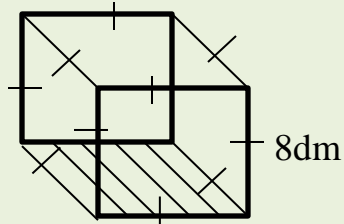
(b) Find the GCF of 15 and 25.

4. (a) A mother gave out $\frac{3}{4}$ of her cooking oil to a friend. If she had 80 litres, how many litres did she give out?

(b) How many litres did she remain with?

(c) Convert $\frac{29}{7}$ to a mixed number.

5. The figure below is a cube. Use it to answer the questions that follow.



- (a) Calculate the area of the shaded part.

- (b) Work out its volume.

6. Subtract.

(a) $12_{\text{five}} - 3_{\text{five}}$

(b) Add: $14_{\text{five}} + 43_{\text{five}}$

END