

KING FAHAD ISLAMIC PRI. SCH.



2021 COVID-19 REVISION WORK - 06

CLASS : P.5
SUBJECT : ENGLISH LANGAUGE

Name: _____ Stream _____

Use the word given in brackets to complete each Sentence.

1. The news _____ didn't proof read all the articles he was given.
(edit)
2. Which is the _____ month of the year? (five)
3. Whitten has _____ the baby's milk (drink)
4. Most shopkeepers were not happy because the KCC officials closed _____ businesses. (they)
5. The lorry which lost control had been _____ loaded. (heavy)

Give one word for the underlined group of words.

6. She was found playing with young dogs last night.

7. Stop doing your work without care.

8. The man who collects fare in that bus is very kind.

Rewrite the sentences as instructed in brackets.

9. The tyre burst. We were going to Masaka.

(Join the two sentences using:when.....)

10. That is the athlete. He won all the races.

(Rewrite the two sentences usingwho.....)

11. Bashir has drawn a cartoon. (Begin: A cartoon.....)

12. That car is very expensive. (Begin: What.....)

13. He should not dump waste materials near water sources.
(Use:must not)
-
-
14. Kasim bought a spanner. He wanted to loosen the nuts.
(Use;in order to)
-
-
15. Mariam is a polite girl. Every teacher likes her.
(Join the two sentences usingsuchthat.....)
-
-
16. The mechanic is sick. The cartoonist is sick.
(Join the two sentences and begin: Both.....)
-
-
17. We are doing homework. We started at lunch time.
(Use:since.....)
-
-
18. Opio likes mangoes more than oranges.
(Use:prefers.....to)
-
-
19. This is my bicycle. (Rewrite and end.....mine.)
-
-
20. He is a humble boy. (Begin: They.....)
-
-
21. Tamuzadde is reading a newspaper,?
(Rewrite and supply a suitable question tag)
-
-
22. It is bad to tell lies. (Begin: Telling.....)
-
-
23. There is some food for the referee. (Use:any.....)
-
-
24. Mukula is very fat. He can run fast. (Begin: Although)
-
-

25. Nakaye is very good at locating places. She will find where the plane has gone.
(Useso.....that.....)

26. Joweria is tall. Jolly is tall. (useasas.....)

27. When the mechanic finished repairing my vehicle, I drove off immediately.
(Begin: As soon as)

28. Children use our fibre balls every time we make some.
(Rewrite the sentence usingwhenever.....)

29. Read the passage below and in full sentences, answer the questions that follow.

We have very many sources of news. In print media, we have newspapers and magazines among others.

A newspaper is very important in several ways. It gives us a lot of information about different things everywhere in the world.

When one reads a newspaper, one develops the skill in reading and interpreting information. The information in the newspaper is not limited like that in the magazine.

A newspaper puts advertisements and announcements at a cheaper price. So reading newspapers should be a must for both pupils and adults for growth and enlightenment.

Whoever ignores reading newspapers may have a number of dangers in future.

Questions

1. How many sources of news are there according to the passage?

2. Where do we have newspapers and magazines?

3. In how many ways is a newspaper important?

4. How can one develop one's skill in reading and interpretation?

5. What has limited information?

6. Write the opposite of cheaper. _____

7. Give another word or a group of words to mean the same as: danger.

8. What is the passage about?

9. Write the plural form of; news: _____

10. Suggest a suitable title to the passage.

30. **Below is Mzee Wako's weekly programme. Study it and answer questions about it in full sentences.**

Day	Activities
Mondays	jogging along Mbarara Road
Tuesdays	paying workers
Wednesdays	weeding the groundnuts
Thursdays	treating his animals
Fridays	Juma prayer
Saturdays	reading novels
Sundays	meeting elders at Ella Hotel

Questions

(a) Why do you think Mzee Wako jogs?

(b) Which crop does Mzee Wako grow in his garden?

(c) Where does Mzee Wako jog from?

(d) Which type of books does Mzee Wako read?

(e) What does Mzee Wako do on Friday?

(f) Why does Mzee Wako go to Katooke on Sundays?

(g) When are the workers paid?

(h) Name the place where he meets the elders.

(i) For how many days is Mzee Wako's programme?

(j) How many activities does he do according to the programme?

KING FATHO

KING FAHAD ISLAMIC PRI. SCH.



2021 COVID-19 REVISION WORK - 07

CLASS : P.5

SUBJECT : ENGLISH LANGAUGE

Name: _____ Stream _____

Use the correct of the words given in brackets to complete the sentences:

1. Have you ever _____ a lame horse?(see)
2. The teacher spoke so _____ that the pupils at the back could not hear her. (soft)
3. There were three _____ in the toolbox. (spanner)
4. Most _____ in Uganda are very reckless. (drive)
5. While the headmaster _____ addressing pupils on assembly, power went off. (to be)

Write the following abbreviations in full.

6. Tr. _____ 7. Rd. _____

Rewrite the sentences giving the opposite of the underlined words.

8. The guest of honour has just arrived.
- _____

9. Why do you always give correct answers?
- _____

10. A hippo is a very fat animal.
- _____

Rearrange these words to make meaningful sentences.

11. lost my is calf.
- _____

12. a what shame !

Rearrange these words in alphabetical order.

13. driver, seat, belt, hoot, repair.

14. make, mess, mole, mild

Give the plural form of the following words.

15. mouse _____

16. monkey _____

Give one word for the underlined group of words.

17. Kato's worker has cleaned a house where dogs live.

18. Babirye is a woman who sews clothes.

Complete the following sentences correctly.

19. a stitch in time _____

20. One by one _____

Arrange the words in alphabetical.

21. Seven, save, saved, nine

22. Meet, meal, monk, news

Write the following in full form.

23. Shan't _____

24. Mr. _____

Rewrite each sentence giving a single word for the underlined group of words.

25. They were found playing with young ones of a cat last evening.

26. The man who repairs vehicles needs more spare parts.

27. Atiku walked in a quick way to enter the church.

28. **Read the conversation below and answer the questions in full sentences.**

Njagi: What are you doing, Akiyo?

Akiyo : I am listening to some music. How do you like my new radio? My uncle gave it to me as a present.

Njagi You are very lucky. But why are you turning the knob so hard?

Akiyo: I want to see how far it can turn.

Njagi: That knob can't turn any further, you will break it and damage your radio.

Akiyo: Don't spoil my fun!

Njagi: What is it? What has happened?

Akiyo : The knob has come off. Oh! My radio.

Njagi: Sorry about that, I hope it can be repaired. But, you should be more careful
future.

Questions

(a) How many people are taking part in the conversation?

(b) What was Akiyo doing with the radio?

(c) Who spoilt the radio?

(d) How was the radio spoiled?

(e) Why was Akiyo turning the radio hard?

(f) Who gave the radio to Akiyo?

(g) What did Njagi tell Akiyo to do in future?

(h) Give any one use of a radio?

(i) Write the following contractions in full.

(a) Can't _____ (b) don't _____

29. **Rearrange the following sentences to make a good and meaningful story.**

- (a) The police officer asked him the number plate of his car but he couldn't remember it.
- (b) Magara walked back to the parking yard.
- (c) One day, Magara went to work as usual.
- (d) He reached the office late.
- (e) He went to the police station to report that his car had been stolen.
- (f) On his way, he had a tyre puncture.
- (g) He found his car had been stolen.
- (h) He called his mechanic and replaced the tyre.
- (i) His boss sent him back because he had come late.

(j) He then went to his office.

30. **Complete the letter below by filling in the correct words from the list.**

Gladys	forget	Dear	diary	Miss
date	P.O. Box 21823	see	invite	party

King Fahad Islamic, Primary School,

P.O. , _____,

Kampala.

3rd July, 2021.

_____Shanita.

I am writing this letter to _____ you to my birthday _____ which will take place on Saturday 4th July, 2021 at Serena Gardens beginning at 3.00p.m.

I wouldn't like you to _____ the fun. Please, write the _____ in your _____ so that you don't _____ to come.

Remember to come with your sister, Husna.

Hoping to _____ you then,

I remain yours loving,

_____.

KING FAHAD

KING FAHAD ISLAMIC PRI. SCH.



2021 COVID-19 REVISION WORK - 06

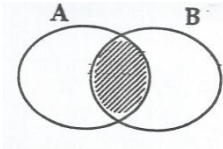
CLASS : P.5

SUBJECT : MATHEMATICS

Name: _____ Stream _____

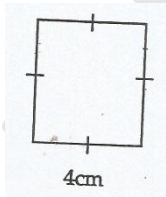
1. Add: $43 + 17 =$

2. Describe the shaded region below.



3. Give the place value of 4 in 54362.

4. Work out the area of the figure below.



5. Simplify: $+4 + +3$

6. Subtract: $\frac{3}{4} - \frac{1}{2}$

7. Jalia, Jaliida and Jamila shared 24 apples equally. How many apples did each get?

8. If  represents 10 trees, how many trees are represented by 

9. The cost of a kilogram of sugar is sh. 3,000/=. Find the cost of a half dozen kilograms of sugar.

10. Given that set $X = \{a, b, c\}$ and $Y = \{b, c, d\}$, find the number of subsets in $X \cap Y$

11. Find the next number in the sequence.

1, 4, 7, 10, _____

12. Use a protractor and draw an angle of 170° .

13. Workout the value of 3 in 532.

14. Divide: 256 by 2.

15. Solve: $2x + 3 = 13$.

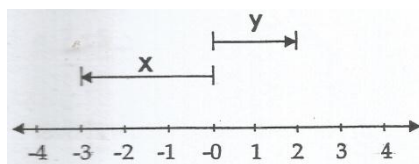
16. (a) Given that $x = 2$ and $y = 3$, find

i) xy

ii) $x + y$

iii) x^2y

b) Give the values of the integers shown on the number line below.



i) x

ii) Y

17. Jamal bought the following items from a supermarket.

2 counter books at sh. 3,000/= each

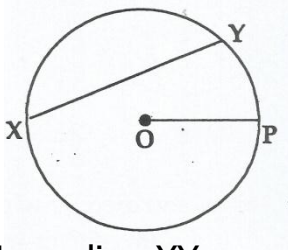
2 fountain pens at sh. 2,000/= each

3 pencils at sh. 500 each

a) How much did he spend?

b) If he went with a twenty thousand shilling note, calculate his change.

18. Given the circle below,



a) Name line XY.

b) If line OP is 4cm, find the diameter of the circle.

c) The diameter of a circle is 14cm. Find the radius of the circle.

19. In Kato's farm, there are 56 cows, 72 goats and 41 sheep.

a) How many more goats than cows are on the farm?

b) If nine sheep died, how many sheep did Kato remain with?

20. (a) Find the factors of;

i) 6

ii) 8

b) What is the GCF of 6 and 8?

KING FAHAD

KING FAHAD ISLAMIC PRI. SCH.



2021 COVID-19 REVISION WORK - 07

CLASS : P.5

SUBJECT : MATHEMATICS

Name: _____

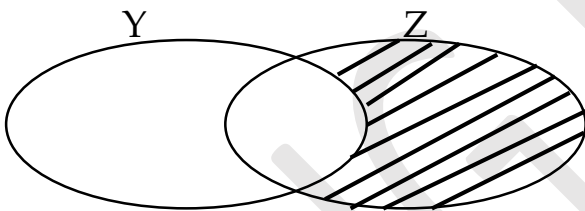
Stream _____

1. Work out:

$$\begin{array}{r} 7 \quad 5 \\ -1 \quad 2 \\ \hline \hline \end{array}$$

2. Write 6 4 7 2 in words.

3. Describe the unshaded part in the Venn diagram below.



4. Find the sum of the next two numbers in the sequence below;

13, 16, 19, 22, _____, _____

5. Express $12\frac{7}{9}$ as an improper fraction.

6. Using a ruler, a sharp pencil and a pair of compasses only, construct an angle of 90° in the space below.

7. Joweria bought 19 apples for her birthday party. Draw tallies showing the number of apples she bought.

8. Work out;

Hours	Minutes
6	20
- 2	57
<hr/>	
<hr/>	

9. A trader bought a tray of eggs at sh. 8500. At what price should he sell it in order to get a profit of sh. 1500?

10. Simplify; $8m + 6p + 12m + 3p$

11. Given that set D is equal to set E, and $E = \{0, 2, 4\}$ find $n(D)$.

12. Mariam and Kasim shared some money. If Paul got $\frac{7}{9}$ of the total share, what fraction of the whole share did Mary get?

13. A sack of maize flour weighs 45kg 500gms and that of rice weighs 50kg 700gms. What is the total mass of both sacks?

14. Round off 9 9 7 8 to the nearest hundreds.

15. Complete the magic square below by finding the values of the unknowns.

7	a	5
b	4	C
3	d	1

(6 marks)

16. In a class of 60 pupils, $\frac{3}{4}$ of them are girls and the rest are boys.
a) How many boys are in that class?

(1 mark)

<p>b) If each pupil was given 3 pencils, how many more pencils were given to girls than boys?</p>			
<p>17a) With the help of a ruler, a sharp pencil and a pair of compasses only, construct a square DSTV of side 6.5cm.</p> <p>b) Measure its diagonal \overline{DT}</p>	<p>(2 marks)</p>		
<p>18. Work out;</p> $\begin{array}{r} 3 \ 8 \ 7 \\ + 6 \ 5 \ 9 \\ \hline \\ \hline \end{array}$	<p>(b) $\begin{array}{r} 3 \ 4 \ 6 \\ \times \quad 8 \\ \hline \\ \hline \end{array}$</p>	<p>(c) $\begin{array}{r} 6 \ 1 \ 4 \ 7 \\ - 3 \ 9 \ 8 \\ \hline \\ \hline \end{array}$</p>	<p>(3 marks)</p>
<p>19a) How many days make up 14 weeks?</p>			<p>(2 marks)</p>

b) A taxi driver took 3 hours 46 minutes to drive from Kampala to Mbarara and 2 hours 5 minutes from Mbarara to Kasese. How much time did he take altogether? **(3 marks)**

20. The tally table below shows the number of mangoes on each of the traders' stalls. Use it to answer the questions that follow.

NAME	TALLIES
Nakato	### ### //
Opio	### ### ###
Shamim	### ///
Mukasa	### ### ### ### ###
Ali	### ###

a) Which trader has the least number of mangoes? **(1 mark)**

b) How many more mangoes does Mukasa have than Nakato? **(2 marks)**

c) Find the total number of mangoes on all the stalls.

(2 marks)

KING FAHAD

KING FAHAD ISLAMIC PRI. SCH.



2021 COVID-19 REVISION WORK - 06

CLASS : P.5

SUBJECT : INTERGRATED SCIENCE

Name: _____ **Stream** _____


1. Name the digestive juice produced in the mouth.

2. Where does fertilization take place in a flower?

3. Name the part of a leaf that does the same function as the spiracles in an insect.

4. Why should cereal crops be dried properly before storing?

The diagram below shows the life cycle of an insect.



5. Name the stage marked Y in the life cycle above.

6. Name one insect with such a life cycle above.

7. Give one organ that is protected by the ribs.

8. State one disease that is immunized against at birth.

9. Identify one energy of bees.

10. Name the vector that spreads cholera.

11. What type of seeds undergo hypogeal germination?

12. Give one crop pest that can be controlled by putting scare crows in the garden.

13. State one advantage of deep litter system.

14. Name one class of food.

15. Apart from brushing teeth, mention one other activity that promotes personal hygiene.

16. Name one example of plants with root nodules.

17. Give one way how plants benefit from animals.

18. Apart from camels, name **one** other animal used for transport.

19. State any **one** effect of accidents to people.

20. How can you help a person who is dehydrated?

21. Why should people wash fruits before eating them?

22. Give any **one** way people can benefit from plants.

23. (a) What are poultry vices?

(b) Give two examples of poultry vices.

(i) _____ (ii) _____

(c) Why are greens hanged in a poultry house?

24. Complete the table below.

Vectors	Diseases spread
Housefly	_____
_____	Rabies
Culex mosquito	_____
_____	Bilharzia

25. (a) What is photosynthesis?

(b) Give any one condition necessary for photosynthesis to take place.

(c) State any one raw-material needed during the above process.

26. Below is part of the digestive system. Use it to answer the following questions.



- (a) Name the parts labeled by:
 A _____
 B _____
- (b) Name the digestive juice produced by part C

- (c) Name the class of food that has its chemical digestion in part B.

4

27. Match the given diseases with their causes correctly.

Disease

- Kwashiorkor
- Marasmus
- BeriBeri
- Rickets

Cause

- shortage of vitamin D
- shortage of vitamin B1
- shortage of carbohydrates
- shortage of proteins

- Kwashiorkor : _____
- Marasmus : _____
- BeriBeri : _____
- Rickets : _____

28. (a) What is immunity?

- (b) Mention any one type of immunity.

- (c) State any one way of acquiring immunity.

- (d) Identify the immunisable disease which make children to become lame.

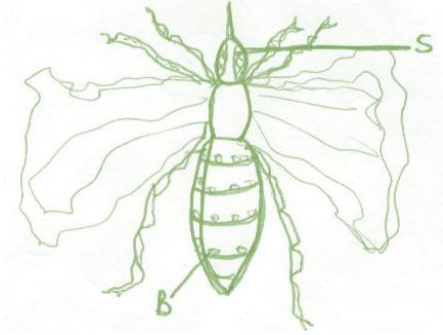
29. (a) What is dehydration?

- (b) Give any one cause of dehydration.

- (c) State any one mineral salt lost during diarrhea.

(d) _____
Give one way of treating dehydration.

30. Study the diagram of a bee below and answer the following questions.



(a) Name parts

B _____

S _____

(b) State the use of part marked B

(c) How does a bee protect itself from its enemies?

KING FAHAD

KING FAHAD ISLAMIC PRI. SCH.



2021 COVID-19 REVISION WORK - 07

CLASS : P.5

SUBJECT : INTERGRATED SCIENCE

Name: _____ Stream _____

1. Name the type of soil with the highest humus content.

2. Write **one** disease vector common in our homes.

3. Mention the habitat for fish.

4. Why should we wash hands before eating food?

5. Identify the instrument used to measure the amount of rainfall.

6. Give the function of the ear to people.

7. **The diagram below shows an instrument used in hospitals.**



Name the instrument above.

8. How are bees useful to crop farmers?

9. What is most likely to happen if we do not keep our bodies clean?

10. Identify any **one** type of teeth in man.

11. In the space below, draw a diagram showing air exerts pressure.

12. How do people get food?

13. Name any **one** type of chicken kept at home.

14. What is the use of food in our body?

15. State the importance of including food staffs rich in proteins in a child's diet.

16. What is the use of a flower to a plant?

17. Apart from the childhood killer diseases, identify **one** other immunisable disease.

18. Name **one** material that can be used to make farm yard manure.

19. Where does digestion start in man?

20. Mention any **one** disease spread by a housefly .

21. Identify **one** object that can float on water.

22. Why do farmers rear poultry?

23. How is a female anopheles mosquito dangerous to people?

KING FAHAD

KING FAHAD ISLAMIC PRI. SCH.



2021 COVID-19 REVISION WORK - 06

CLASS : P.5

SUBJECT : SOCIAL STUDIES & RELIGIUS EDUCATION

Name: _____ **Stream** _____

1. State a reason why Uganda is called a land locked country.

2. Give one example of mass media.

3. Suggest one way volcanic mountains are dangerous to people who stay near them.

4. Explain the term altitude.

5. Suggest one disadvantage of a large family.

6. Around which lake is crude oil has been discovered in Uganda?

7. Mention one weather instrument kept in a Stevenson Screen.

8. Write NEMA in full.

9. Give any one activity done by farmers during dry season.

10. How is overgrazing dangerous to the environment?

11. Mention one tribe under Nilotics.

12. Give one product obtained from pyrethrum.

13. Why is an aeroplane the best means for transporting flowers from Uganda to America?

14. Give one danger of strong wind to people.

15. Who is the current Minister of Education and Sports in Uganda?

16. Give a reason why Kisoro is cooler than Masaka.

17. Mention one way of controlling soil erosion in mountainous areas.

18. **Or:** name one son of Prophet Ibrahim?

19. **OR:** Who is known as the grandfather of all believers?

20. **Or:** What lesson do we learn from the childhood story of Prophet Muhammad

21. **OR:** As a good Moslem, how can you help a sick person at your home?

22. **Or:** name any optional day of fasting?

23. **OR:** Define Hegira?

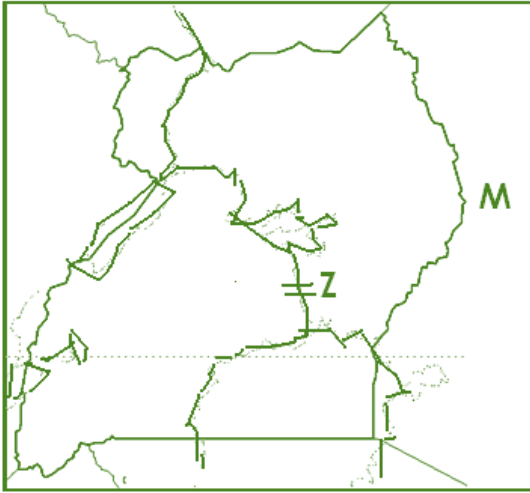
24. (a) What is climate?

- (b) Name the two most important factors of climate.
(i) _____
(ii) _____
- (c) Give one factor which affects the climate of an area.

25. (a) What is transport?

- (b) Name two types of transport.
(i) _____ (ii) _____
- (c) Identify one cause of accidents on the roads.

26. **Study the map below carefully and use it to answer the questions which follow.**



- (a) Which neighbouring countries to Uganda are labeled;
 (i) Q _____
 (ii) M _____
- (b) Name the physical feature labeled Z.

- (c) Using letter R, show where mountain Rwenzori is located on the map above.

27. (a) Identify an one ethnic group in Uganda.

- (b) Why did people migrate long ago, give two reasons?
 (i) _____
 (ii) _____
- (c) Which is the largest ethnic group in Uganda?

28. Match the weather instruments with their correct functions.

Instruments

- Hydrometer
- Barometer
- Wind sock
- Wind vane
- Thermometer

functions

- measures the strength of wind
- measures air pressure
- measures the amount of water vapour
- measures temperature
- shows the direction of wind

- Hydrometer : _____
- Barometer : _____
- Wind sock : _____
- Wind vane : _____
- Thermometer : _____

29. **OR:** (a) Mention the duty of each of the following

(i) Muathin

(ii) Imam

(b) Give two symbols of Islam

(i) _____ (ii) _____

30. **OR:**

State any four qualities of a good friend.

(i) _____

(ii) _____

(iii) _____

(iv) _____

KING FAHAD

KING FAHAD ISLAMIC PRI. SCH.



2021 COVID-19 REVISION WORK - 07

CLASS : P.5

SUBJECT : SOCIAL STUDIES & RELIGIOUS EDUCATION

Name: _____ Stream _____

1. Name one country in East Africa which is landlocked.

2. How is the police important in our country?

3. Which was the first animal to be tamed by man?

4. How can the government solve the problem of water in dry areas of Uganda?

5. Why did the Bantu settle around the Lake regions of East Africa?

6. How can a child be useful in a home?

7. Why are most game parks located in savanna vegetation?

8. How does altitude affect the climate of an area?

9. What type of rainfall is received around Mabira forest?

10. What are natural resources?

11. State the political importance of mountains in Uganda.

12. How can school children be identified easily from other children?

13. What is decentralization?

14. Which line of longitude is used to determine the dates and days?

15. Why does the rain shadow of a mountain receive little rainfall?

16. How can a school promote good relationship with her neighbours?

17. How can one become a prefect in a school?

18. Name one national game park in Uganda which is well known for mountain gorillas.

19. **Or:** - How is fasting important to Muslims?

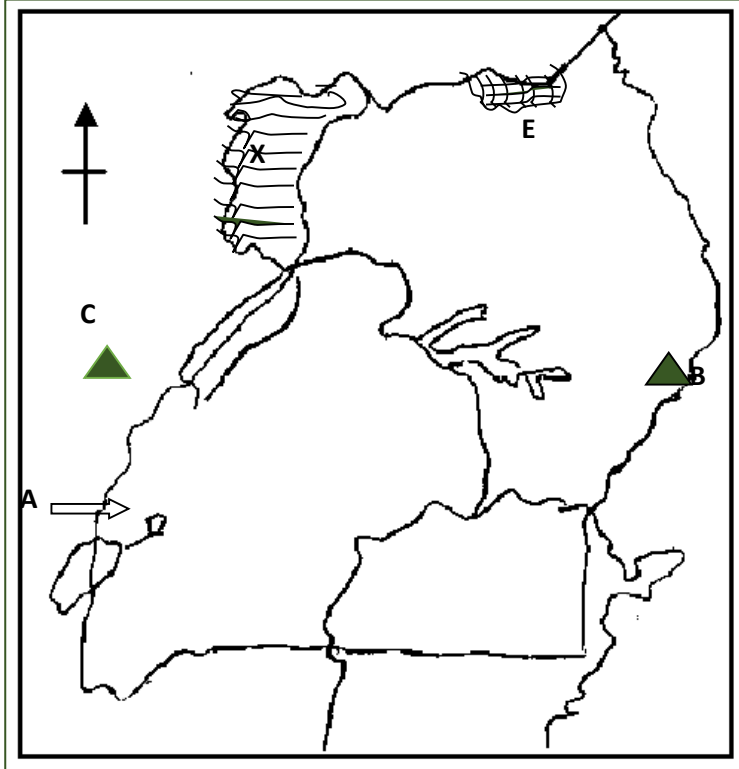
20. **Or:-** How can a Muslims show obedience to Allah?

21. **Or:-** How can a Muslim strengthen his or her faith in Allah?

22. **Or:-** Give one importance of Adhan in Islamic society.

23. **Or:** Give one similarity between Muslims and Christians.

24. Study the map of Uganda and answer the following questions.



(a) Why are crocodiles not found at the game park marked **E**?

(b) Name the ethnic group that entered Uganda from the direction marked **A**.

(c) How is Mt. marked **B** similar to Mt. **C**?

(d) Which cash crop grows well in area marked **X**?

25. (a) Give two ways in which kingdoms are useful to our country.

(i) _____

(ii) _____

(b) State one characteristic of kingdoms in Uganda.

(c) Which people formed Buganda kingdom?

26. (a) How are forests useful to people.

(i) _____

(ii) _____

(b) Name the biggest natural forest in Uganda.

(c) Identify one problem facing forests.

27. (a) Who is a child?

(b) Identify two acts of child abuse in Uganda.

(i) _____

(ii) _____

(c) State one cause of street children in Uganda.

28. **Or:-** (a) What is a prayer?

(b) Mention two prayers performed daily by a Muslim.

(i) _____

(ii) _____

(c) Why is it important to pray daily?

29. **Or:-** (a) Name the first and last prophet in Islam.

(i) First _____

(ii) Last _____

(b) What was the worker of prophets?

(i) _____

(ii) _____

30. **Both:-**

(a) Identify two behaviour that destroy/spoil relationship among people.

(i) _____

(ii) _____

(b) State two behaviour that can build good relationship among people.

(i) _____

(ii) _____

KING FAHAD

INQUIRIES:

ENGLISH	MATHEMATICS	SCIENCE	SOCIAL STUDIES
0702803838 0752650466 0755151453	0751496659 0705194277	0759551042 0703884847 0702322253 0773250150	0772912455 0756441780/0712959424 0756748597 0788346329 0701771380

THEOLOGY:

QURAN	LUGHA	FIQHU & TARBIA
0701880005 0705405152	0751467212 0702199708	0752867638 0755831209

KING FAHAD