

PRIMARY ONE MATHEMATICS WEEKEND HOME WORK

NAME: _____

1. Subtract

$$\bigcirc \bigcirc \bigcirc \bigcirc - \bigcirc \bigcirc = \underline{\hspace{2cm}}$$

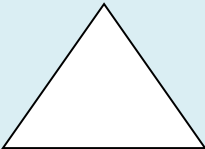
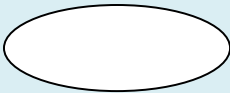

2. Arrange starting with the smallest.

6 , 8 , 2 , 7

3. Work out:

$$- + - = \underline{\hspace{2cm}}$$

4. Name the shapes.

		
_____	_____	_____

5. Write in words.

a) 2 _____ b) 6 _____ c) 12 _____