

KAMPALA JUNIOR ACADEMY

ASSESSMENT EXAMINATION

PRIMARY TWO

MATHEMATICS



NAME: _____ CLASS: _____


1. Add:

$$5 + 4 = \underline{\hspace{2cm}}$$

2. Write the number between.

9, , 11

3. Name the set.



4. Fill in the missing number.


20, 19,


5. Name this shape.



6. Write the third day of the week.

7. Shade the given fractions.

a).  = $\frac{1}{2}$

b).  = $\frac{2}{4}$

8. Write the number names.

26 = _____

10 = _____

42 = _____

9. Fill in the missing hundred, tens and ones.

a). 246 = ____ hundreds ____ tens ____ ones

b). 77 = ____ tens ____ ones


c). ____ = 5 tens 4 ones

10. Work out:

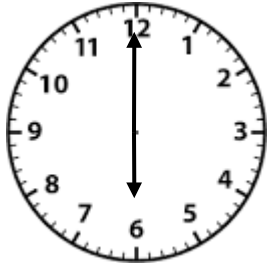
a). $\frac{3}{7} + \frac{1}{7} =$

b). $\frac{2}{8} + \frac{1}{8} + \frac{3}{8} =$

11. Tell the time.



a). It is _____ o'clock.



b). It is _____ o'clock.

12. Complete the abacus.

a). H T O

=402

b). H T O

○	○	○
○	○	○
○	○	○
○	○	○

13. Subtract correctly.

a). $9 - 3 =$ _____

b).
$$\begin{array}{r} 44 \\ -11 \\ \hline \end{array}$$

c). Mary had 8 mats. He sold off 3 mats. How many mats did he remain with?

14. Multiply:

a).
$$\begin{array}{r} 4 \\ \times 2 \\ \hline \end{array}$$

b). One rabbit has 2 eyes. How many eyes do 5 rabbits have?

15. Add:

a). 10 sweets + 2 sweets = _____ sweets

b). A boy has 6 pencils and a girl has 5 pencils. How many pencils do they have altogether?

16. Circle the bigger number.

a). 80, 25, 08

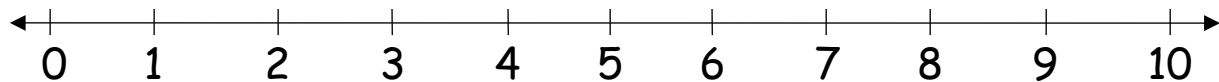
b). 4, 9, 6

17. Add using a numberline.

a). $4 + 0 =$ _____



b). $5 + 4 =$ _____



18. Compare.

Use heavier/lighter



stone



leaf

A leaf is _____.

A stone is _____.

19. Write the number symbol.

a). sixty one _____

b). sixteen _____

c). forty _____

20. Count in twos

a). 2^{oo} 4^{oo} _____

b). 10^{oo} 12^{oo} _____

21. Match months of the year to their number of days.

October

28/29 days

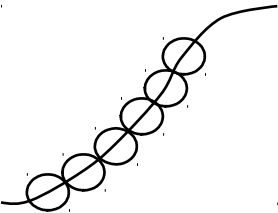
February

30 days

April

31 days

22. Count and write in words.

a).  = _____

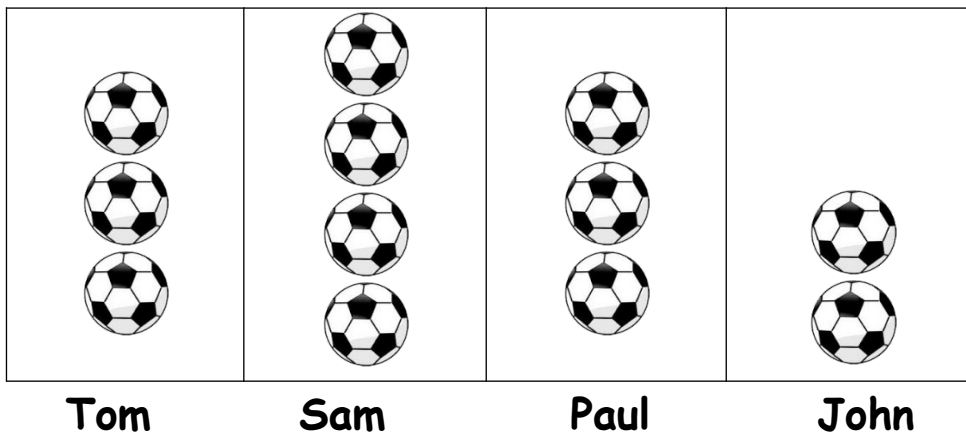
b). $\begin{array}{cccc} * & * & * & * \\ * & * & * & * \\ * & * & * & * \end{array}$ = _____

23. Match correctly.

$3 + 3$
2×4
$9 - 7$
$10 \div 2$

5
2
8
6

24. The graph below shows the number of balls picked by the four brothers.



a). Who picked most balls?

b). Who picked the least number of balls?

c). How many balls were picked altogether?
