



HORMISDALLEN SCHOOLS EXAMINATIONS BOARD
SOCIAL STUDIES WITH RELIGIOUS EDUCATION
ASSESSMENT SET ONE – 2021
PRIMARY SIX

Name: _____

Branch: _____ **Stream:** _____

INSTRUCTIONS:

- 1. Attempt all questions.*
- 2. Any drawing must be done in pencil.*
- 3. You must use a very good handwriting.*

Examiner's Use Only	
SECTION A	
SECTION B	
TOTAL	

TIME ALLOWED: 2hours 15minutes

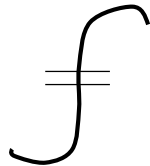
SECTION A (40 MARKS)

1. State any one **element** of weather.

2. What economic activity is carried out by most people in Uganda?

3. Identify one stage of the Stone Age period.

4. Name the map symbol shown below;



5. Write down any one tree species found in natural forests.

6. Why is "**water**" normally regarded as a **basic need**?

7. How is Lake Katwe different from **Lake Victoria**?

8. Of what importance is a compass on a given map?

9. In which one way is Uganda similar to Rwanda as neighbouring countries?

10. Write **D.R.C** in full.

11. Mention any one mineral mined in Uganda.

12. Why does the government of Uganda discourage people from clearing wetlands?

13. Give any one product from tobacco.

14. Write down any one **modern** method used to preserve fish in East Africa.

15. Mention any one organ of the **East Africa community (E.A.C)**.

16. State one reason why the government encourages people to pay taxes.

17. Identify any one **pastoral** tribe in East Africa.

18. Why was the **Imperial British East Africa Company (IBEACO)** sent to East Africa?

19. State any one disadvantage of **subsistence** farming.

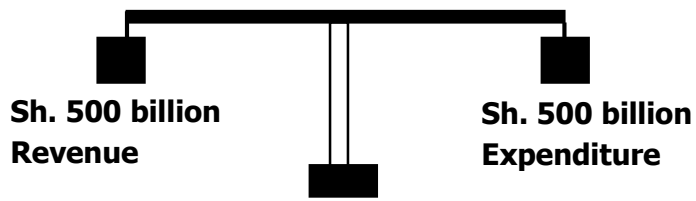
20. In which one way is **Dr. L.S.B. Leakey** remembered in the history of East Africa?

21. State any one role of a clan leader in the society.

22. Apart from Uganda and Kenya, mention any other country crossed by the Equator.

23. Mention any one **special group** represented in Uganda's parliament today.

24. What type of budget is represented below?



25. State any one role of the **Uganda Revenue Authority (URA)**.

26. Identify any one feature formed through faulting process in East Africa.

27. Name the **ethnic group** that settled in the **interlacustrine** region in East Africa.

28. Write one correct sentence about '**Miombo woodland**'.

29. Give one reason why wild animals should be kept in **game parks**.

30. Which group of people founded **Bunyoro-Kitara Empire**?

31. Why is Karamoja region having a **low population**?

32. Name the largest **fresh water lake** in East Africa.

33. State one way in which the Local Council Committee (L.C 1) can be helpful to local people.

34. Explain why most people in East Africa prefer road transport to air transport.

35. Suggest any one way rural people can be helped to get market for their products.

For questions 36-40, answer EITHER (Christianity) OR (Islam) BUT not both in a number.

36. **EITHER:** Who is considered as the head of the church among Christians?

- OR:** Who is considered as the greatest prophet of Islam?

37. **EITHER:** Point out one way through which Christians worship God.

- OR:** Point out one way through which Muslims worship Allah.

38. **EITHER:** Why should a good Christian read the Bible?

- OR:** Why should a good Muslim read the Qur'an?

39. **EITHER:** Apart from **baptism**, mention any one other sacrament in Christianity.

OR: Apart from **belief** in one God (Allah), mention any one other article of faith.

40. **Either:** Give one reason why **Cain** killed his brother **Abel**.

OR: Give one reason why Adam was chased out of the Garden of Eden.

SECTION B (60 MARKS)

41. a) What is a "**forest**"?

b) State any one danger of a forest to people around it.

c) What term is used to describe the clearing of many trees from forests?

d) Write **N.F.A** in full.

42. a) Identify the following lakes in Uganda;

(i) **Deepest lake** _____

(ii) **Most swampy lake** _____

b) State any two importance of lakes to people.

(i) _____

(ii) _____

43. a) Give the traditional title of the following leaders in Uganda.

(i) **Bunyoro Kingdom** _____

(ii) **Ankole Kingdom** _____

b) State any two advantages of kingdoms to people.

(i) _____

(ii) _____

44. a) Identify any two irrigation schemes in Uganda.

(i) _____

(ii) _____

b) State any two advantages of an irrigation scheme set up in an area.

(i) _____

(ii) _____

45. a) What type of rainfall is received in the following areas of East Africa?

(i) **Highland areas** _____

(ii) **Forested areas** _____

b) Suggest any two ways rainfall can be dangerous to people.

(i) _____

(ii) _____

46. a) What raw material is used to make the following products?

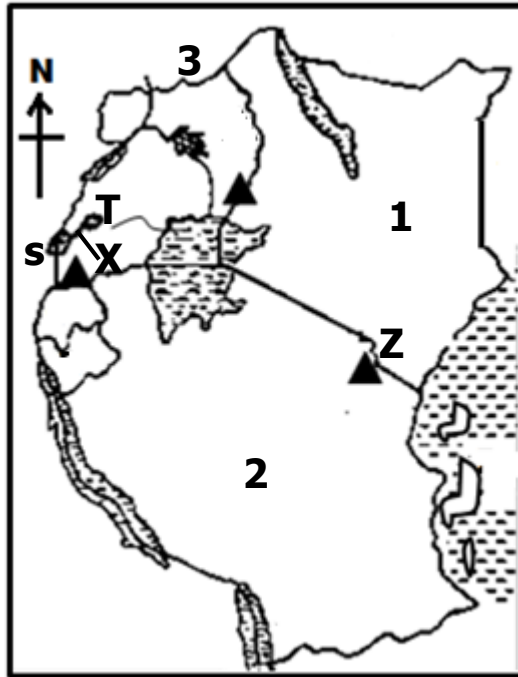
(i) **cement**

(ii) **clothes**

b) Identify one district where a cement factory is located in Uganda.

c) Apart from **cement** and **clothes**, mention any one other products made in Uganda's industries.

47. Study the map of East Africa carefully and answer questions that follow.



a) Give one similarity between countries **1** and **2** in terms of their location.

b) Identify the water channel marked **X** that joins lakes **S** and **T**.

c) Mention the capital city of country marked **3**.

d) Why is there permanent snow at the peak of mountain marked **Z**?

48. a) Mention any two types of fish caught in East Africa.
 (i) _____ (ii) _____
- b) State any one problem faced by fishermen in Uganda's lakes/rivers.

- c) How is **fish smoking** dangerous to our environment?

49. Match the following terms correctly.

- | | |
|-----------------------|---------------------------------------|
| (i) Escarments | - lowland between two hills/highlands |
| (ii) Valley | - height of land above sea level. |
| (iii) Plain | - steep slopes of a rift valley. |
| (iv) Plateau | - a generally flat land. |
| | - a flat topped piece of land. |

- (i) **Escarpment** - _____
- (ii) **Valley** - _____
- (iii) **Plain** - _____
- (iv) **Plateau** - _____

50. a) Why are the following areas remembered in the history of East Africa?
 (i) **Bahr-el-Ghazel** _____
 (ii) **Cameroon highlands** _____
- b) Identify any two tribes that belong to the River-lake Niloties in Uganda.
 (i) _____
 (ii) _____

For questions 51-54, answer EITHER (Christianity) OR (Islam) BUT not both in a number.

51. **Either:** a) Give one way in which the following towns are important in Christian history.
 (i) **Jerusalem**

- (ii) **Bethlehem**

- b) What important miracles did Jesus perform in the following places?
 (i) **Cana**

- (ii) **Galilee**

OR: a) Give one way in which the following towns are important in the Islamic history.

(i) **Mecca**

(ii) **Medina**

b) What important divine books were revealed to these prophets of Islam?

(i) **Prophet Musa** _____

(ii) **Prophet Isa** _____

52. **Either:** a) Write down any two **Gospel books** in the Holy Bible.

(i) _____ (ii) _____

b) In which part of the Holy Bible are Gospel books found?

c) Give the meaning of the word '**Gospel**'.

OR: a) Write down any two punishments Allah gave to Adam for disobedience.

(i) _____

(ii) _____

b) In which place did Allah put Adam after creation?

c) What advice can you give to a disobedient Muslim in your community?

53. **Either:** a) Write down any two examples of **evil acts** among Christians today?

(i) _____

(ii) _____

b) Suggest any two causes of suffering among Christians.

(i) _____

(ii) _____

OR: a) Write down any two examples of **evil acts** among Muslims today.

(i) _____

(ii) _____

b) Suggest any two causes of suffering among Muslims.

(i) _____

(ii) _____

54. **Either:** Match the following terms correctly.

- (i) **Baptism** - body of believers in Christ as saviour.
- (ii) **Holy Trinity** - beginning
- (iii) **Church** - fasting period for Christians.
- (iv) **Genesis** - first sacrament in Christianity
- three persons in one God.

- (i) **Baptism** - _____
- (ii) **Holy Trinity** - _____
- (iii) **Church** - _____
- (iv) **Genesis** - _____

OR: Match the following terms correctly.

- (i) **Shahadat** - migration of Prophet Muhammad from Mecca to Medina.
- (ii) **Jihad** - ascension of Prophet Muhammad to heaven.
- (iii) **Hejira** - belief in one God/Allah.
- (iv) **Ramadhan** - holy war against unbelievers.
- fasting period for Muslims.

- (i) **Shahadat** - _____
- (ii) **Jihad** - _____
- (iii) **Hejira** - _____
- (iv) **Ramadhan** - _____

55. **FOR BOTH:**

a) State any two common **beliefs** among Christians and Muslims.

- (i) _____
- (ii) _____

a) Give any two ways through which Christians/Muslims communicate to God.

- (i) _____
- (ii) _____

END

